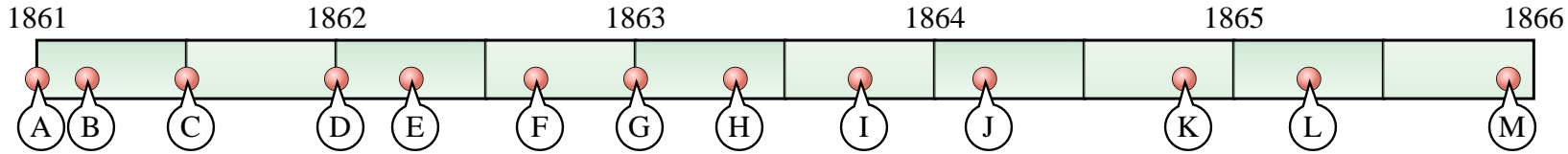




Determine which letter best represents the location the event should occur on the timeline. Not all letters will be used.

The American Civil War



- 1) Ulysses S. Grant is given control of all union (the north) troops. (Mar. 1864)
- 2) General Lee surrenders, effectively ending the civil war. (Apr. 1865)
- 3) Abraham Lincoln is re-elected as president of the United States. (Nov. 1864)
- 4) Confederate (the south) troops fire on Fort Sumter. The first hostilities of the civil war. (Jul. 1861)
- 5) Emancipation Proclamation is issued, eventually freeing all slaves. (Jan. 1863)
- 6) Union (the north) troops gain control of the Mississippi River. (Apr. 1862)
- 7) Lincoln is sworn in as president. (Mar. 1861)
- 8) The south secedes. (Jan. 1861)
- 9) The battle of Antietam. (Sep. 1862)
- 10) General Stonewall Jackson (confederate) is mortally wounded by one of his men during a battle. (May 1863)

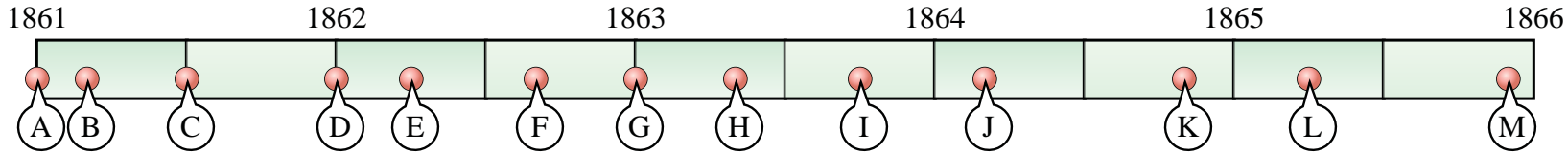
Answers

1. _____
2. _____
3. _____
4. _____
5. _____
6. _____
7. _____
8. _____
9. _____
10. _____



Determine which letter best represents the location the event should occur on the timeline. Not all letters will be used.

The American Civil War



- 1) Ulysses S. Grant is given control of all union (the north) troops. (Mar. 1864) **J**
- 2) General Lee surrenders, effectively ending the civil war. (Apr. 1865) **L**
- 3) Abraham Lincoln is re-elected as president of the United States. (Nov. 1864) **K**
- 4) Confederate (the south) troops fire on Fort Sumter. The first hostilities of the civil war. (Jul. 1861) **C**
- 5) Emancipation Proclamation is issued, eventually freeing all slaves. (Jan. 1863) **G**
- 6) Union (the north) troops gain control of the Mississippi River. (Apr. 1862) **E**
- 7) Lincoln is sworn in as president. (Mar. 1861) **B**
- 8) The south secedes. (Jan. 1861) **A**
- 9) The battle of Antietam. (Sep. 1862) **F**
- 10) General Stonewall Jackson (confederate) is mortally wounded by one of his men during a battle. (May 1863) **H**

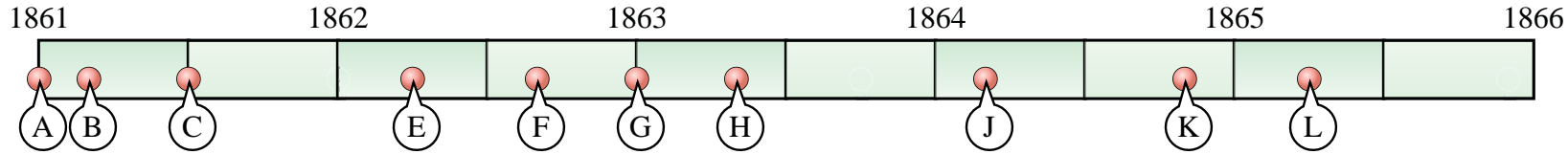
Answers

1. **J**
2. **L**
3. **K**
4. **C**
5. **G**
6. **E**
7. **B**
8. **A**
9. **F**
10. **H**



Determine which choice best represents the location the event should occur on the timeline.

The American Civil War



- 1) Ulysses S. Grant is given control of all union (the north) troops. (Mar. 1864)
H or J
- 2) General Lee surrenders, effectively ending the civil war. (Apr. 1865)
J or L
- 3) Abraham Lincoln is re-elected as president of the United States. (Nov. 1864)
B or K
- 4) Confederate (the south) troops fire on Fort Sumter. The first hostilities of the civil war. (Jul. 1861)
C or G
- 5) Emancipation Proclamation is issued, eventually freeing all slaves. (Jan. 1863)
G or J
- 6) Union (the north) troops gain control of the Mississippi River. (Apr. 1862)
E or H
- 7) Lincoln is sworn in as president. (Mar. 1861)
B or F
- 8) The south secedes. (Jan. 1861)
C or A
- 9) The battle of Antietam. (Sep. 1862)
H or F
- 10) General Stonewall Jackson (confederate) is mortally wounded by one of his men during a battle. (May 1863)
H or B

Answers

1. _____
2. _____
3. _____
4. _____
5. _____
6. _____
7. _____
8. _____
9. _____
10. _____