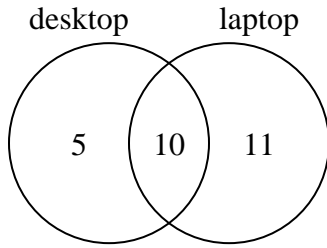




Use the diagram to solve each problem.

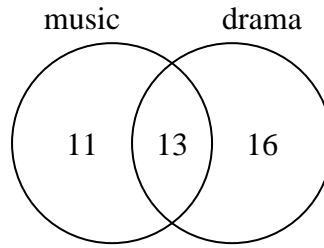
Answers

- 1) The diagram below shows the types of computers students owned.



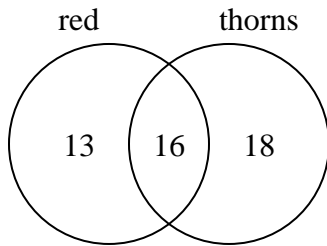
How many students owned a desktop computer?

- 2) The diagram below shows the classes students are taking.



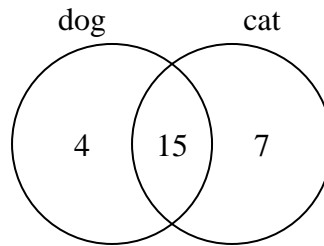
How many students are taking drama?

- 3) The diagram below shows the attributes of flowers in a flower shop.



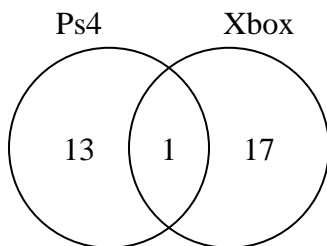
How many flowers were not red with thorns?

- 4) The diagram below shows the pets students in a class owned.



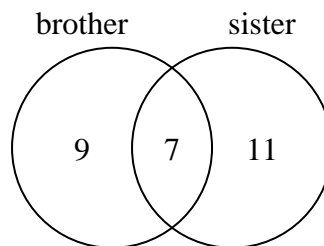
How many people had only a cat?

- 5) The diagram below shows the game consoles students owned.



How many people owned a Ps4?

- 6) The diagram below shows the gender of students siblings.



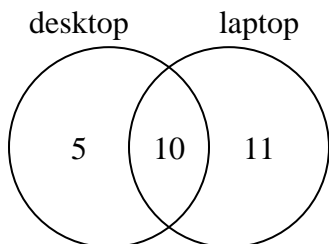
How many students did not have both a brother and a sister?

- 1. _____
- 2. _____
- 3. _____
- 4. _____
- 5. _____
- 6. _____



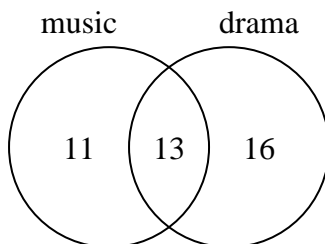
Use the diagram to solve each problem.

- 1) The diagram below shows the types of computers students owned.



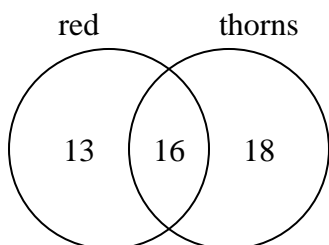
How many students owned a desktop computer?

- 2) The diagram below shows the classes students are taking.



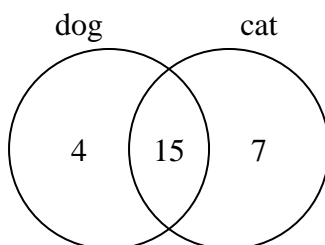
How many students are taking drama?

- 3) The diagram below shows the attributes of flowers in a flower shop.



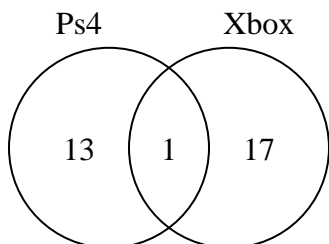
How many flowers were not red with thorns?

- 4) The diagram below shows the pets students in a class owned.



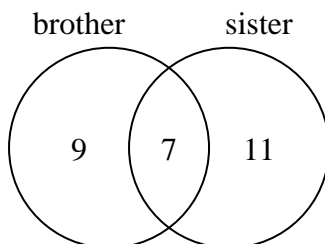
How many people had only a cat?

- 5) The diagram below shows the game consoles students owned.



How many people owned a Ps4?

- 6) The diagram below shows the gender of students siblings.



How many students did not have both a brother and a sister?

Answers

1. 15

2. 29

3. 31

4. 7

5. 14

6. 20