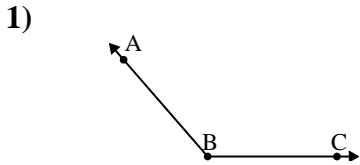




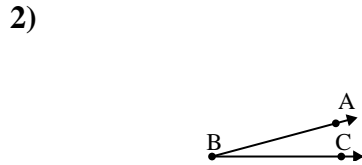
Solve each problem.

Answers



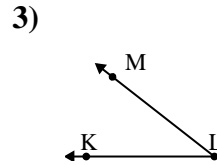
Which choice best represents $\angle ABC$?

- A. 107°
- B. 131°
- C. 26°
- D. 57°



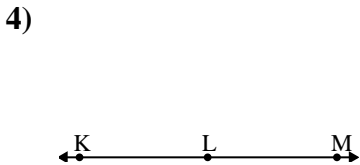
Which choice best represents $\angle ABC$?

- A. 154°
- B. 15°
- C. 49°
- D. 76°



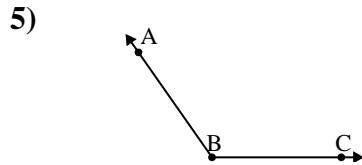
Which choice best represents $\angle KLM$?

- A. 38°
- B. 81°
- C. 175°
- D. 107°



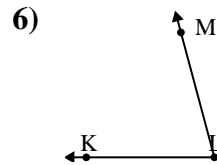
Which choice best represents $\angle KLM$?

- A. 156°
- B. 71°
- C. 180°
- D. 25°



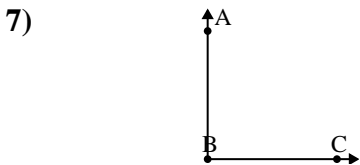
Which choice best represents $\angle ABC$?

- A. 58°
- B. 33°
- C. 4°
- D. 125°



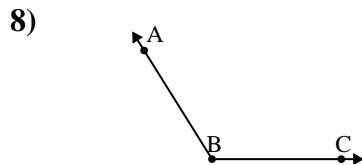
Which choice best represents $\angle KLM$?

- A. 29°
- B. 172°
- C. 7°
- D. 75°



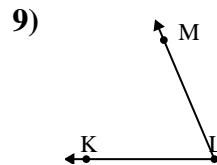
Which choice best represents $\angle ABC$?

- A. 69°
- B. 127°
- C. 3°
- D. 90°



Which choice best represents $\angle ABC$?

- A. 122°
- B. 84°
- C. 37°
- D. 158°



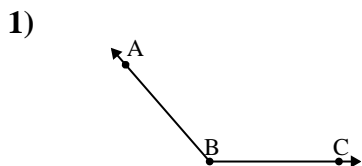
Which choice best represents $\angle KLM$?

- A. 122°
- B. 165°
- C. 67°
- D. 143°

1. _____
2. _____
3. _____
4. _____
5. _____
6. _____
7. _____
8. _____
9. _____

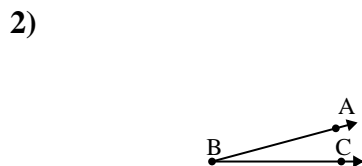


Solve each problem.



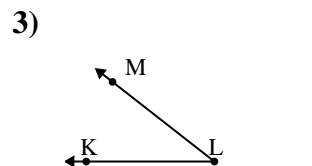
Which choice best represents $\angle ABC$?

- A. 107°
- B. 131°
- C. 26°
- D. 57°



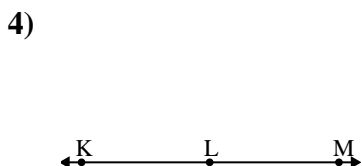
Which choice best represents $\angle ABC$?

- A. 154°
- B. 15°
- C. 49°
- D. 76°



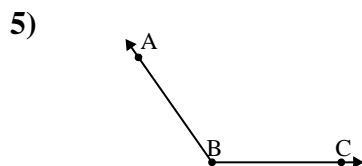
Which choice best represents $\angle KLM$?

- A. 38°
- B. 81°
- C. 175°
- D. 107°



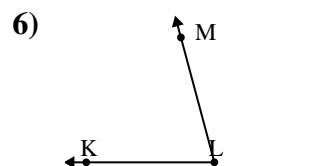
Which choice best represents $\angle KLM$?

- A. 156°
- B. 71°
- C. 180°
- D. 25°



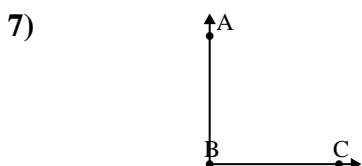
Which choice best represents $\angle ABC$?

- A. 58°
- B. 33°
- C. 4°
- D. 125°



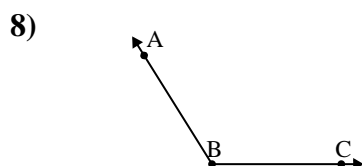
Which choice best represents $\angle KLM$?

- A. 29°
- B. 172°
- C. 7°
- D. 75°



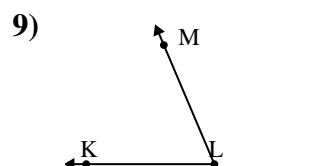
Which choice best represents $\angle ABC$?

- A. 69°
- B. 127°
- C. 3°
- D. 90°



Which choice best represents $\angle ABC$?

- A. 122°
- B. 84°
- C. 37°
- D. 158°



Which choice best represents $\angle KLM$?

- A. 122°
- B. 165°
- C. 67°
- D. 143°

Answers

- 1. **B**
- 2. **B**
- 3. **A**
- 4. **C**
- 5. **D**
- 6. **D**
- 7. **D**
- 8. **A**
- 9. **C**