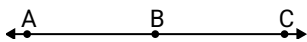




Solve each problem.

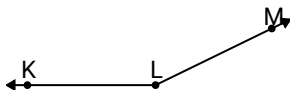
Answers

1)

Which choice best represents $\angle ABC$?

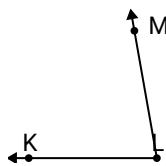
- A. 121°
- B. 31°
- C. 75°
- D. 180°

2)

Which choice best represents $\angle KLM$?

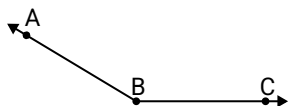
- A. 154°
- B. 50°
- C. 6°
- D. 112°

3)

Which choice best represents $\angle KLM$?

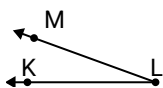
- A. 174°
- B. 59°
- C. 80°
- D. 102°

4)

Which choice best represents $\angle ABC$?

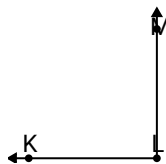
- A. 5°
- B. 85°
- C. 121°
- D. 149°

5)

Which choice best represents $\angle KLM$?

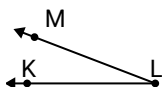
- A. 151°
- B. 44°
- C. 104°
- D. 20°

6)

Which choice best represents $\angle KLM$?

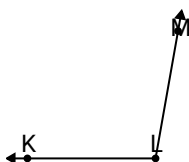
- A. 60°
- B. 113°
- C. 156°
- D. 90°

7)

Which choice best represents $\angle KLM$?

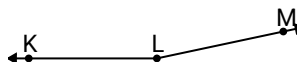
- A. 21°
- B. 59°
- C. 99°
- D. 121°

8)

Which choice best represents $\angle KLM$?

- A. 100°
- B. 124°
- C. 170°
- D. 11°

9)

Which choice best represents $\angle KLM$?

- A. 43°
- B. 13°
- C. 168°
- D. 79°

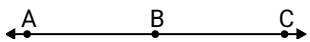
- 1. _____
- 2. _____
- 3. _____
- 4. _____
- 5. _____
- 6. _____
- 7. _____
- 8. _____
- 9. _____



Solve each problem.

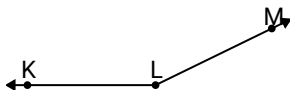
Answers

1)

Which choice best represents $\angle ABC$?

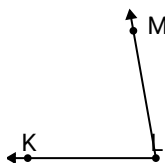
- A. 121°
- B. 31°
- C. 75°
- D. 180°

2)

Which choice best represents $\angle KLM$?

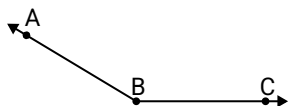
- A. 154°
- B. 50°
- C. 6°
- D. 112°

3)

Which choice best represents $\angle KLM$?

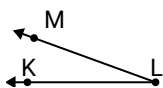
- A. 174°
- B. 59°
- C. 80°
- D. 102°

4)

Which choice best represents $\angle ABC$?

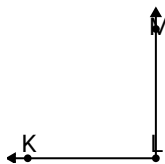
- A. 5°
- B. 85°
- C. 121°
- D. 149°

5)

Which choice best represents $\angle KLM$?

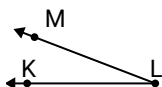
- A. 151°
- B. 44°
- C. 104°
- D. 20°

6)

Which choice best represents $\angle KLM$?

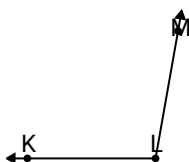
- A. 60°
- B. 113°
- C. 156°
- D. 90°

7)

Which choice best represents $\angle KLM$?

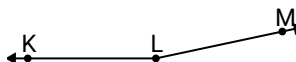
- A. 21°
- B. 59°
- C. 99°
- D. 121°

8)

Which choice best represents $\angle KLM$?

- A. 100°
- B. 124°
- C. 170°
- D. 11°

9)

Which choice best represents $\angle KLM$?

- A. 43°
- B. 13°
- C. 168°
- D. 79°

- 1. **D**
- 2. **A**
- 3. **C**
- 4. **D**
- 5. **D**
- 6. **D**
- 7. **A**
- 8. **A**
- 9. **C**