



Fill in the blanks to find the amounts.

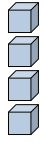
Ex)

1)

2)

Answers

Ex. 4



0

4

tens

ones



tens

ones



tens

ones

1. _____

2. _____

3. _____

4. _____

3)

4)

5)

5. _____

6. _____

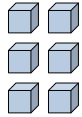
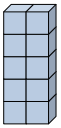
7. _____

8. _____

9. _____

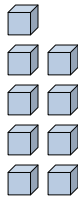
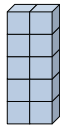
10. _____

11. _____



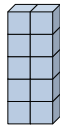
tens

ones



tens

ones



tens

ones

6)

7)

8)



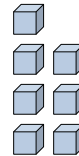
tens

ones



tens

ones



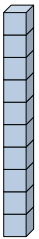
tens

ones

9)

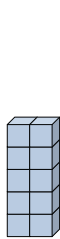
10)

11)



tens

ones



tens

ones



tens

ones

