





Use the blocks to determine the total quantities.



5 hundreds = 50 tens = 500 ones

Answers

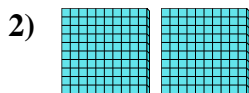
Ex. 5 50 500



_____ hundreds = _____ tens = _____ ones

1. _____


2. _____



_____ hundreds = _____ tens = _____ ones

3. _____

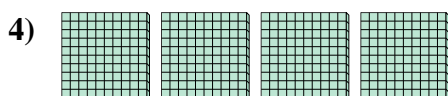
4. _____



_____ hundreds = _____ tens = _____ ones

5. _____

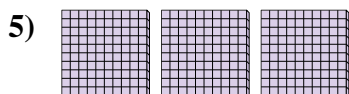
6. _____



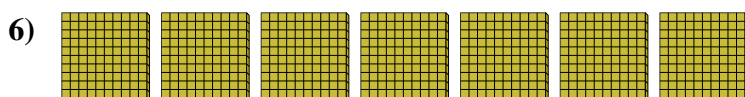
_____ hundreds = _____ tens = _____ ones

7. _____

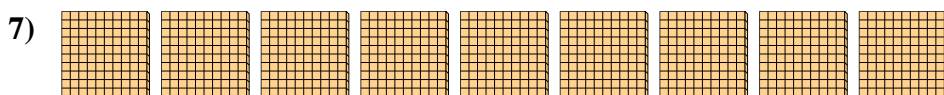
8. _____




_____ hundreds = _____ tens = _____ ones



_____ hundreds = _____ tens = _____ ones




_____ hundreds = _____ tens = _____ ones




_____ hundreds = _____ tens = _____ ones



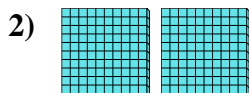
Use the blocks to determine the total quantities.




5 hundreds = 50 tens = 500 ones



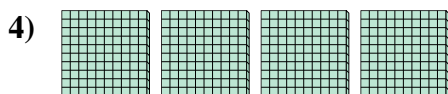
1 hundreds = 10 tens = 100 ones



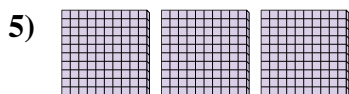
2 hundreds = 20 tens = 200 ones




8 hundreds = 80 tens = 800 ones



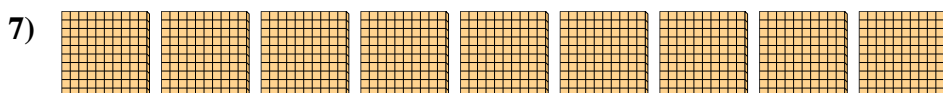
4 hundreds = 40 tens = 400 ones



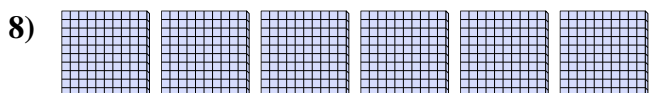
3 hundreds = 30 tens = 300 ones



7 hundreds = 70 tens = 700 ones



9 hundreds = 90 tens = 900 ones



6 hundreds = 60 tens = 600 ones

Answers

Ex. 5 50 500

1. 1 10 100

2. 2 20 200

3. 8 80 800

4. 4 40 400

5. 3 30 300

6. 7 70 700

7. 9 90 900

8. 6 60 600