




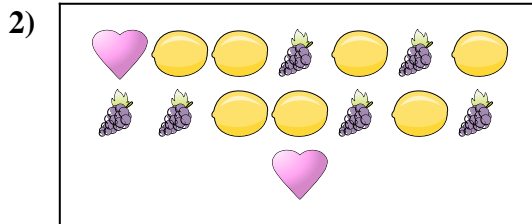
Compare the number of shapes.



Are there less or less ?

A.

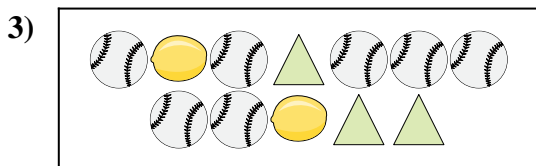
B.



Are there less or less ?

A.

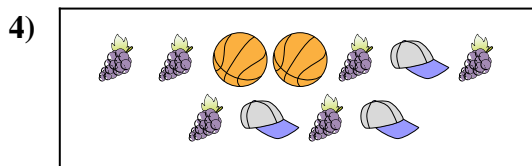
B.



Are there less or less ?

A.

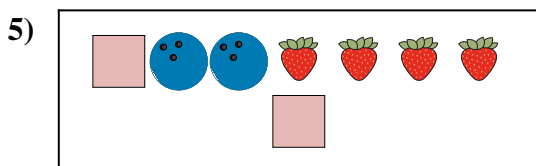
B.



Are there less or less ?

A.


B.



Are there more or more ?

A.

B.



Are there less or less ?

A.

B.

**Answers**

1. \_\_\_\_\_

2. \_\_\_\_\_

3. \_\_\_\_\_


4. \_\_\_\_\_

5. \_\_\_\_\_

6. \_\_\_\_\_




Compare the number of shapes.



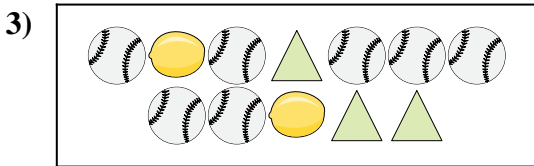
Are there less or less ?

- A.
- B.




Are there less or less ?

- A.
- B.



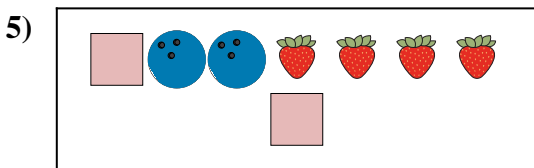
Are there less or less ?

- A.
- B.




Are there less or less ?

- A.
- B.



Are there more or more ?

- A.
- B.



Are there less or less ?

- A.
- B.

**Answers**

- 1.     **A**
- 2.     **B**
- 3.     **A**
- 4.     **A**
- 5.     **A**
- 6.     **A**