






Compare the number of shapes.

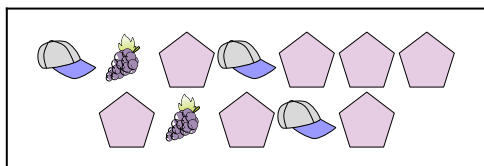



1)

Are there more  or more ?A. B. 

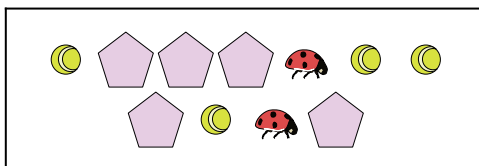
2)

Are there less  or less ?A. B. 

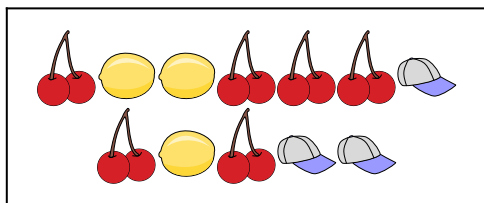

3)

Are there less  or less ?A. B. 



4)

Are there more  or more ?A. B. 

5)

Are there less  or less ?A. B. 

6)

Are there more  or more ?A. B. **Answers**

1. \_\_\_\_\_

2. \_\_\_\_\_

3. \_\_\_\_\_

4. \_\_\_\_\_



5. \_\_\_\_\_

6. \_\_\_\_\_




Compare the number of shapes.

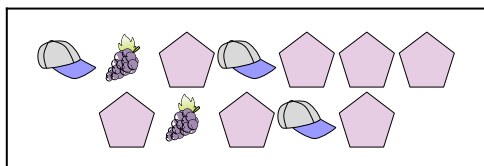




1)

Are there more  or more ?A. B. 

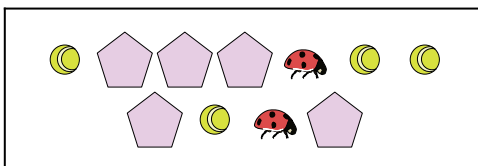
2)

Are there less  or less ?A. B. 

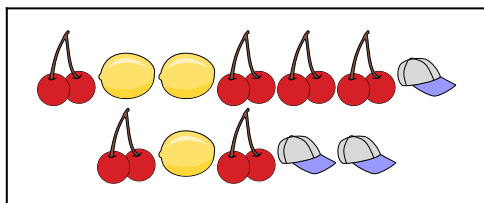

3)

Are there less  or less ?A. B. 



4)

Are there more  or more ?A. B. 

5)

Are there less  or less ?A. B. 

6)

Are there more  or more ?A. B. **Answers**1. **A**2. **A**3. **B**4. **B**5. **B**6. **B**