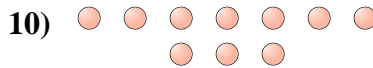
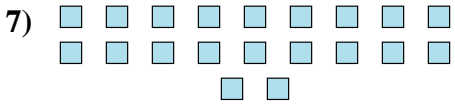
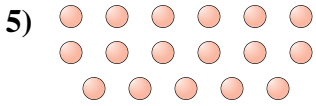
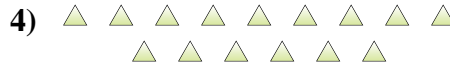
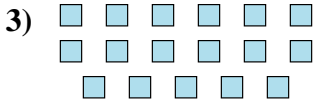
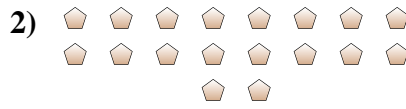




Determine if the number of shapes is even or odd.

Answers



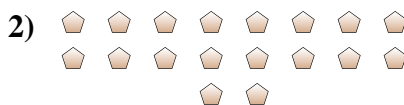
1. \_\_\_\_\_
2. \_\_\_\_\_
3. \_\_\_\_\_
4. \_\_\_\_\_
5. \_\_\_\_\_
6. \_\_\_\_\_
7. \_\_\_\_\_
8. \_\_\_\_\_
9. \_\_\_\_\_
10. \_\_\_\_\_



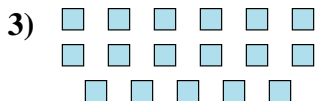
Determine if the number of shapes is even or odd.



19



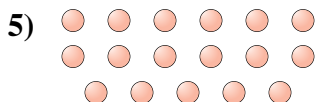
18



17



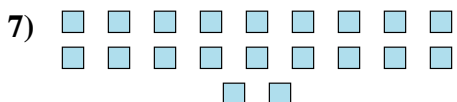
15



17



13



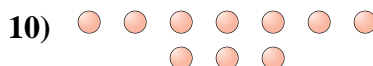
20



7



6



10

Answers

1. odd

2. even

3. odd

4. odd

5. odd

6. odd

7. even

8. odd

9. even

10. even