
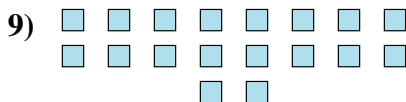




Determine if the number of shapes is even or odd.



Answers

- 1. _____
- 2. _____
- 3. _____
- 4. _____
- 5. _____
- 6. _____
- 7. _____
- 8. _____
- 9. _____
- 10. _____



Determine if the number of shapes is even or odd.



5



12



6



8



5



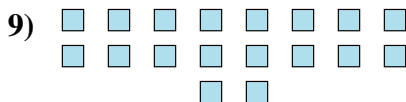
5




5



9



18



17

Answers

1. odd

2. even

3. even

4. even

5. odd

6. odd

7. odd

8. odd

9. even

10. odd