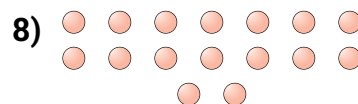
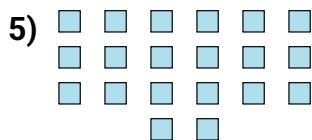
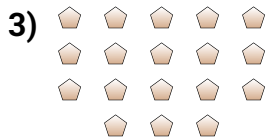
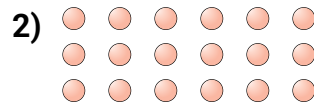




Determine if the number of shapes is even or odd.

Answers



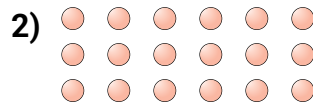
1. _____
2. _____
3. _____
4. _____
5. _____
6. _____
7. _____
8. _____
9. _____
10. _____



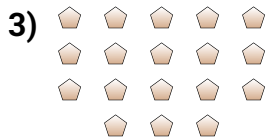
Determine if the number of shapes is even or odd.



10



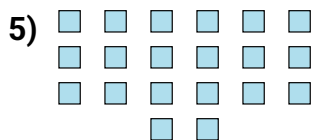
18



18



8



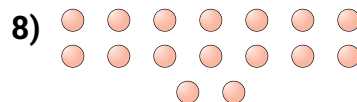
20



6



8



16



20



8

Answers

1. even
2. even
3. even
4. even
5. even
6. even
7. even
8. even
9. even
10. even