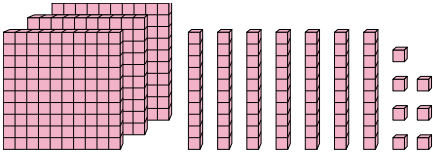




Find the value each set of blocks represents.

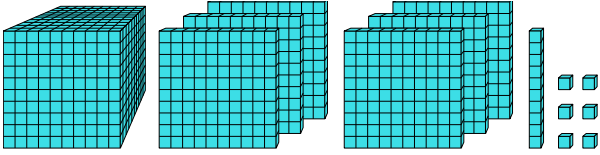
Answers

1)



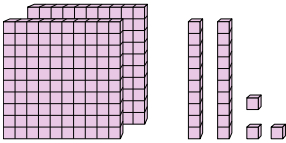
1. \_\_\_\_\_

2)



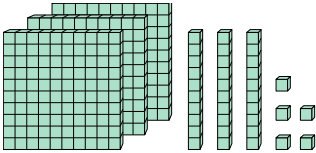
2. \_\_\_\_\_

3)



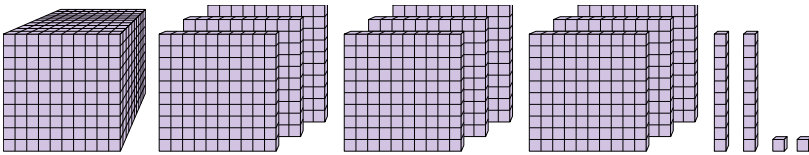
3. \_\_\_\_\_

4)



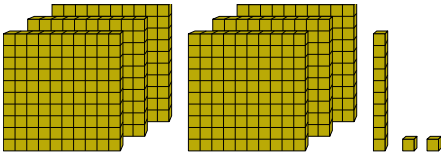
4. \_\_\_\_\_

5)



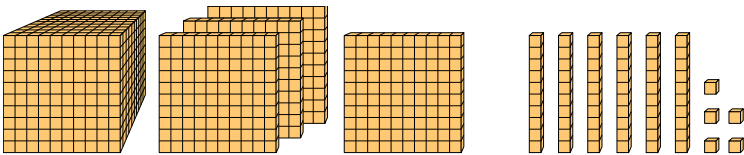
5. \_\_\_\_\_

6)



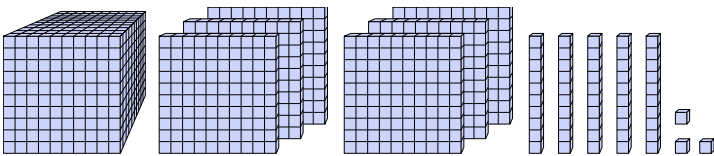
6. \_\_\_\_\_

7)



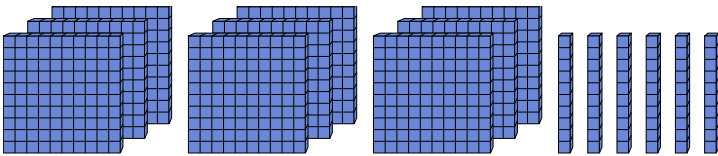
7. \_\_\_\_\_

8)



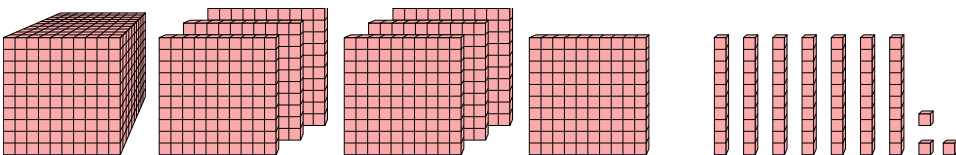
8. \_\_\_\_\_

9)



9. \_\_\_\_\_

10)



10. \_\_\_\_\_



Find the value each set of blocks represents.

1)

2)

3)

4)

5)

6)

7)

8)

9)

10)

Answers

1. 377
2. 1,616
3. 223
4. 335
5. 1,922
6. 612
7. 1,465
8. 1,653
9. 960
10. 1,773