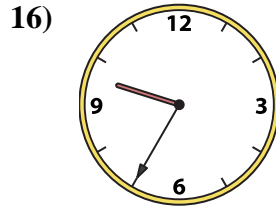
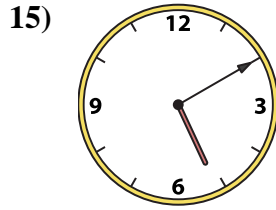
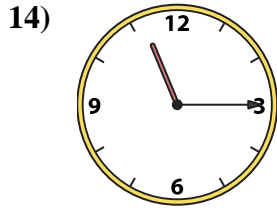
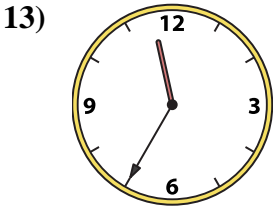
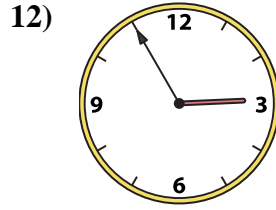
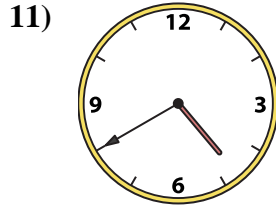
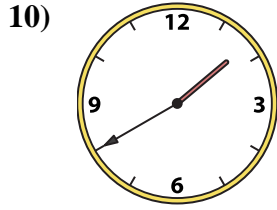
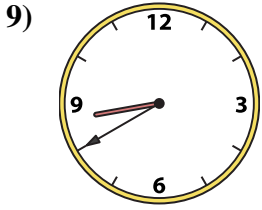
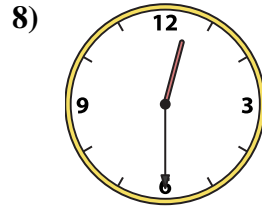
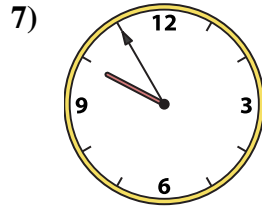


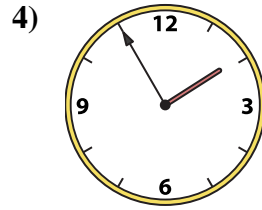
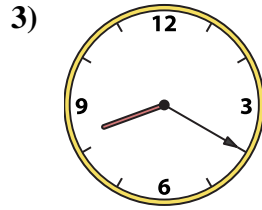
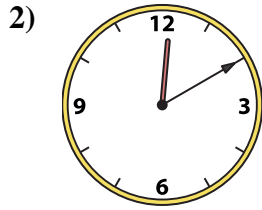
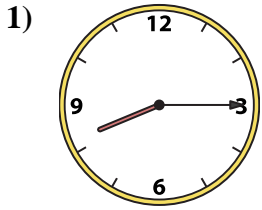




Match the analog clock to the digital clock.

Answers



1. _____
2. _____
3. _____
4. _____
5. _____
6. _____
7. _____
8. _____
9. _____
10. _____
11. _____
12. _____
13. _____
14. _____
15. _____
16. _____

A. **1:55**

B. **11:15**

C. **11:35**

D. **8:15**

E. **2:05**

F. **1:40**

G. **9:55**

H. **12:30**

I. **12:10**

J. **5:10**

K. **9:35**

L. **2:55**

M. **4:40**

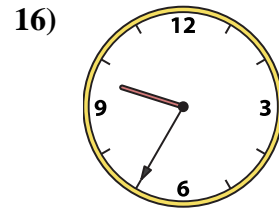
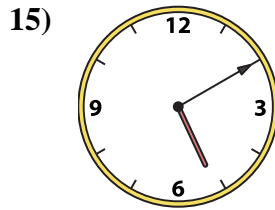
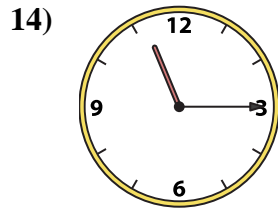
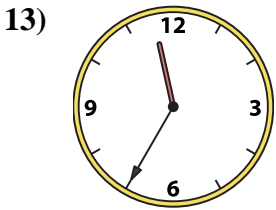
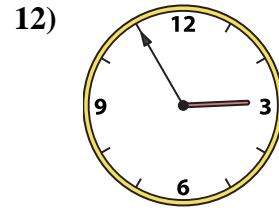
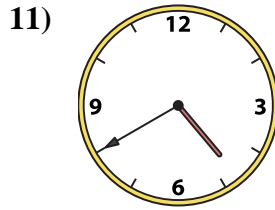
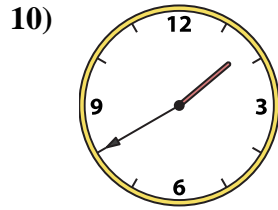
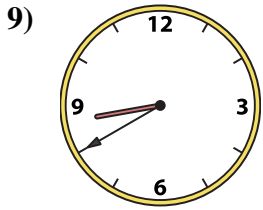
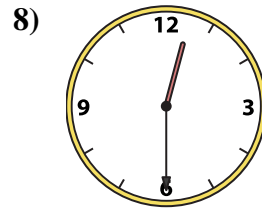
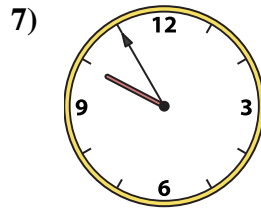
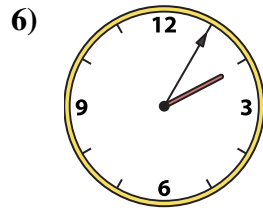
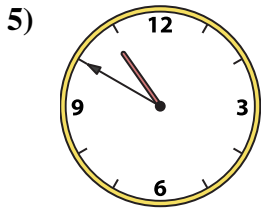
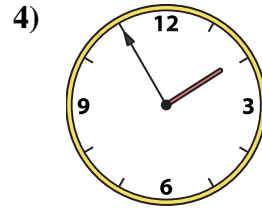
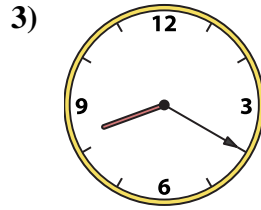
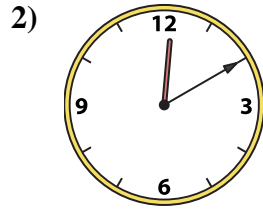
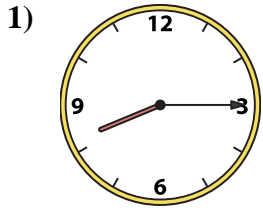
N. **10:50**

O. **8:40**

P. **8:20**



Match the analog clock to the digital clock.



A. 1:55

B. 11:15

C. 11:35

D. 8:15

E. 2:05

F. 1:40

G. 9:55

H. 12:30

I. 12:10

J. 5:10

K. 9:35

L. 2:55

M. 4:40

N. 10:50

O. 8:40

P. 8:20

Answers

1. **D**

2. **I**

3. **P**

4. **A**

5. **N**

6. **E**

7. **G**

8. **H**

9. **O**

10. **F**

11. **M**

12. **L**

13. **C**

14. **B**

15. **J**

16. **K**