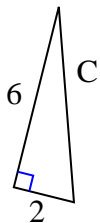




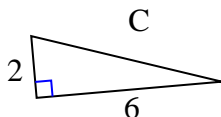
Find the value of 'C' round your answer to the nearest hundredth.

Answers

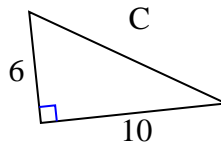
1)



2)



3)



1. \_\_\_\_\_

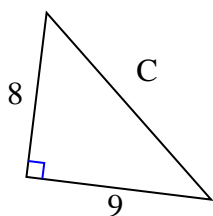
2. \_\_\_\_\_

3. \_\_\_\_\_

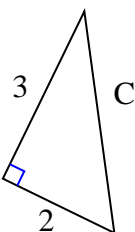
4. \_\_\_\_\_

5. \_\_\_\_\_

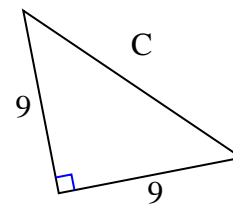
4)



5)



6)



6. \_\_\_\_\_

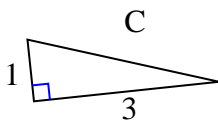
7. \_\_\_\_\_

8. \_\_\_\_\_

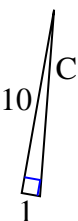
9. \_\_\_\_\_

10. \_\_\_\_\_

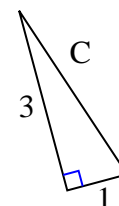
7)



8)



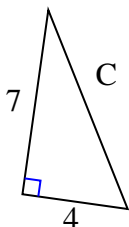
9)



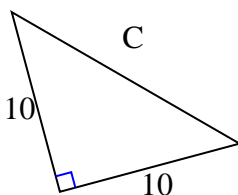
11. \_\_\_\_\_

12. \_\_\_\_\_

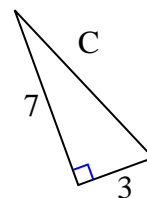
10)



11)



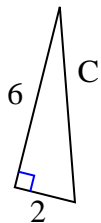
12)





Find the value of 'C' round your answer to the nearest hundredth.

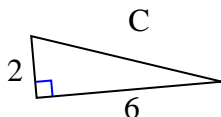
1)



$$36 + 4 = 40$$

$$\sqrt{40} = 6.32$$

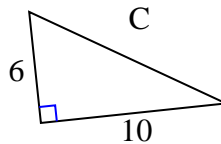
2)



$$4 + 36 = 40$$

$$\sqrt{40} = 6.32$$

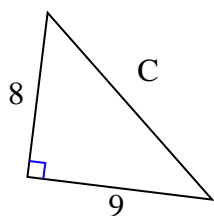
3)



$$36 + 100 = 136$$

$$\sqrt{136} = 11.66$$

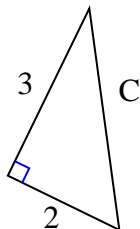
4)



$$64 + 81 = 145$$

$$\sqrt{145} = 12.04$$

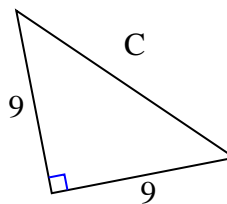
5)



$$9 + 4 = 13$$

$$\sqrt{13} = 3.61$$

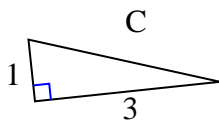
6)



$$81 + 81 = 162$$

$$\sqrt{162} = 12.73$$

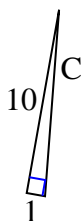
7)



$$1 + 9 = 10$$

$$\sqrt{10} = 3.16$$

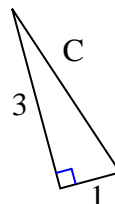
8)



$$100 + 1 = 101$$

$$\sqrt{101} = 10.05$$

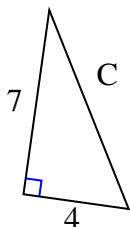
9)



$$9 + 1 = 10$$

$$\sqrt{10} = 3.16$$

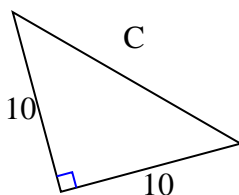
10)



$$49 + 16 = 65$$

$$\sqrt{65} = 8.06$$

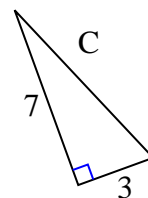
11)



$$100 + 100 = 200$$

$$\sqrt{200} = 14.14$$

12)



$$49 + 9 = 58$$

$$\sqrt{58} = 7.62$$

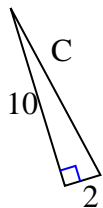
Answers1. 6.322. 6.323. 11.664. 12.045. 3.616. 12.737. 3.168. 10.059. 3.1610. 8.0611. 14.1412. 7.62



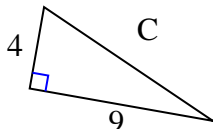
Find the value of 'C' round your answer to the nearest hundredth.

Answers

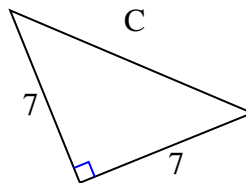
1)



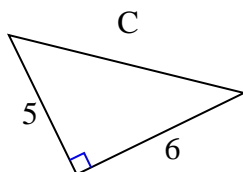
2)



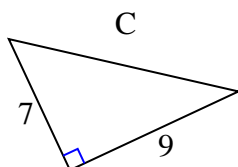
3)



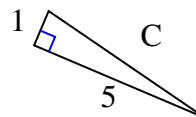
4)



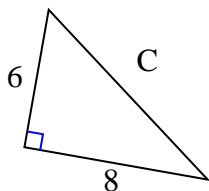
5)



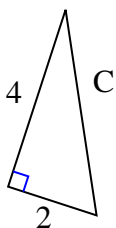
6)



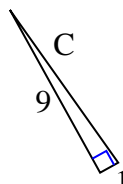
7)



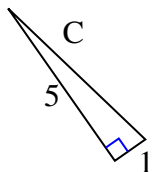
8)



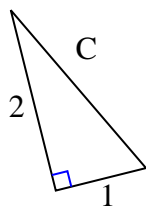
9)



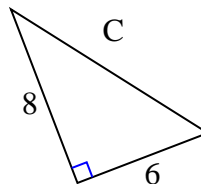
10)



11)



12)

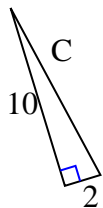


1. \_\_\_\_\_
2. \_\_\_\_\_
3. \_\_\_\_\_
4. \_\_\_\_\_
5. \_\_\_\_\_
6. \_\_\_\_\_
7. \_\_\_\_\_
8. \_\_\_\_\_
9. \_\_\_\_\_
10. \_\_\_\_\_
11. \_\_\_\_\_
12. \_\_\_\_\_



Find the value of 'C' round your answer to the nearest hundredth.

1)

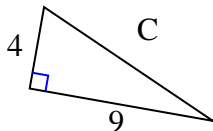


$$10^2 + 2^2 = C^2$$

$$100 + 4 = 104$$

$$\sqrt{104} = 10.2$$

2)

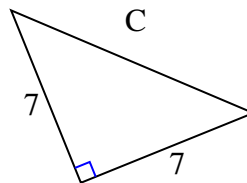


$$4^2 + 9^2 = C^2$$

$$16 + 81 = 97$$

$$\sqrt{97} = 9.85$$

3)

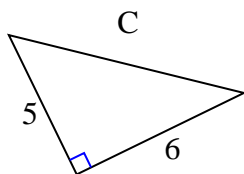


$$7^2 + 7^2 = C^2$$

$$49 + 49 = 98$$

$$\sqrt{98} = 9.9$$

4)

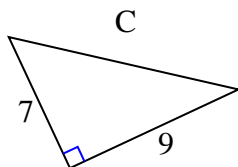


$$5^2 + 6^2 = C^2$$

$$25 + 36 = 61$$

$$\sqrt{61} = 7.81$$

5)

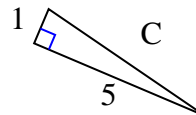


$$7^2 + 9^2 = C^2$$

$$49 + 81 = 130$$

$$\sqrt{130} = 11.4$$

6)

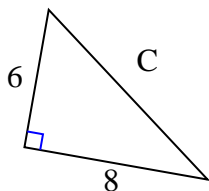


$$1^2 + 5^2 = C^2$$

$$1 + 25 = 26$$

$$\sqrt{26} = 5.1$$

7)

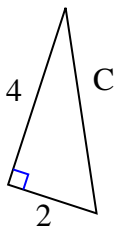


$$6^2 + 8^2 = C^2$$

$$36 + 64 = 100$$

$$\sqrt{100} = 10$$

8)

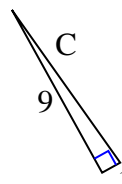


$$4^2 + 2^2 = C^2$$

$$16 + 4 = 20$$

$$\sqrt{20} = 4.47$$

9)

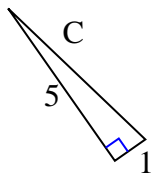


$$9^2 + 1^2 = C^2$$

$$81 + 1 = 82$$

$$\sqrt{82} = 9.06$$

10)

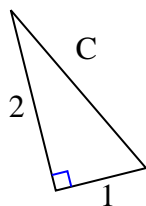


$$5^2 + 1^2 = C^2$$

$$25 + 1 = 26$$

$$\sqrt{26} = 5.1$$

11)

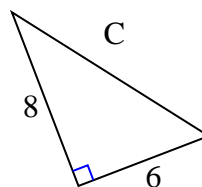


$$2^2 + 1^2 = C^2$$

$$4 + 1 = 5$$

$$\sqrt{5} = 2.24$$

12)



$$8^2 + 6^2 = C^2$$

$$64 + 36 = 100$$

$$\sqrt{100} = 10$$

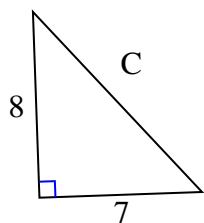
Answers1. 10.22. 9.853. 9.94. 7.815. 11.46. 5.17. 108. 4.479. 9.0610. 5.111. 2.2412. 10



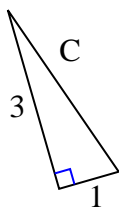
Find the value of 'C' round your answer to the nearest hundredth.

Answers

1)



2)



3)



1. \_\_\_\_\_

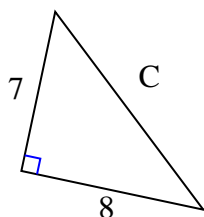
2. \_\_\_\_\_

3. \_\_\_\_\_

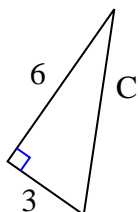
4. \_\_\_\_\_

5. \_\_\_\_\_

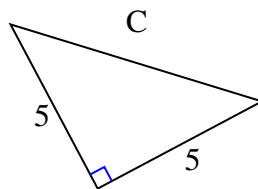
4)



5)



6)



6. \_\_\_\_\_

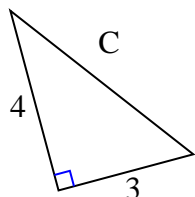
7. \_\_\_\_\_

8. \_\_\_\_\_

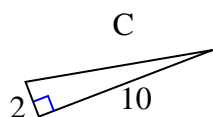
9. \_\_\_\_\_

10. \_\_\_\_\_

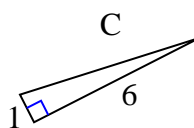
7)



8)



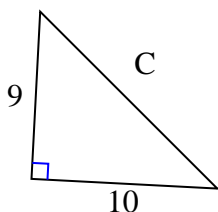
9)



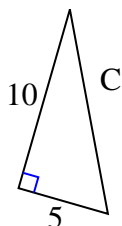
11. \_\_\_\_\_

12. \_\_\_\_\_

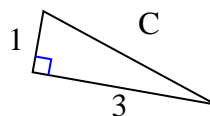
10)



11)



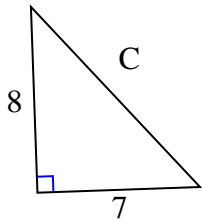
12)





Find the value of 'C' round your answer to the nearest hundredth.

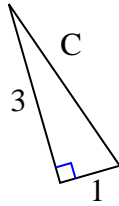
1)



$$64 + 49 = 113$$

$$\sqrt{113} = 10.63$$

2)



$$9 + 1 = 10$$

$$\sqrt{10} = 3.16$$

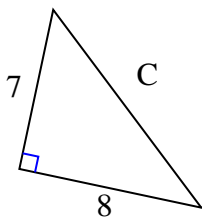
3)



$$49 + 4 = 53$$

$$\sqrt{53} = 7.28$$

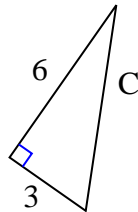
4)



$$49 + 64 = 113$$

$$\sqrt{113} = 10.63$$

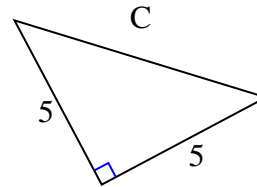
5)



$$36 + 9 = 45$$

$$\sqrt{45} = 6.71$$

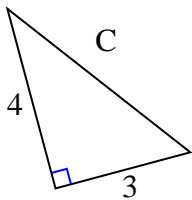
6)



$$25 + 25 = 50$$

$$\sqrt{50} = 7.07$$

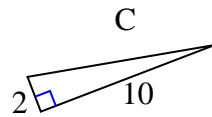
7)



$$16 + 9 = 25$$

$$\sqrt{25} = 5$$

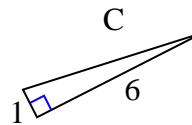
8)



$$4 + 100 = 104$$

$$\sqrt{104} = 10.2$$

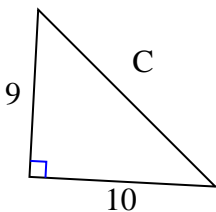
9)



$$1 + 36 = 37$$

$$\sqrt{37} = 6.08$$

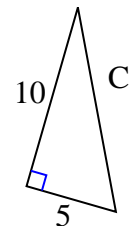
10)



$$81 + 100 = 181$$

$$\sqrt{181} = 13.45$$

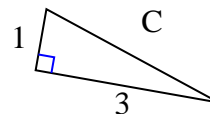
11)



$$100 + 25 = 125$$

$$\sqrt{125} = 11.18$$

12)



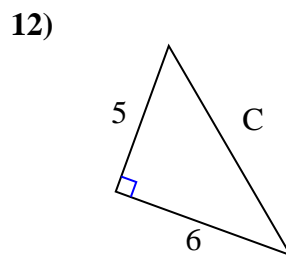
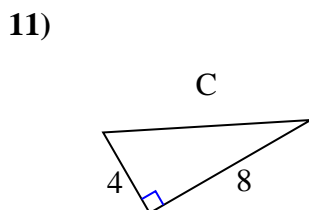
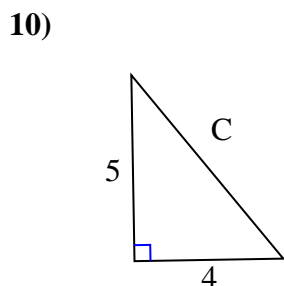
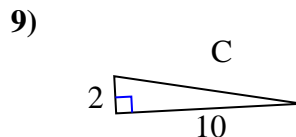
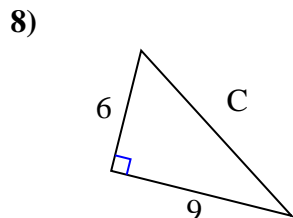
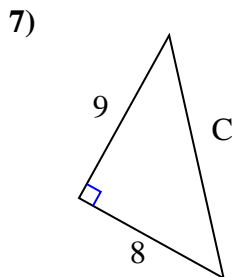
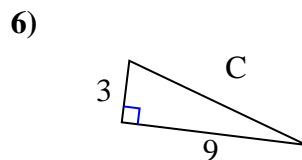
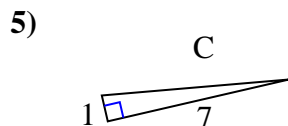
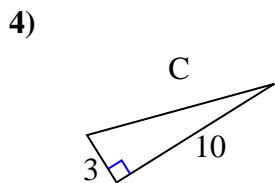
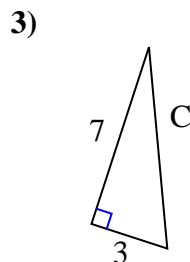
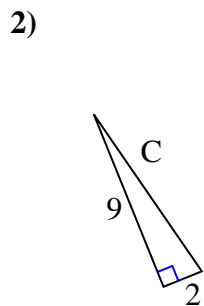
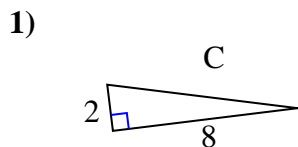
$$1 + 9 = 10$$

$$\sqrt{10} = 3.16$$

Answers1. 10.632. 3.163. 7.284. 10.635. 6.716. 7.077. 58. 10.29. 6.0810. 13.4511. 11.1812. 3.16



Find the value of 'C' round your answer to the nearest hundredth.

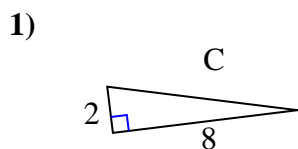


Answers

1. \_\_\_\_\_
2. \_\_\_\_\_
3. \_\_\_\_\_
4. \_\_\_\_\_
5. \_\_\_\_\_
6. \_\_\_\_\_
7. \_\_\_\_\_
8. \_\_\_\_\_
9. \_\_\_\_\_
10. \_\_\_\_\_
11. \_\_\_\_\_
12. \_\_\_\_\_

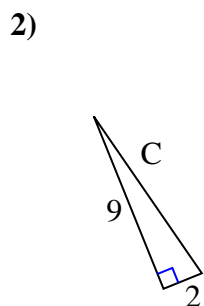


Find the value of 'C' round your answer to the nearest hundredth.



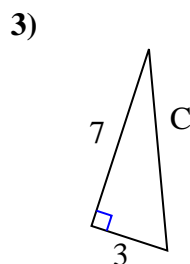
$$4 + 64 = 68$$

$$\sqrt{68} = 8.25$$



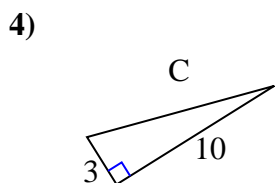
$$81 + 4 = 85$$

$$\sqrt{85} = 9.22$$



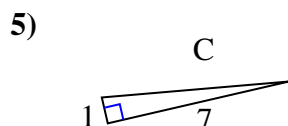
$$49 + 9 = 58$$

$$\sqrt{58} = 7.62$$



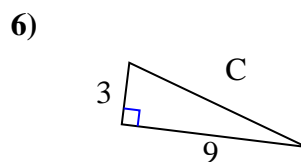
$$9 + 100 = 109$$

$$\sqrt{109} = 10.44$$



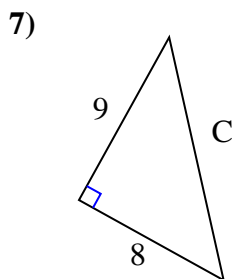
$$1 + 49 = 50$$

$$\sqrt{50} = 7.07$$



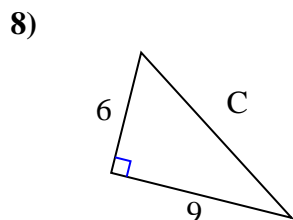
$$9 + 81 = 90$$

$$\sqrt{90} = 9.49$$



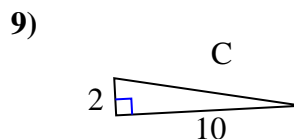
$$81 + 64 = 145$$

$$\sqrt{145} = 12.04$$



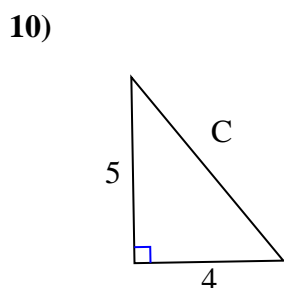
$$36 + 81 = 117$$

$$\sqrt{117} = 10.82$$



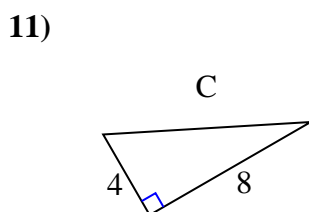
$$4 + 100 = 104$$

$$\sqrt{104} = 10.2$$



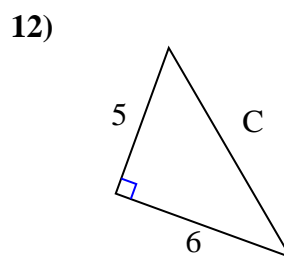
$$25 + 16 = 41$$

$$\sqrt{41} = 6.4$$



$$16 + 64 = 80$$

$$\sqrt{80} = 8.94$$



$$25 + 36 = 61$$

$$\sqrt{61} = 7.81$$

Answers

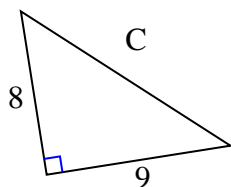
1. 8.25
2. 9.22
3. 7.62
4. 10.44
5. 7.07
6. 9.49
7. 12.04
8. 10.82
9. 10.2
10. 6.4
11. 8.94
12. 7.81



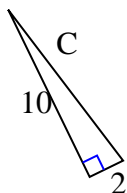


Find the value of 'C' round your answer to the nearest hundredth.

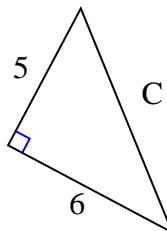
1)



2)



3)



Answers

1. \_\_\_\_\_

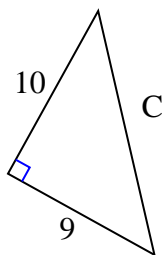
2. \_\_\_\_\_

3. \_\_\_\_\_

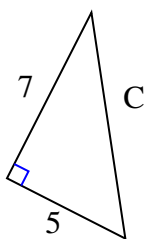
4. \_\_\_\_\_

5. \_\_\_\_\_

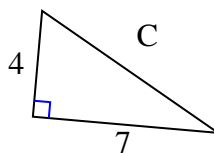
4)



5)



6)

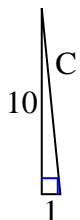


6. \_\_\_\_\_

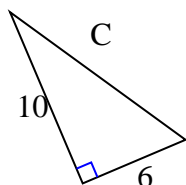
7. \_\_\_\_\_

8. \_\_\_\_\_

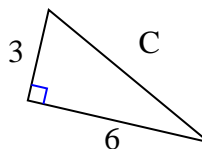
7)



8)



9)



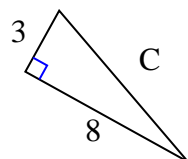
9. \_\_\_\_\_

10. \_\_\_\_\_

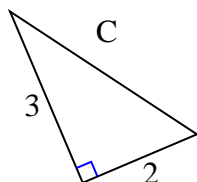
11. \_\_\_\_\_

12. \_\_\_\_\_

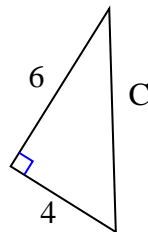
10)



11)



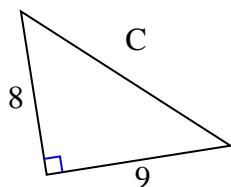
12)





Find the value of 'C' round your answer to the nearest hundredth.

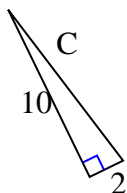
1)



$$64 + 81 = 145$$

$$\sqrt{145} = 12.04$$

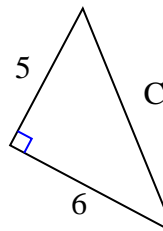
2)



$$100 + 4 = 104$$

$$\sqrt{104} = 10.2$$

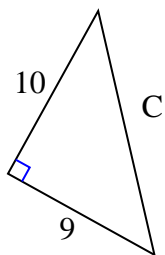
3)



$$25 + 36 = 61$$

$$\sqrt{61} = 7.81$$

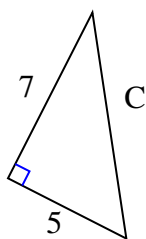
4)



$$100 + 81 = 181$$

$$\sqrt{181} = 13.45$$

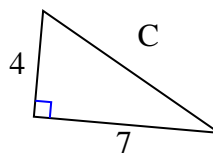
5)



$$49 + 25 = 74$$

$$\sqrt{74} = 8.6$$

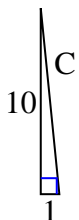
6)



$$16 + 49 = 65$$

$$\sqrt{65} = 8.06$$

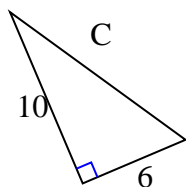
7)



$$100 + 1 = 101$$

$$\sqrt{101} = 10.05$$

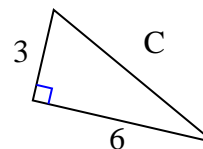
8)



$$100 + 36 = 136$$

$$\sqrt{136} = 11.66$$

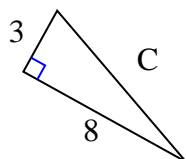
9)



$$9 + 36 = 45$$

$$\sqrt{45} = 6.71$$

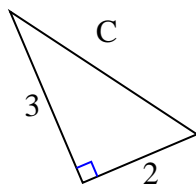
10)



$$9 + 64 = 73$$

$$\sqrt{73} = 8.54$$

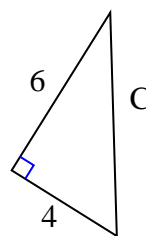
11)



$$9 + 4 = 13$$

$$\sqrt{13} = 3.61$$

12)



$$36 + 16 = 52$$

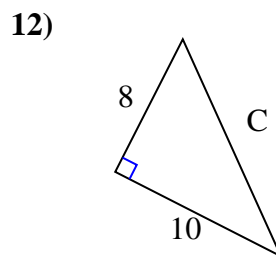
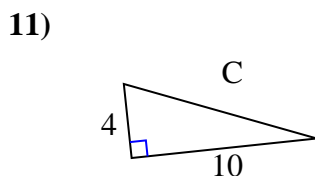
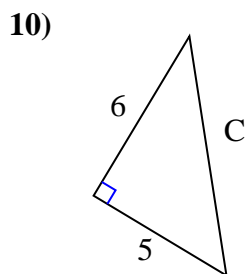
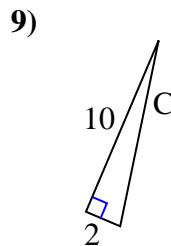
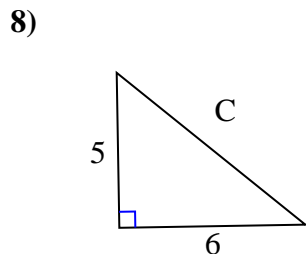
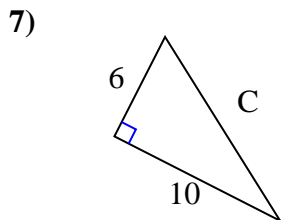
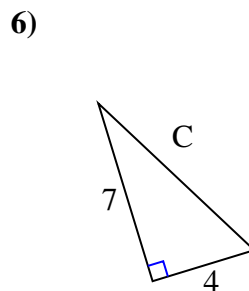
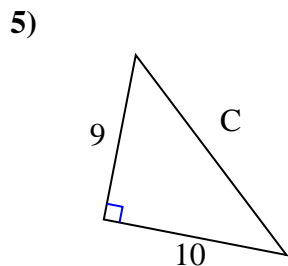
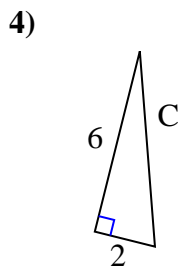
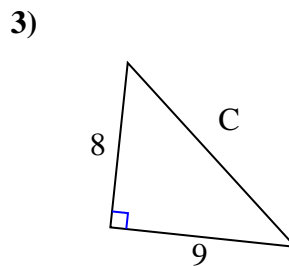
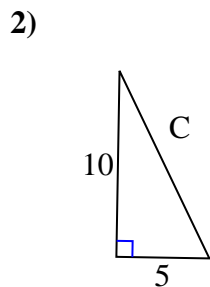
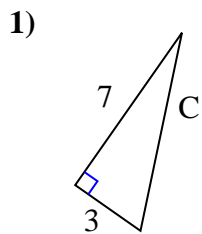
$$\sqrt{52} = 7.21$$

Answers1. 12.042. 10.23. 7.814. 13.455. 8.66. 8.067. 10.058. 11.669. 6.7110. 8.5411. 3.6112. 7.21



Find the value of 'C' round your answer to the nearest hundredth.

Answers

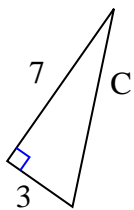


1. \_\_\_\_\_
2. \_\_\_\_\_
3. \_\_\_\_\_
4. \_\_\_\_\_
5. \_\_\_\_\_
6. \_\_\_\_\_
7. \_\_\_\_\_
8. \_\_\_\_\_
9. \_\_\_\_\_
10. \_\_\_\_\_
11. \_\_\_\_\_
12. \_\_\_\_\_



Find the value of 'C' round your answer to the nearest hundredth.

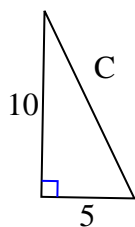
1)



$$49 + 9 = 58$$

$$\sqrt{58} = 7.62$$

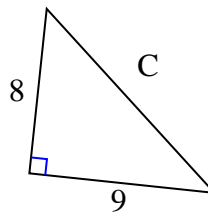
2)



$$100 + 25 = 125$$

$$\sqrt{125} = 11.18$$

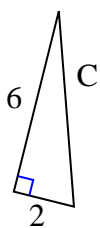
3)



$$64 + 81 = 145$$

$$\sqrt{145} = 12.04$$

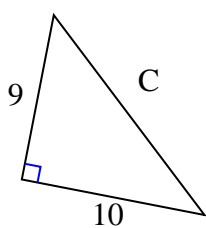
4)



$$36 + 4 = 40$$

$$\sqrt{40} = 6.32$$

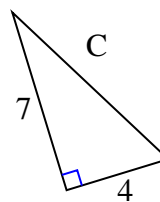
5)



$$81 + 100 = 181$$

$$\sqrt{181} = 13.45$$

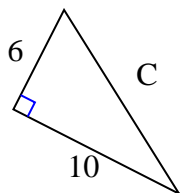
6)



$$49 + 16 = 65$$

$$\sqrt{65} = 8.06$$

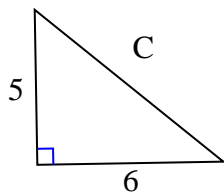
7)



$$36 + 100 = 136$$

$$\sqrt{136} = 11.66$$

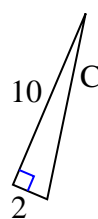
8)



$$25 + 36 = 61$$

$$\sqrt{61} = 7.81$$

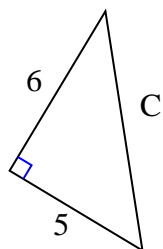
9)



$$100 + 4 = 104$$

$$\sqrt{104} = 10.2$$

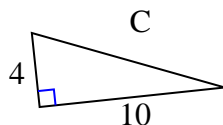
10)



$$36 + 25 = 61$$

$$\sqrt{61} = 7.81$$

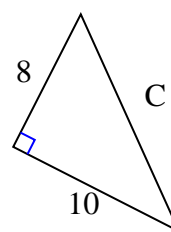
11)



$$16 + 100 = 116$$

$$\sqrt{116} = 10.77$$

12)



$$64 + 100 = 164$$

$$\sqrt{164} = 12.81$$

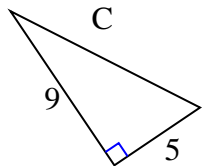
Answers1. 7.622. 11.183. 12.044. 6.325. 13.456. 8.067. 11.668. 7.819. 10.210. 7.8111. 10.7712. 12.81



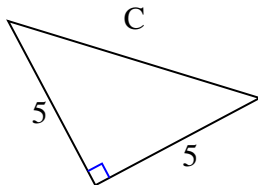
Find the value of 'C' round your answer to the nearest hundredth.

Answers

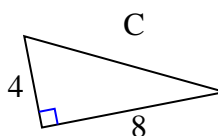
1)



2)



3)



1. \_\_\_\_\_

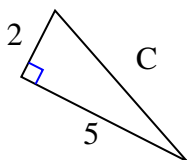
2. \_\_\_\_\_

3. \_\_\_\_\_

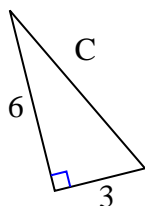
4. \_\_\_\_\_

5. \_\_\_\_\_

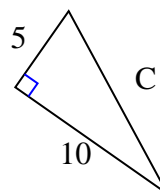
4)



5)



6)



6. \_\_\_\_\_

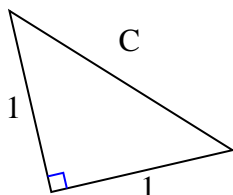
7. \_\_\_\_\_

8. \_\_\_\_\_

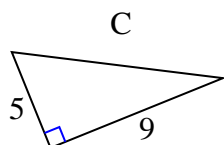
9. \_\_\_\_\_

10. \_\_\_\_\_

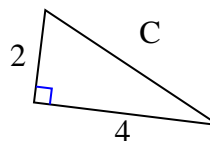
7)



8)



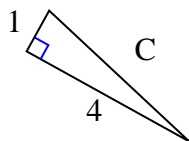
9)



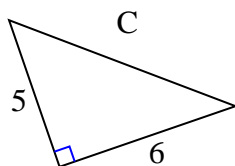
11. \_\_\_\_\_

12. \_\_\_\_\_

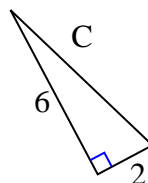
10)



11)



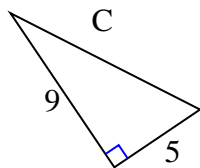
12)





Find the value of 'C' round your answer to the nearest hundredth.

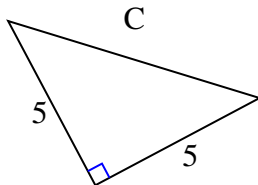
1)



$$81 + 25 = 106$$

$$\sqrt{106} = 10.3$$

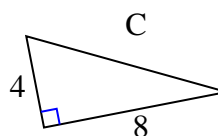
2)



$$25 + 25 = 50$$

$$\sqrt{50} = 7.07$$

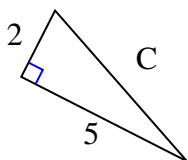
3)



$$16 + 64 = 80$$

$$\sqrt{80} = 8.94$$

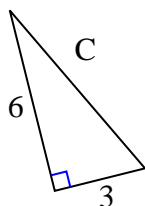
4)



$$4 + 25 = 29$$

$$\sqrt{29} = 5.39$$

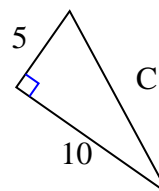
5)



$$36 + 9 = 45$$

$$\sqrt{45} = 6.71$$

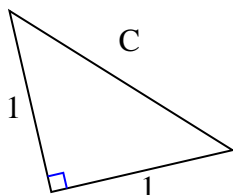
6)



$$25 + 100 = 125$$

$$\sqrt{125} = 11.18$$

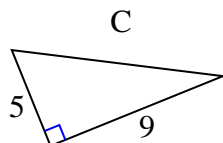
7)



$$1 + 1 = 2$$

$$\sqrt{2} = 1.41$$

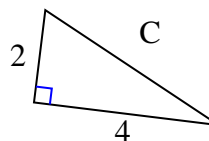
8)



$$25 + 81 = 106$$

$$\sqrt{106} = 10.3$$

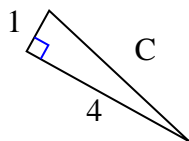
9)



$$4 + 16 = 20$$

$$\sqrt{20} = 4.47$$

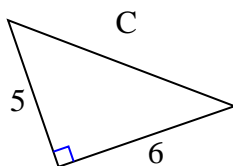
10)



$$1 + 16 = 17$$

$$\sqrt{17} = 4.12$$

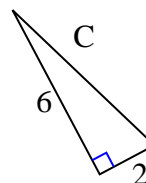
11)



$$25 + 36 = 61$$

$$\sqrt{61} = 7.81$$

12)



$$36 + 4 = 40$$

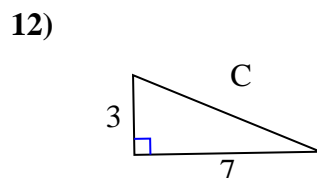
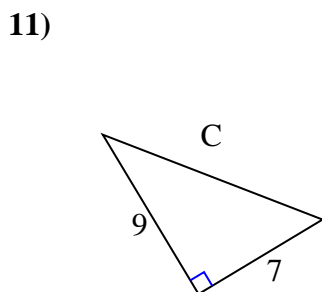
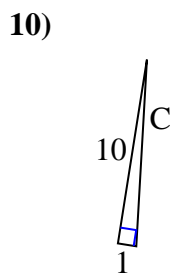
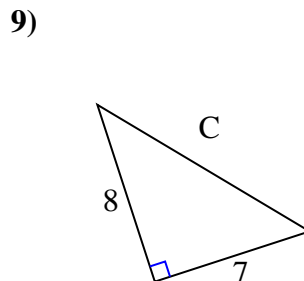
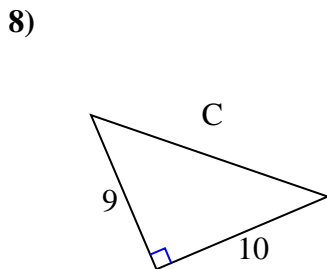
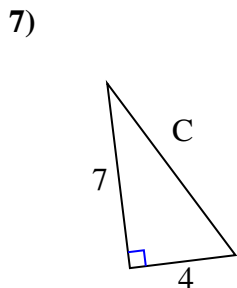
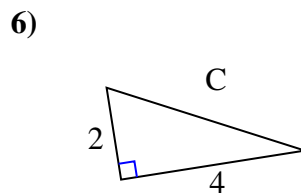
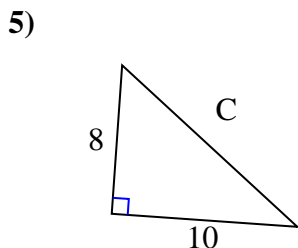
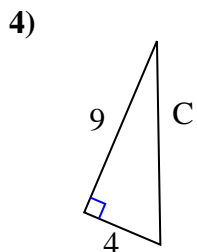
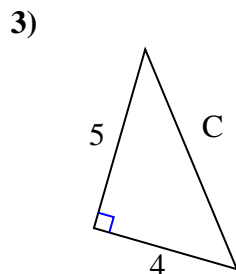
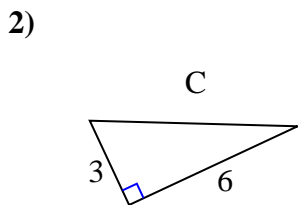
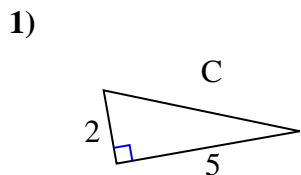
$$\sqrt{40} = 6.32$$

Answers1. 10.32. 7.073. 8.944. 5.395. 6.716. 11.187. 1.418. 10.39. 4.4710. 4.1211. 7.8112. 6.32



Find the value of 'C' round your answer to the nearest hundredth.

Answers

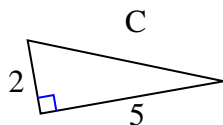


1. \_\_\_\_\_
2. \_\_\_\_\_
3. \_\_\_\_\_
4. \_\_\_\_\_
5. \_\_\_\_\_
6. \_\_\_\_\_
7. \_\_\_\_\_
8. \_\_\_\_\_
9. \_\_\_\_\_
10. \_\_\_\_\_
11. \_\_\_\_\_
12. \_\_\_\_\_



Find the value of 'C' round your answer to the nearest hundredth.

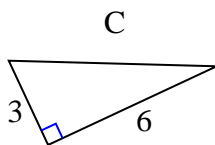
1)



$$4^2 + 5^2 = 29$$

$$\sqrt{29} = 5.39$$

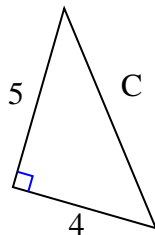
2)



$$3^2 + 6^2 = 45$$

$$\sqrt{45} = 6.71$$

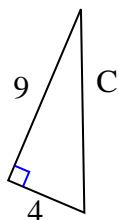
3)



$$5^2 + 4^2 = 41$$

$$\sqrt{41} = 6.4$$

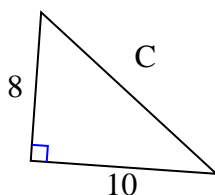
4)



$$9^2 + 4^2 = 97$$

$$\sqrt{97} = 9.85$$

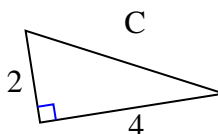
5)



$$8^2 + 10^2 = 164$$

$$\sqrt{164} = 12.81$$

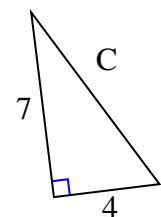
6)



$$2^2 + 4^2 = 20$$

$$\sqrt{20} = 4.47$$

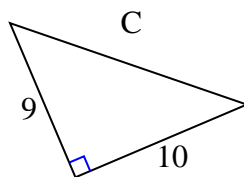
7)



$$7^2 + 4^2 = 65$$

$$\sqrt{65} = 8.06$$

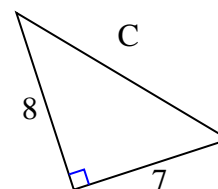
8)



$$9^2 + 10^2 = 181$$

$$\sqrt{181} = 13.45$$

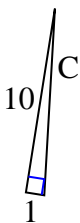
9)



$$8^2 + 7^2 = 113$$

$$\sqrt{113} = 10.63$$

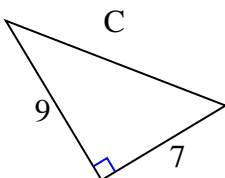
10)



$$10^2 + 1^2 = 101$$

$$\sqrt{101} = 10.05$$

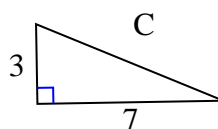
11)



$$9^2 + 7^2 = 130$$

$$\sqrt{130} = 11.4$$

12)



$$3^2 + 7^2 = 58$$

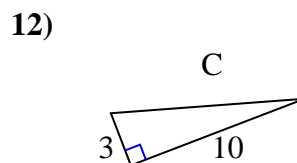
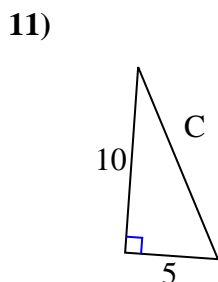
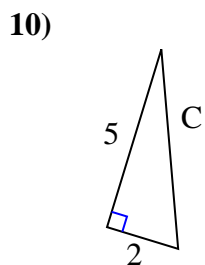
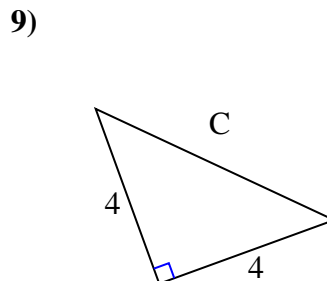
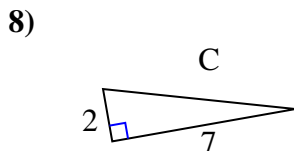
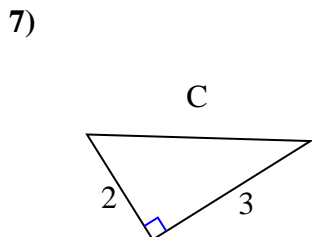
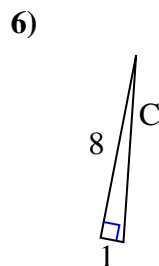
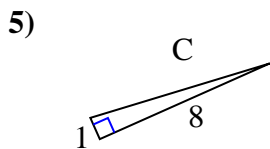
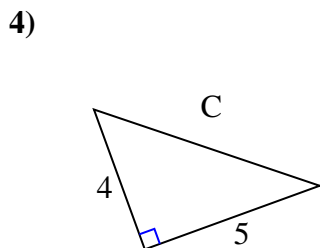
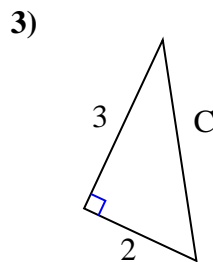
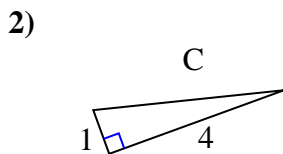
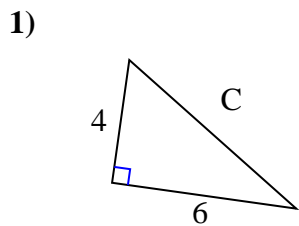
$$\sqrt{58} = 7.62$$

Answers1. 5.392. 6.713. 6.44. 9.855. 12.816. 4.477. 8.068. 13.459. 10.6310. 10.0511. 11.412. 7.62





Find the value of 'C' round your answer to the nearest hundredth.



Answers

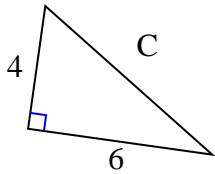
1. \_\_\_\_\_
2. \_\_\_\_\_
3. \_\_\_\_\_
4. \_\_\_\_\_
5. \_\_\_\_\_
6. \_\_\_\_\_
7. \_\_\_\_\_
8. \_\_\_\_\_
9. \_\_\_\_\_
10. \_\_\_\_\_
11. \_\_\_\_\_
12. \_\_\_\_\_



Find the value of 'C' round your answer to the nearest hundredth.

Answers

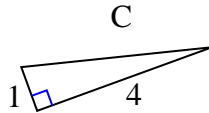
1)



$$16 + 36 = 52$$

$$\sqrt{52} = 7.21$$

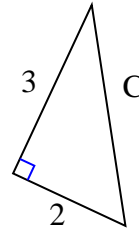
2)



$$1 + 16 = 17$$

$$\sqrt{17} = 4.12$$

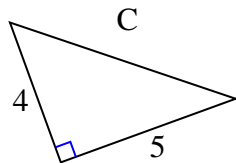
3)



$$9 + 4 = 13$$

$$\sqrt{13} = 3.61$$

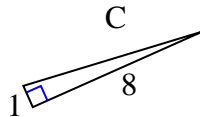
4)



$$16 + 25 = 41$$

$$\sqrt{41} = 6.4$$

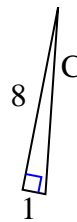
5)



$$1 + 64 = 65$$

$$\sqrt{65} = 8.06$$

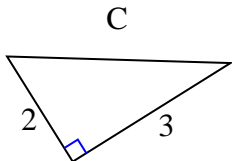
6)



$$64 + 1 = 65$$

$$\sqrt{65} = 8.06$$

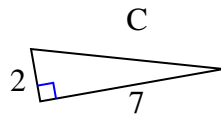
7)



$$4 + 9 = 13$$

$$\sqrt{13} = 3.61$$

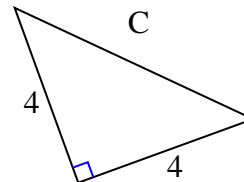
8)



$$4 + 49 = 53$$

$$\sqrt{53} = 7.28$$

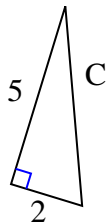
9)



$$16 + 16 = 32$$

$$\sqrt{32} = 5.66$$

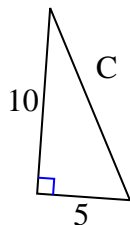
10)



$$25 + 4 = 29$$

$$\sqrt{29} = 5.39$$

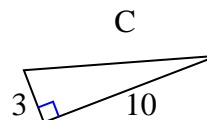
11)



$$100 + 25 = 125$$

$$\sqrt{125} = 11.18$$

12)



$$9 + 100 = 109$$

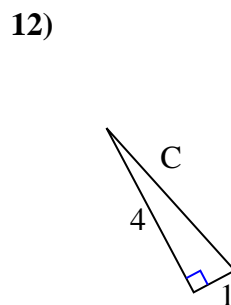
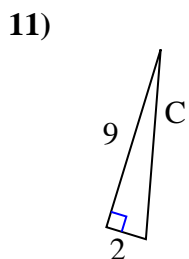
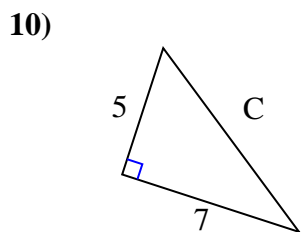
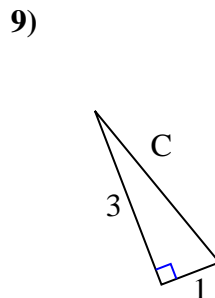
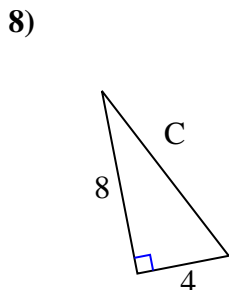
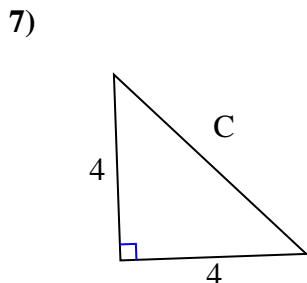
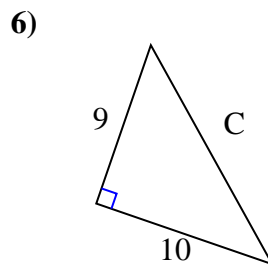
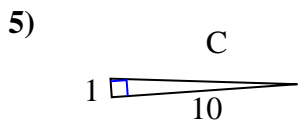
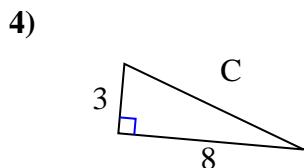
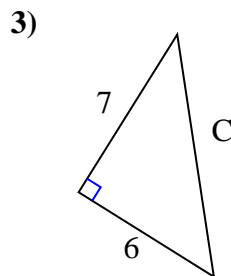
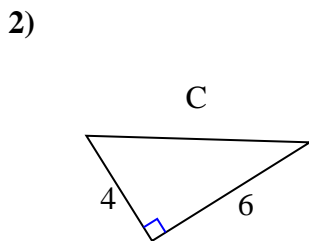
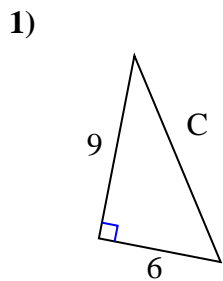
$$\sqrt{109} = 10.44$$

1. 7.21
2. 4.12
3. 3.61
4. 6.4
5. 8.06
6. 8.06
7. 3.61
8. 7.28
9. 5.66
10. 5.39
11. 11.18
12. 10.44



Find the value of 'C' round your answer to the nearest hundredth.

Answers



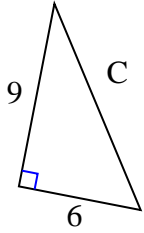
1. \_\_\_\_\_
2. \_\_\_\_\_
3. \_\_\_\_\_
4. \_\_\_\_\_
5. \_\_\_\_\_
6. \_\_\_\_\_
7. \_\_\_\_\_
8. \_\_\_\_\_
9. \_\_\_\_\_
10. \_\_\_\_\_
11. \_\_\_\_\_
12. \_\_\_\_\_



Find the value of 'C' round your answer to the nearest hundredth.

Answers

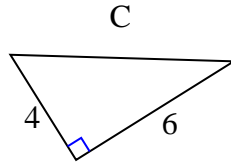
1)



$$81 + 36 = 117$$

$$\sqrt{117} = 10.82$$

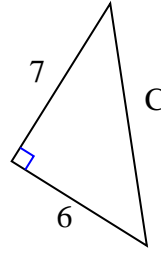
2)



$$16 + 36 = 52$$

$$\sqrt{52} = 7.21$$

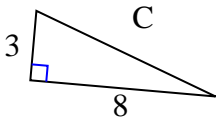
3)



$$49 + 36 = 85$$

$$\sqrt{85} = 9.22$$

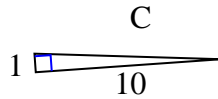
4)



$$9 + 64 = 73$$

$$\sqrt{73} = 8.54$$

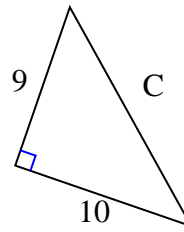
5)



$$1 + 100 = 101$$

$$\sqrt{101} = 10.05$$

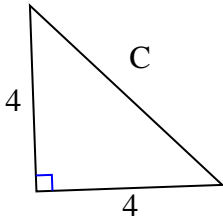
6)



$$81 + 100 = 181$$

$$\sqrt{181} = 13.45$$

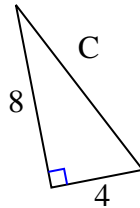
7)



$$16 + 16 = 32$$

$$\sqrt{32} = 5.66$$

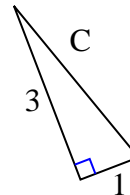
8)



$$64 + 16 = 80$$

$$\sqrt{80} = 8.94$$

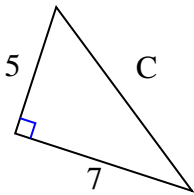
9)



$$9 + 1 = 10$$

$$\sqrt{10} = 3.16$$

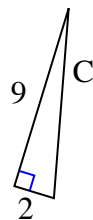
10)



$$25 + 49 = 74$$

$$\sqrt{74} = 8.6$$

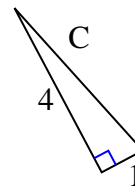
11)



$$81 + 4 = 85$$

$$\sqrt{85} = 9.22$$

12)



$$16 + 1 = 17$$

$$\sqrt{17} = 4.12$$

1. 10.82
2. 7.21
3. 9.22
4. 8.54
5. 10.05
6. 13.45
7. 5.66
8. 8.94
9. 3.16
10. 8.6
11. 9.22
12. 4.12