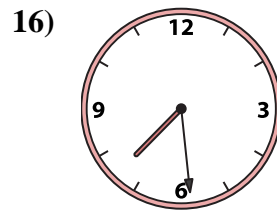
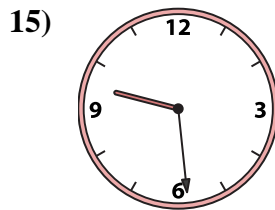
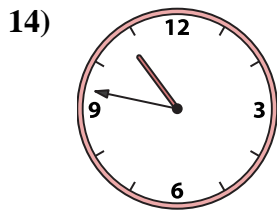
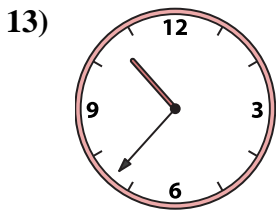
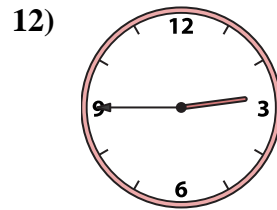
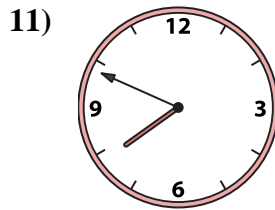
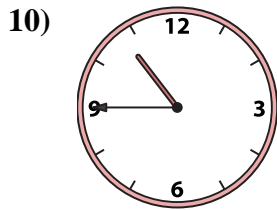
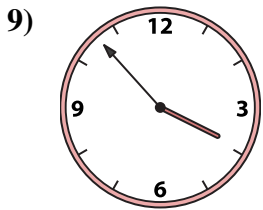
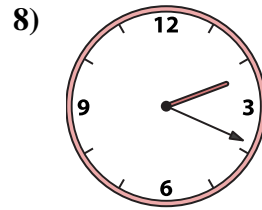
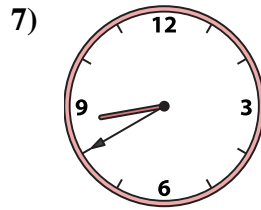
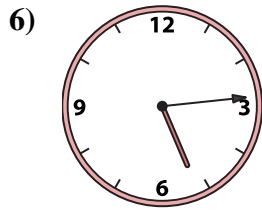
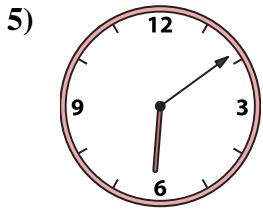
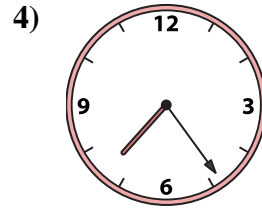
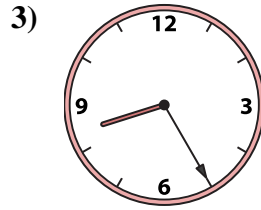
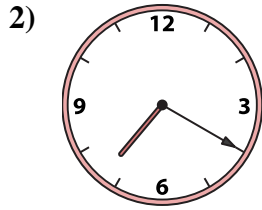
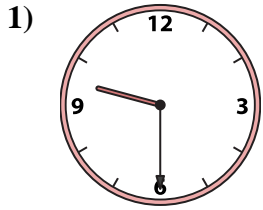




Match the analog clock to the digital clock.



A. 10:47

B. 2:45

C. 2:19

D. 10:37

E. 5:14

F. 7:49

G. 3:53

H. 10:45

I. 6:09

J. 7:24

K. 9:30

L. 7:20

M. 8:25

N. 9:29

O. 8:40

P. 7:29

Answers

1. _____

2. _____

3. _____

4. _____

5. _____

6. _____

7. _____

8. _____

9. _____

10. _____

11. _____

12. _____

13. _____

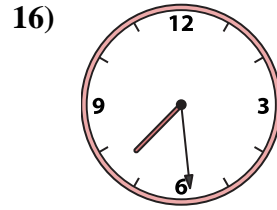
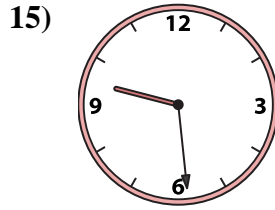
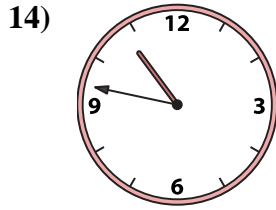
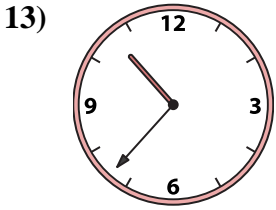
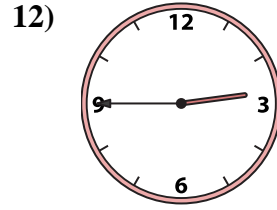
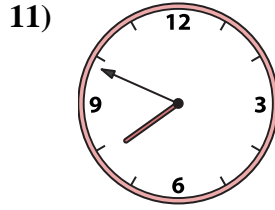
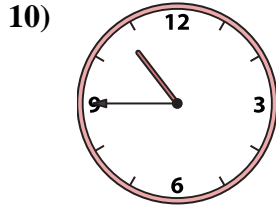
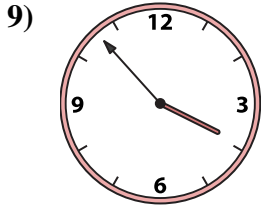
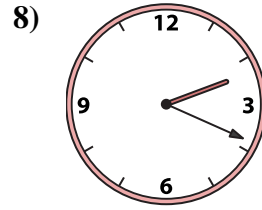
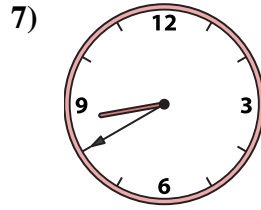
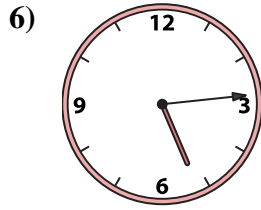
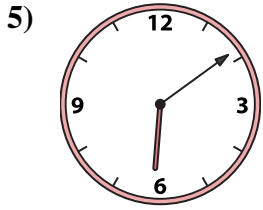
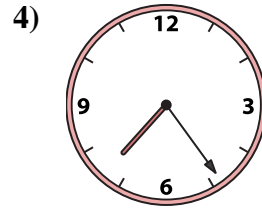
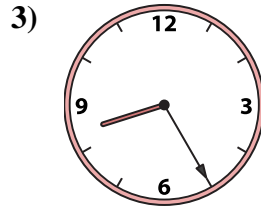
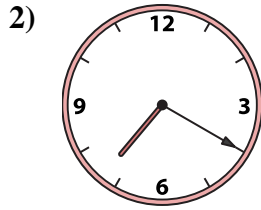
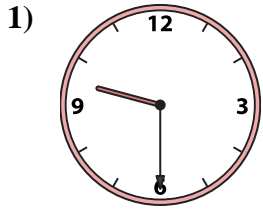
14. _____

15. _____

16. _____



Match the analog clock to the digital clock.



A. **10:47**

B. **2:45**

C. **2:19**

D. **10:37**

E. **5:14**

F. **7:49**

G. **3:53**

H. **10:45**

I. **6:09**

J. **7:24**

K. **9:30**

L. **7:20**

M. **8:25**

N. **9:29**

O. **8:40**

P. **7:29**

Answers

1. **K**

2. **L**

3. **M**

4. **J**

5. **I**

6. **E**

7. **O**

8. **C**

9. **G**

10. **H**

11. **F**

12. **B**

13. **D**

14. **A**

15. **N**

16. **P**