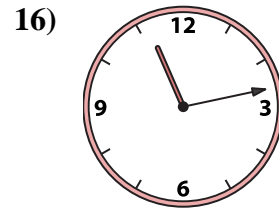
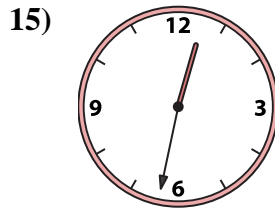
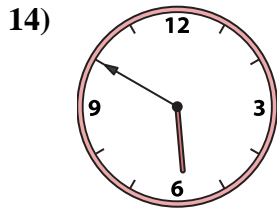
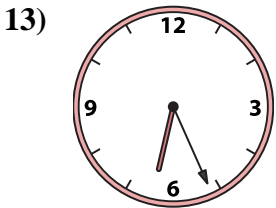
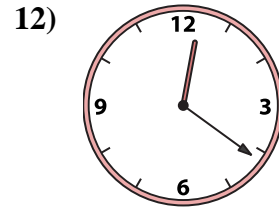
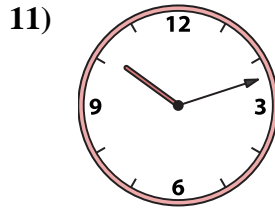
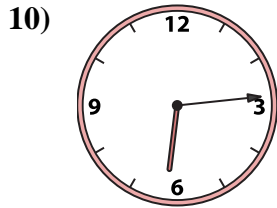
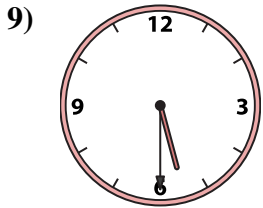
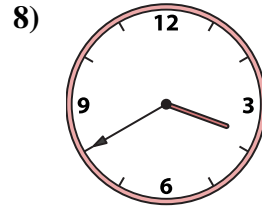
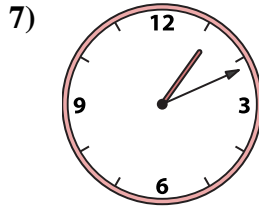


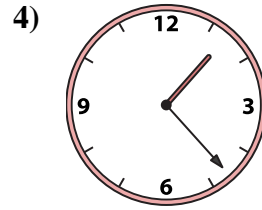
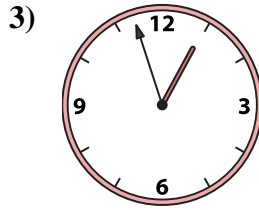
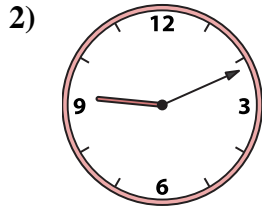
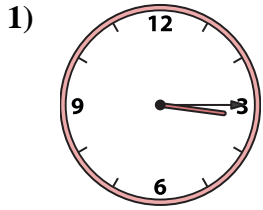




Match the analog clock to the digital clock.



Answers

1. _____
2. _____
3. _____
4. _____
5. _____
6. _____
7. _____
8. _____
9. _____
10. _____
11. _____
12. _____
13. _____
14. _____
15. _____
16. _____

A. 10:12

B. 3:40

C. 1:23

D. 12:32

E. 12:21

F. 3:15

G. 1:11

H. 6:14

I. 5:50

J. 2:02

K. 5:30

L. 6:26

M. 12:57

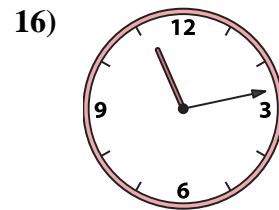
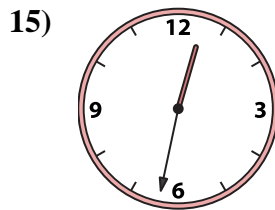
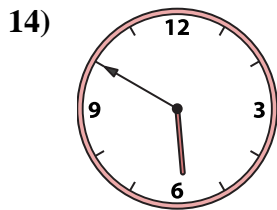
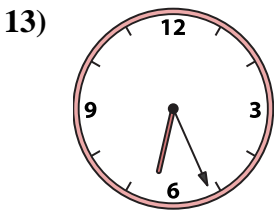
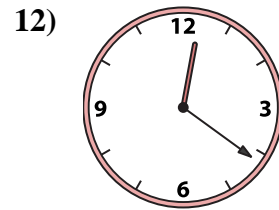
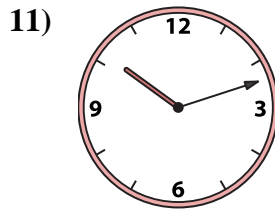
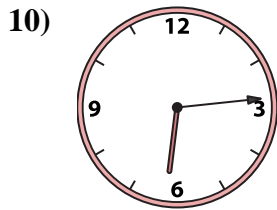
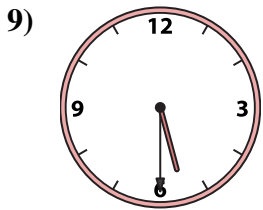
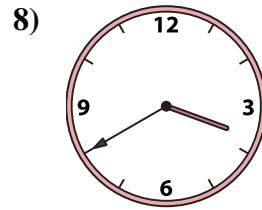
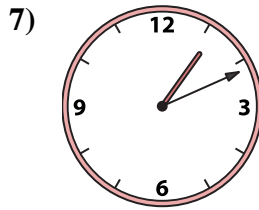

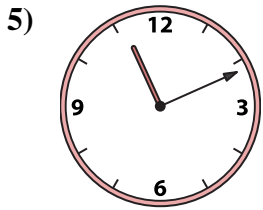
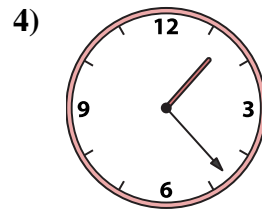
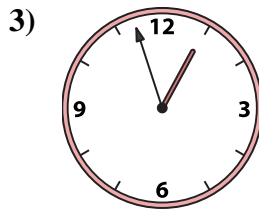
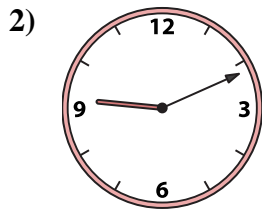
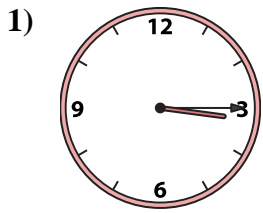
N. 11:11

O. 11:13

P. 9:11



Match the analog clock to the digital clock.



A. **10:12**

B. **3:40**

C. **1:23**

D. **12:32**

E. **12:21**

F. **3:15**

G. **1:11**

H. **6:14**

I. **5:50**

J. **2:02**

K. **5:30**

L. **6:26**

M. **12:57**

N. **11:11**

O. **11:13**

P. **9:11**

Answers

1. **F**

2. **P**

3. **M**

4. **C**

5. **N**

6. **J**

7. **G**

8. **B**

9. **K**

10. **H**

11. **A**

12. **E**

13. **L**

14. **I**

15. **D**

16. **O**