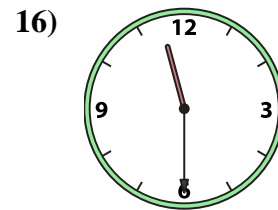
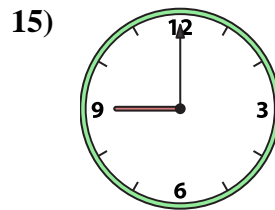
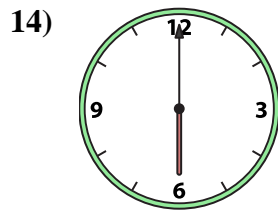
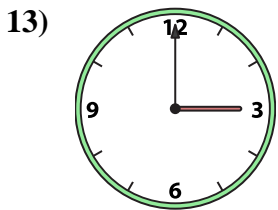
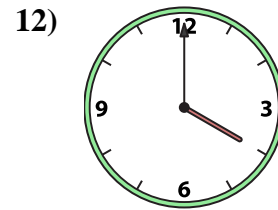
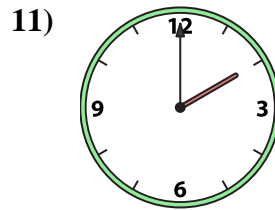
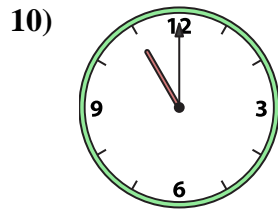
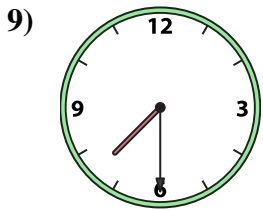
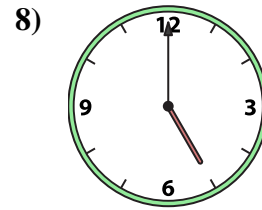

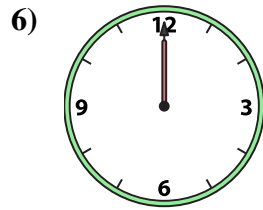
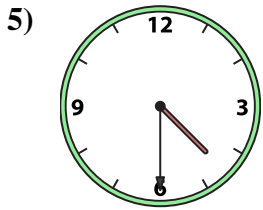
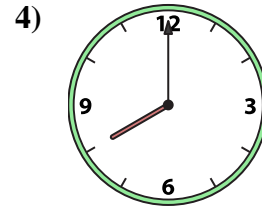
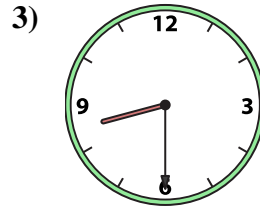
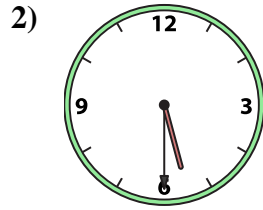




Match the analog clock to the digital clock.



A. 10:00

B. 5:00

C. 6:00

D. 11:00

E. 7:30

F. 4:00

G. 8:00

H. 1:00

I. 4:30

J. 8:30

K. 11:30

L. 12:00

M. 9:00

N. 5:30

O. 3:00

P. 2:00

Answers

1. _____

2. _____

3. _____

4. _____

5. _____

6. _____

7. _____

8. _____

9. _____

10. _____

11. _____

12. _____

13. _____

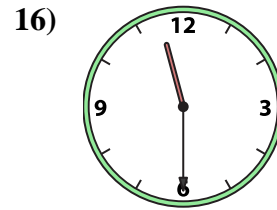
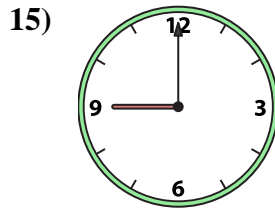
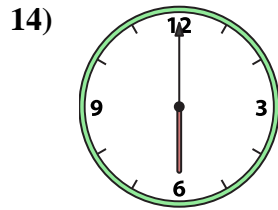
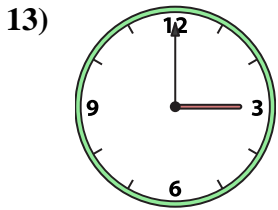
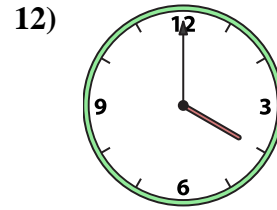
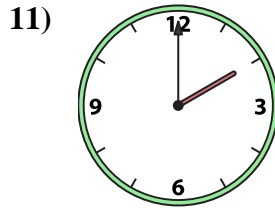
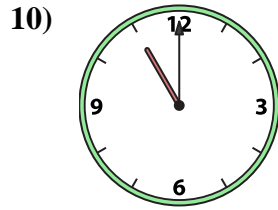
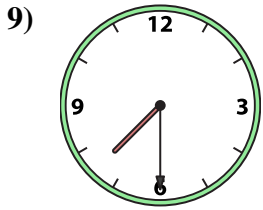
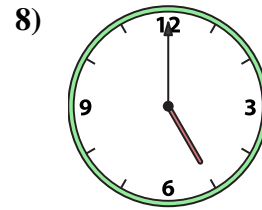
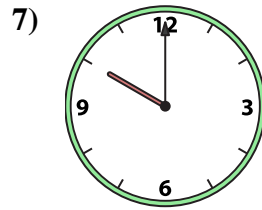
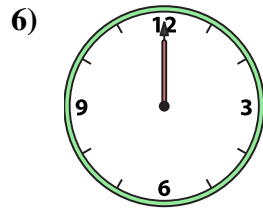
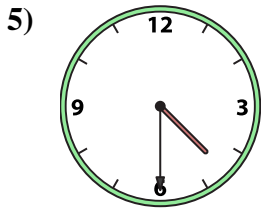
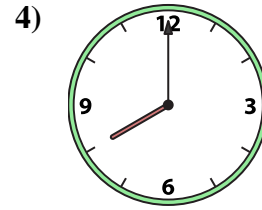
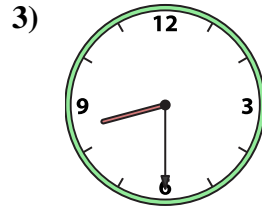
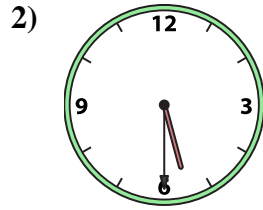
14. _____

15. _____

16. _____



Match the analog clock to the digital clock.



A. **10:00**

B. **5:00**

C. **6:00**

D. **11:00**

E. **7:30**

F. **4:00**

G. **8:00**

H. **1:00**

I. **4:30**

J. **8:30**

K. **11:30**

L. **12:00**

M. **9:00**

N. **5:30**

O. **3:00**

P. **2:00**

Answers

1. **H**

2. **N**

3. **J**

4. **G**

5. **I**

6. **L**

7. **A**

8. **B**

9. **E**

10. **D**

11. **P**

12. **F**

13. **O**

14. **C**

15. **M**

16. **K**