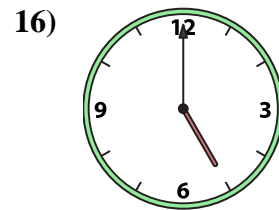
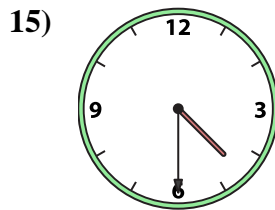
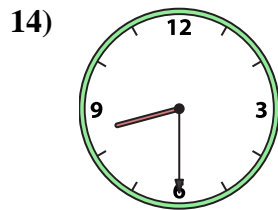
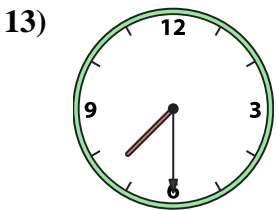
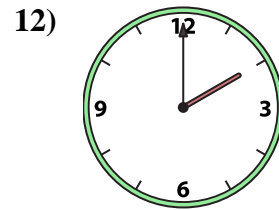
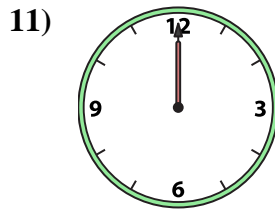
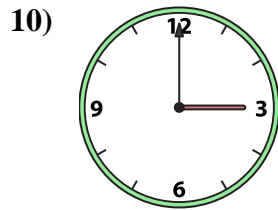
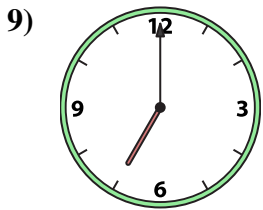
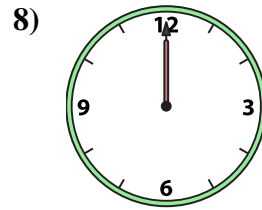
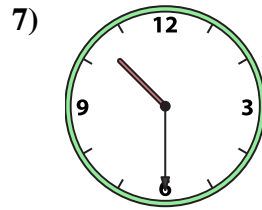
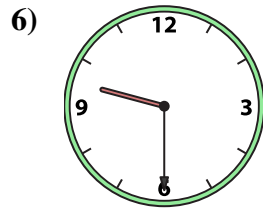

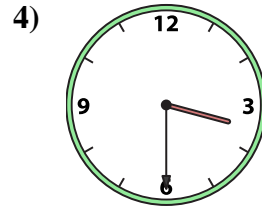
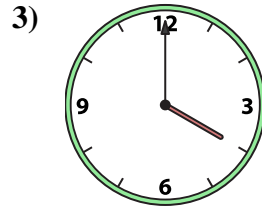
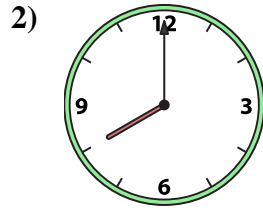
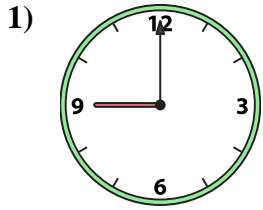




Match the analog clock to the digital clock.



A. 7:00

B. 8:30

C. 9:00

D. 2:00

E. 3:00

F. 12:00

G. 8:00

H. 3:30

I. 10:30

J. 7:30

K. 12:00

L. 4:00

M. 1:00

N. 4:30

O. 9:30

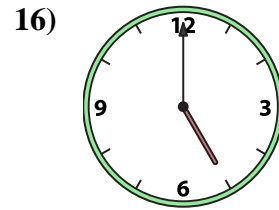
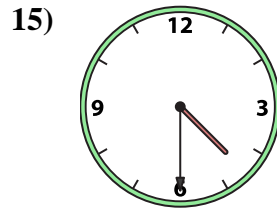
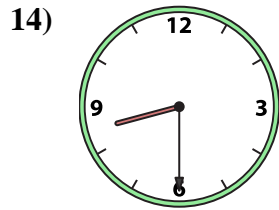
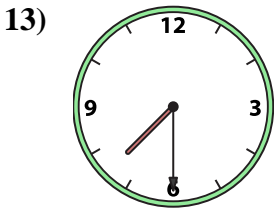
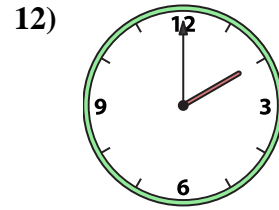
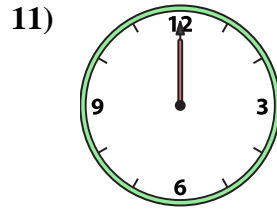
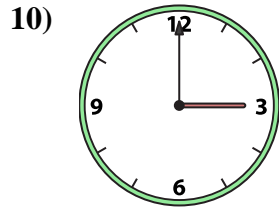
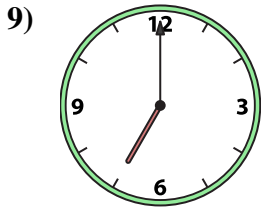
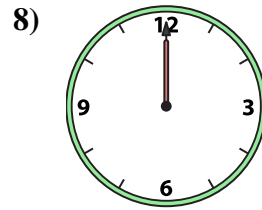
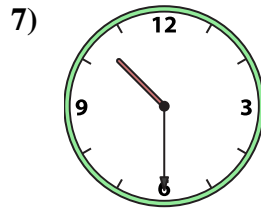
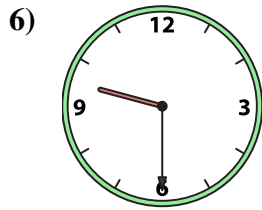

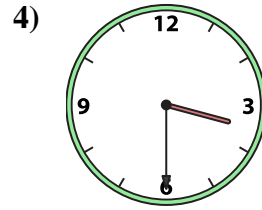
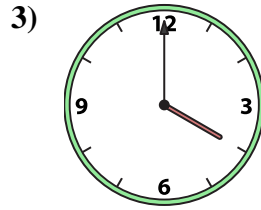
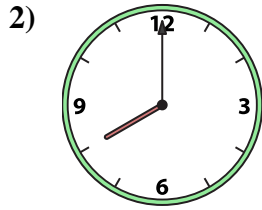
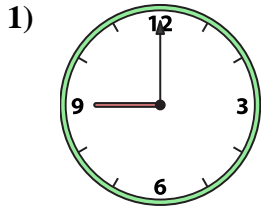
P. 5:00

Answers

1. \_\_\_\_\_
2. \_\_\_\_\_
3. \_\_\_\_\_
4. \_\_\_\_\_
5. \_\_\_\_\_
6. \_\_\_\_\_
7. \_\_\_\_\_
8. \_\_\_\_\_
9. \_\_\_\_\_
10. \_\_\_\_\_
11. \_\_\_\_\_
12. \_\_\_\_\_
13. \_\_\_\_\_
14. \_\_\_\_\_
15. \_\_\_\_\_
16. \_\_\_\_\_



Match the analog clock to the digital clock.



A. 7:00

B. 8:30

C. 9:00

D. 2:00

E. 3:00

F. 12:00

G. 8:00

H. 3:30

I. 10:30

J. 7:30

K. 12:00

L. 4:00

M. 1:00

N. 4:30

O. 9:30

P. 5:00

**Answers**

1. **C**

2. **G**

3. **L**

4. **H**

5. **M**

6. **O**

7. **I**

8. **K**

9. **A**

10. **E**

11. **F**

12. **D**

13. **J**

14. **B**

15. **N**

16. **P**