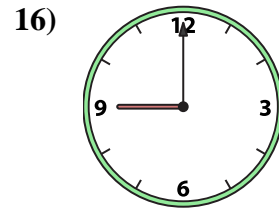
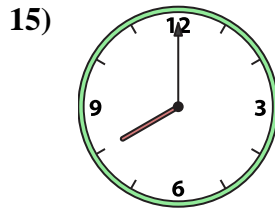
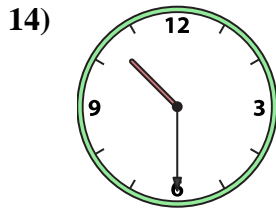
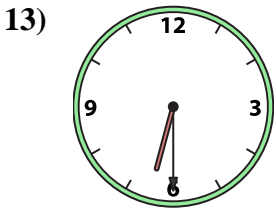
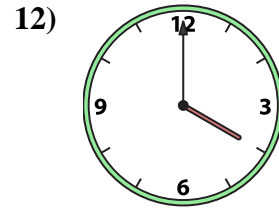
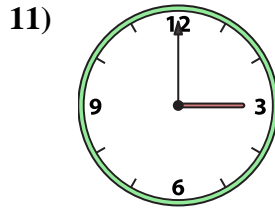
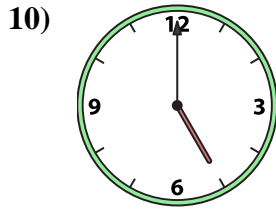
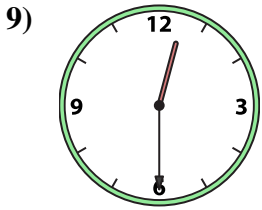
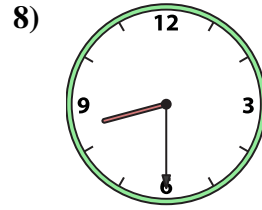
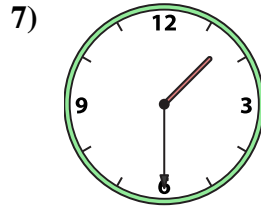
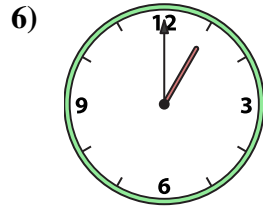
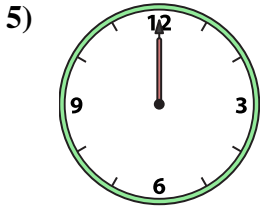
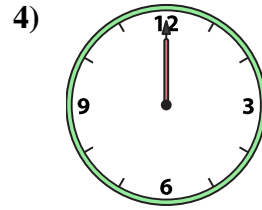
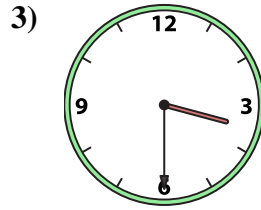
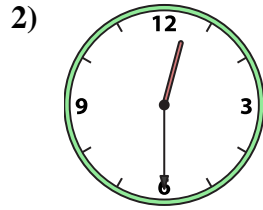





Match the analog clock to the digital clock.

Answers



A. 3:30

B. 9:00

C. 12:00

D. 12:00

E. 10:30

F. 12:30

G. 8:00

H. 11:00

I. 5:00

J. 1:30

K. 12:30

L. 4:00

M. 3:00

N. 6:30

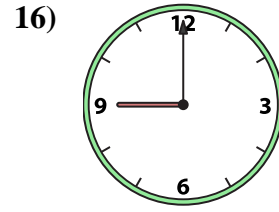
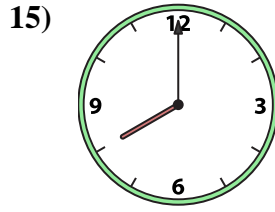
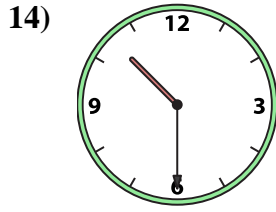
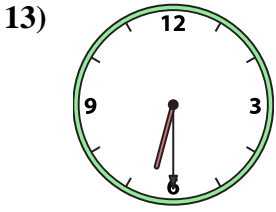
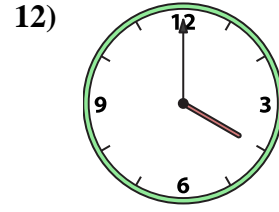
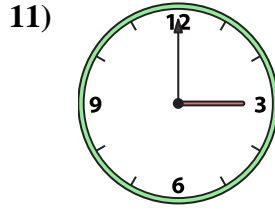
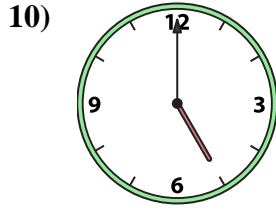
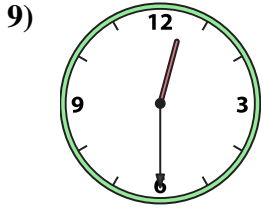
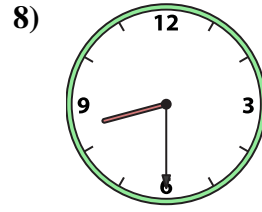
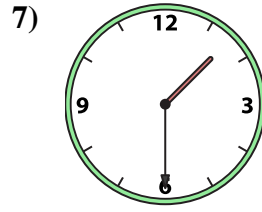
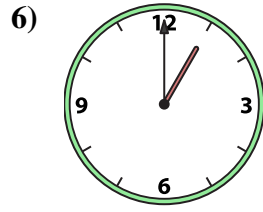
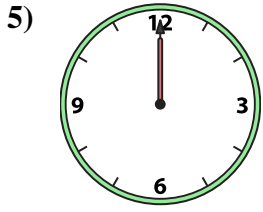
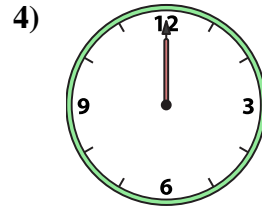
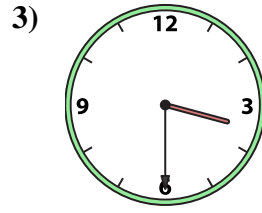
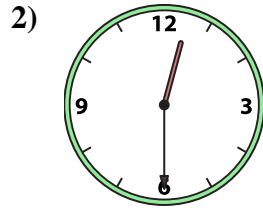

O. 8:30

P. 1:00

1. _____
2. _____
3. _____
4. _____
5. _____
6. _____
7. _____
8. _____
9. _____
10. _____
11. _____
12. _____
13. _____
14. _____
15. _____
16. _____



Match the analog clock to the digital clock.



A. 3:30

B. 9:00

C. 12:00

D. 12:00

E. 10:30

F. 12:30

G. 8:00

H. 11:00

I. 5:00

J. 1:30

K. 12:30

L. 4:00

M. 3:00

N. 6:30

O. 8:30

P. 1:00

Answers

1. **H**

2. **F**

3. **A**

4. **C**

5. **D**

6. **P**

7. **J**

8. **O**

9. **K**

10. **I**

11. **M**

12. **L**

13. **N**

14. **E**

15. **G**

16. **B**