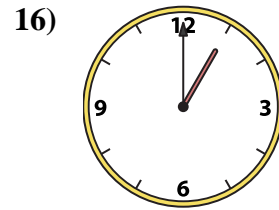
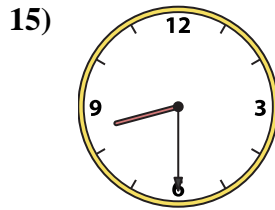
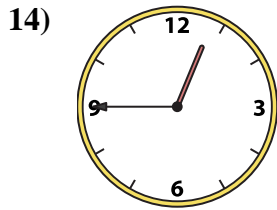
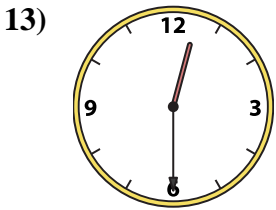
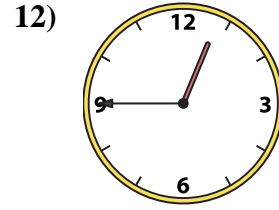
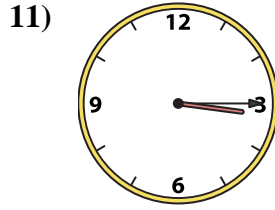
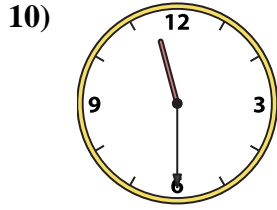
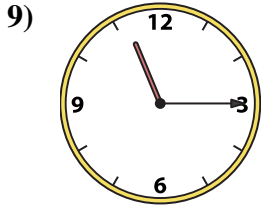
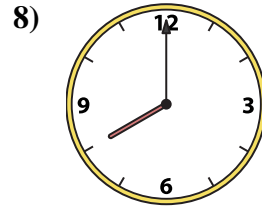
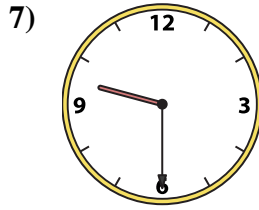

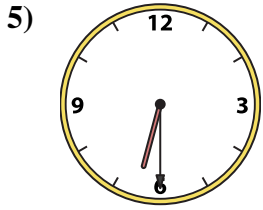
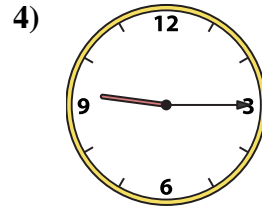
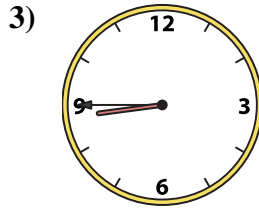
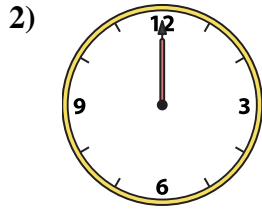
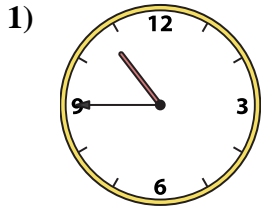




Match the analog clock to the digital clock.



**Answers**

1. \_\_\_\_\_
2. \_\_\_\_\_
3. \_\_\_\_\_
4. \_\_\_\_\_
5. \_\_\_\_\_
6. \_\_\_\_\_
7. \_\_\_\_\_
8. \_\_\_\_\_
9. \_\_\_\_\_
10. \_\_\_\_\_
11. \_\_\_\_\_
12. \_\_\_\_\_
13. \_\_\_\_\_
14. \_\_\_\_\_
15. \_\_\_\_\_
16. \_\_\_\_\_

A. 3:15

B. 12:45

C. 9:15

D. 1:00

E. 8:45

F. 12:00

G. 4:00

H. 12:30

I. 6:30

J. 10:45

K. 12:45

L. 8:00

M. 8:30

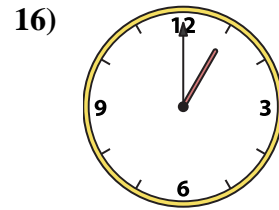
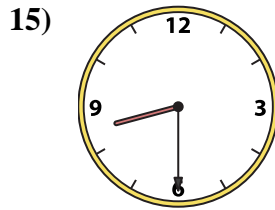
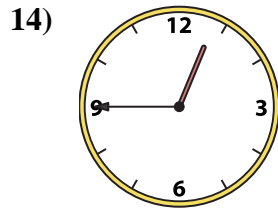
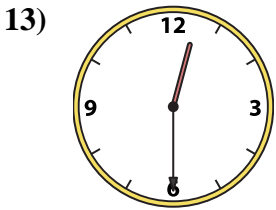
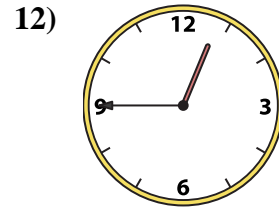
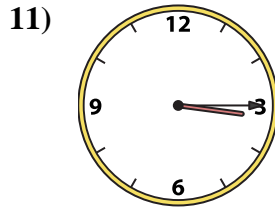
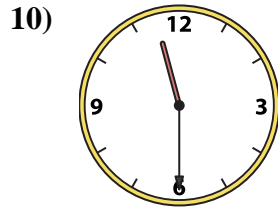
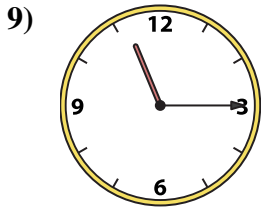
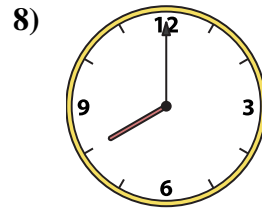
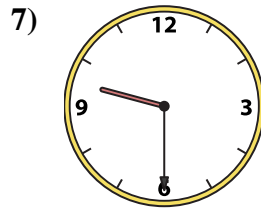
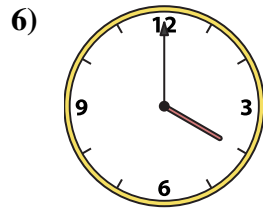
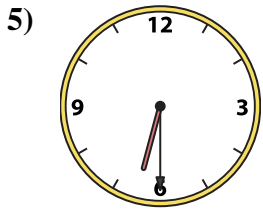
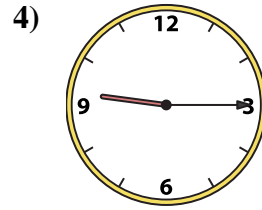
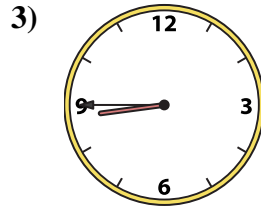
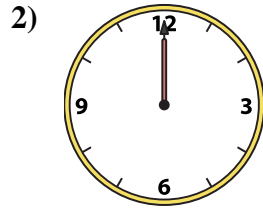
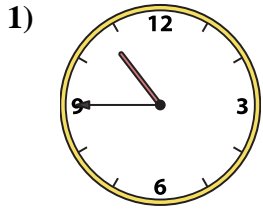
N. 9:30

O. 11:30

P. 11:15



Match the analog clock to the digital clock.



A. 3:15

B. 12:45

C. 9:15

D. 1:00

E. 8:45

F. 12:00

G. 4:00

H. 12:30

I. 6:30

J. 10:45

K. 12:45

L. 8:00

M. 8:30

N. 9:30

O. 11:30

P. 11:15

**Answers**

1. **J**

2. **F**

3. **E**

4. **C**

5. **I**

6. **G**

7. **N**

8. **L**

9. **P**

10. **O**

11. **A**

12. **B**

13. **H**

14. **K**

15. **M**

16. **D**