



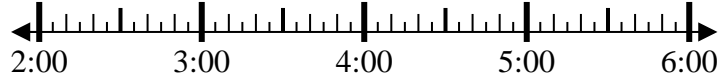
Solve each problem.

Answers

1) Start: _____

Elapsed: 2 hrs & 50 mins

End: 5:40

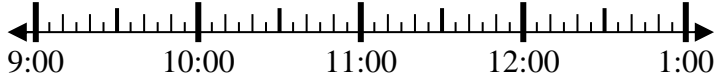


1. _____

2) Start: _____

Elapsed: 1 hr & 10 mins

End: 10:20

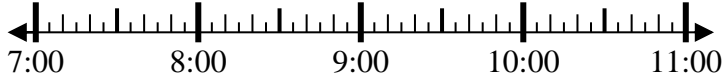


2. _____

3) Start: _____

Elapsed: 1 hr & 15 mins

End: 8:20

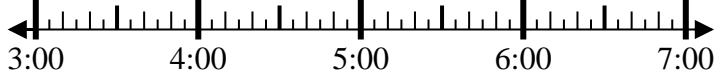


3. _____

4) Start: _____

Elapsed: 1 hr & 15 mins

End: 4:15



4. _____

5) Start: _____

Elapsed: 1 hr & 40 mins

End: 8:55

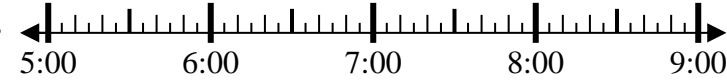


5. _____

6) Start: _____

Elapsed: 2 hrs & 15 mins

End: 7:15

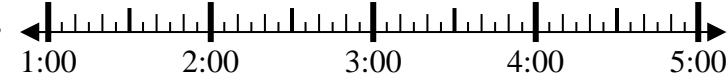


6. _____

7) Start: _____

Elapsed: 2 hrs & 45 mins

End: 3:45

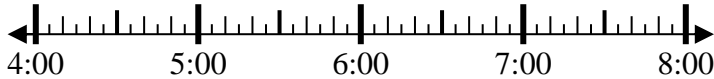


7. _____

8) Start: _____

Elapsed: 1 hr & 20 mins

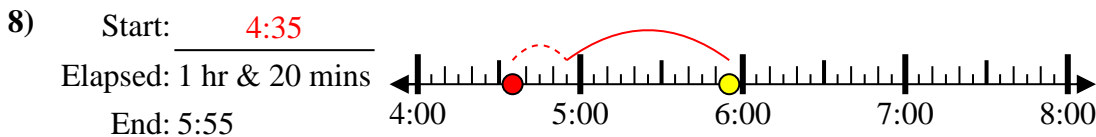
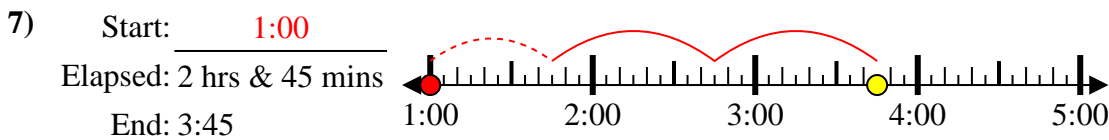
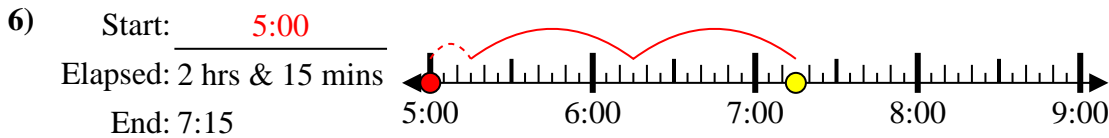
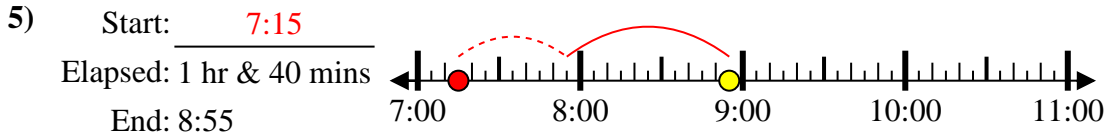
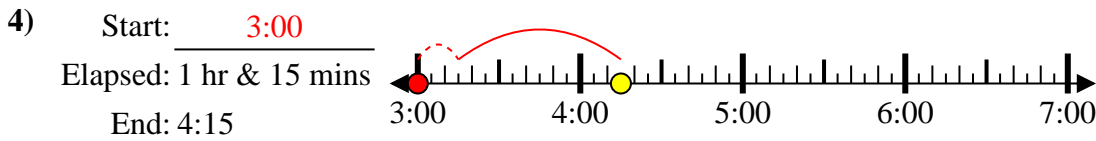
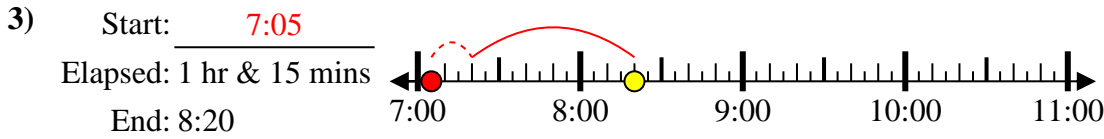
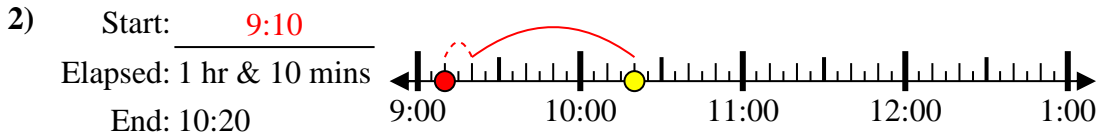
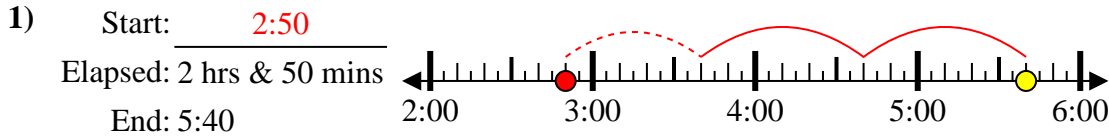
End: 5:55



8. _____



Solve each problem.



Answers

1. 2:50

2. 9:10

3. 7:05

4. 3:00

5. 7:15

6. 5:00

7. 1:00

8. 4:35