



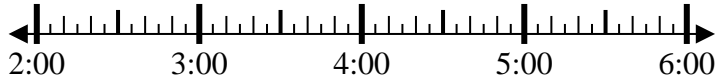
Solve each problem.

Answers

1) Start: _____

Elapsed: 1 hr & 40 mins

End: 3:55

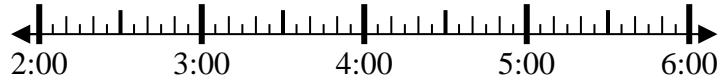


1. _____

2) Start: _____

Elapsed: 2 hrs & 45 mins

End: 4:55



2. _____

3) Start: _____

Elapsed: 2 hrs & 10 mins

End: 4:55



3. _____

4) Start: _____

Elapsed: 1 hr & 20 mins

End: 3:40

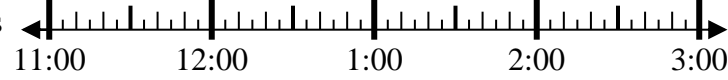


4. _____

5) Start: _____

Elapsed: 2 hrs & 25 mins

End: 1:30

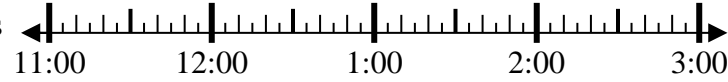


5. _____

6) Start: _____

Elapsed: 2 hrs & 20 mins

End: 1:25

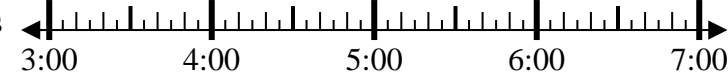


6. _____

7) Start: _____

Elapsed: 2 hrs & 20 mins

End: 6:05

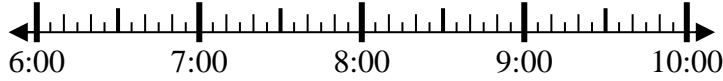


7. _____

8) Start: _____

Elapsed: 1 hr & 30 mins

End: 7:50

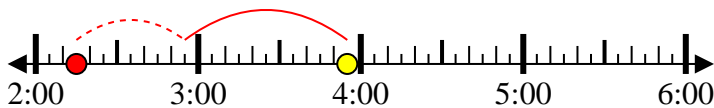


8. _____



Solve each problem.

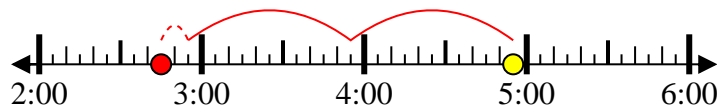
1) Start: 2:15
 Elapsed: 1 hr & 40 mins
 End: 3:55



2) Start: 2:10
 Elapsed: 2 hrs & 45 mins
 End: 4:55



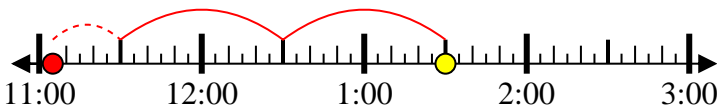
3) Start: 2:45
 Elapsed: 2 hrs & 10 mins
 End: 4:55



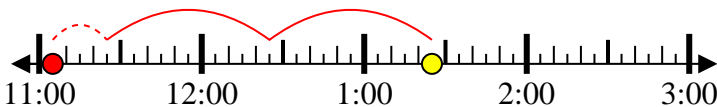
4) Start: 2:20
 Elapsed: 1 hr & 20 mins
 End: 3:40



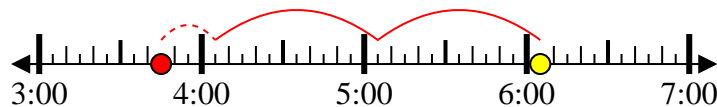
5) Start: 11:05
 Elapsed: 2 hrs & 25 mins
 End: 1:30



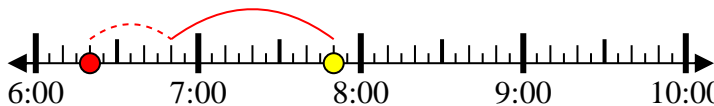
6) Start: 11:05
 Elapsed: 2 hrs & 20 mins
 End: 1:25



7) Start: 3:45
 Elapsed: 2 hrs & 20 mins
 End: 6:05



8) Start: 6:20
 Elapsed: 1 hr & 30 mins
 End: 7:50



Answers

1. 2:15

2. 2:10

3. 2:45

4. 2:20

5. 11:05

6. 11:05

7. 3:45

8. 6:20