



Solve each problem.

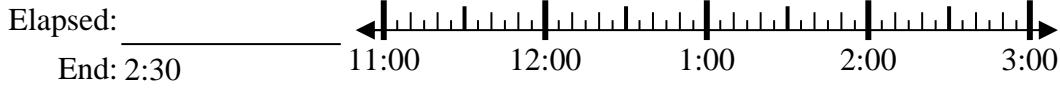
Answers

1) Start: 1:00



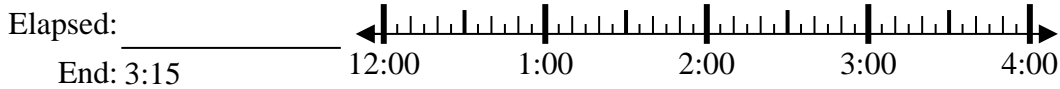
1. \_\_\_\_\_

2) Start: 11:45



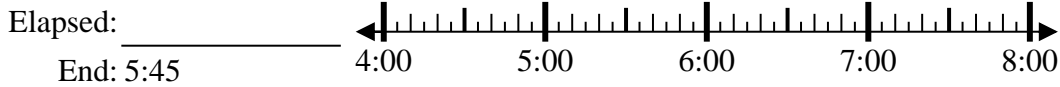
2. \_\_\_\_\_

3) Start: 12:40



3. \_\_\_\_\_

4) Start: 4:05



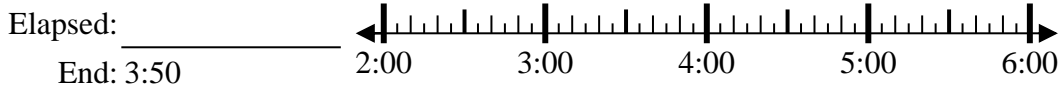
4. \_\_\_\_\_

5) Start: 11:15



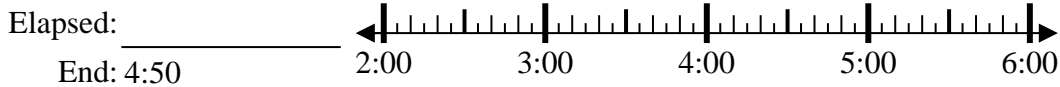
5. \_\_\_\_\_

6) Start: 2:30



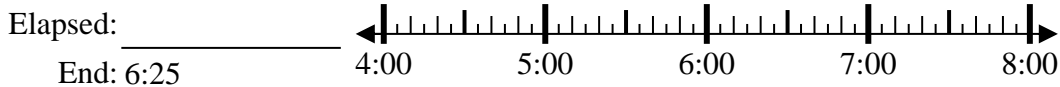
6. \_\_\_\_\_

7) Start: 2:30



7. \_\_\_\_\_

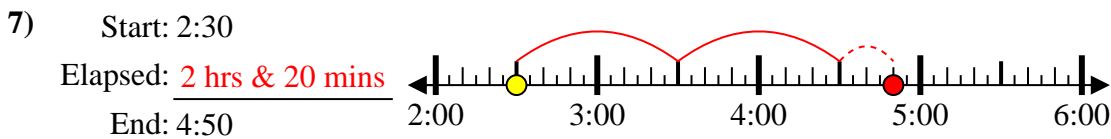
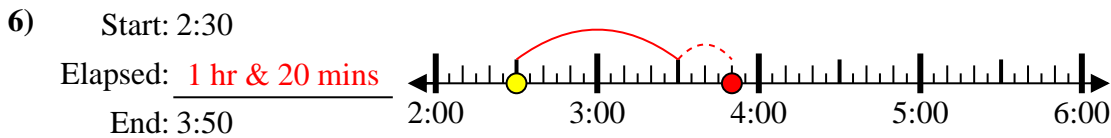
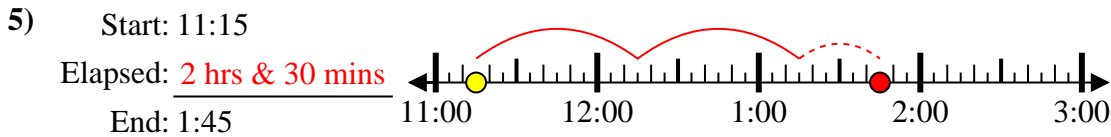
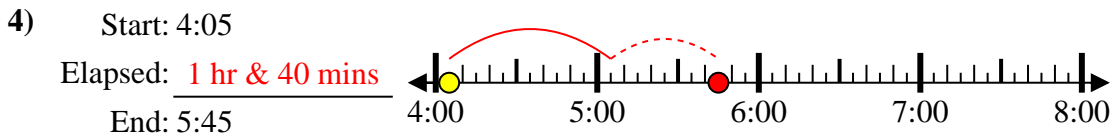
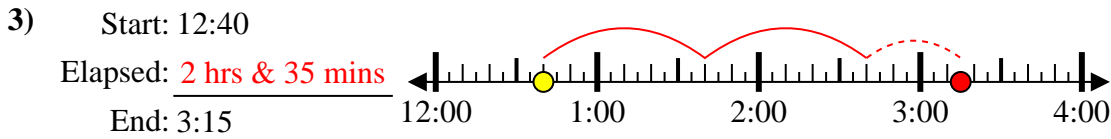
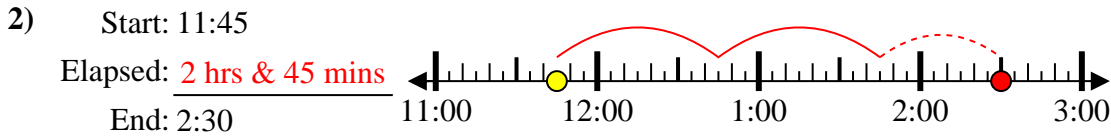
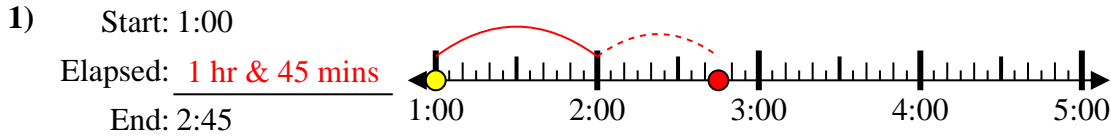
8) Start: 4:15



8. \_\_\_\_\_



Solve each problem.



Answers

1. 1 hr & 45 mins

2. 2 hrs & 45 mins

3. 2 hrs & 35 mins

4. 1 hr & 40 mins

5. 2 hrs & 30 mins

6. 1 hr & 20 mins

7. 2 hrs & 20 mins

8. 2 hrs & 10 mins