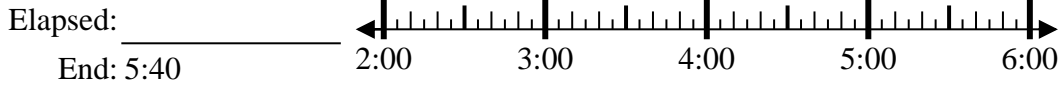




Solve each problem.

Answers

1) Start: 2:50



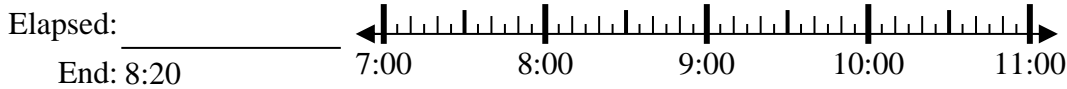
1. _____

2) Start: 9:10



2. _____

3) Start: 7:05



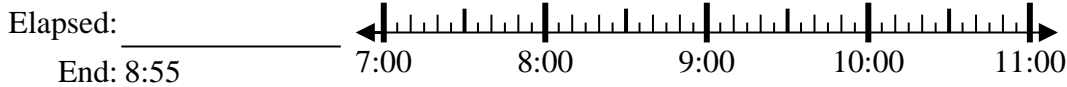
3. _____

4) Start: 3:00



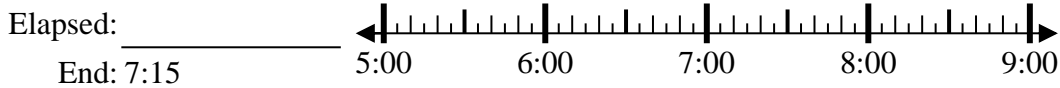
4. _____

5) Start: 7:15



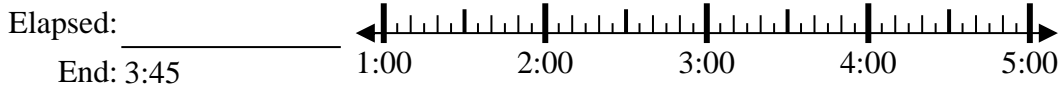
5. _____

6) Start: 5:00



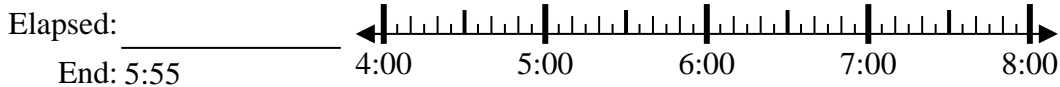
6. _____

7) Start: 1:00



7. _____

8) Start: 4:35



8. _____

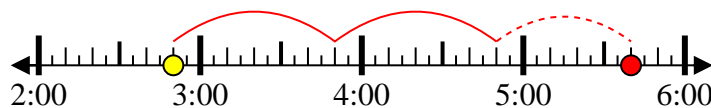


Solve each problem.

1) Start: 2:50

Elapsed: 2 hrs & 50 mins

End: 5:40



2) Start: 9:10

Elapsed: 1 hr & 10 mins

End: 10:20



3) Start: 7:05

Elapsed: 1 hr & 15 mins

End: 8:20



4) Start: 3:00

Elapsed: 1 hr & 15 mins

End: 4:15



5) Start: 7:15

Elapsed: 1 hr & 40 mins

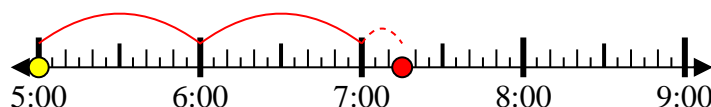
End: 8:55



6) Start: 5:00

Elapsed: 2 hrs & 15 mins

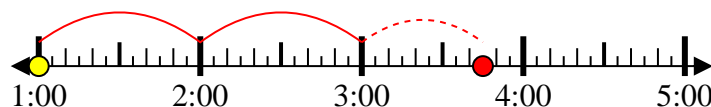
End: 7:15



7) Start: 1:00

Elapsed: 2 hrs & 45 mins

End: 3:45



8) Start: 4:35

Elapsed: 1 hr & 20 mins

End: 5:55



Answers

1. 2 hrs & 50 mins

2. 1 hr & 10 mins

3. 1 hr & 15 mins

4. 1 hr & 15 mins

5. 1 hr & 40 mins

6. 2 hrs & 15 mins

7. 2 hrs & 45 mins

8. 1 hr & 20 mins