

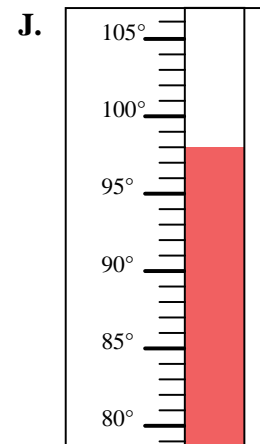
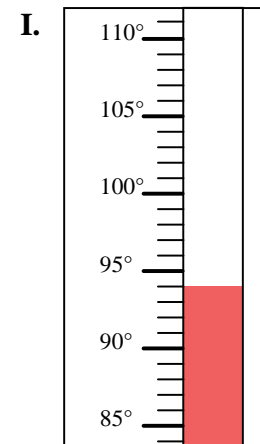
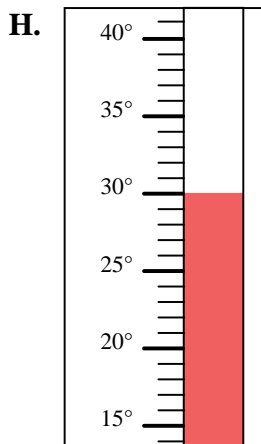
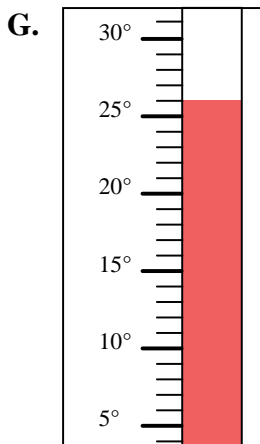
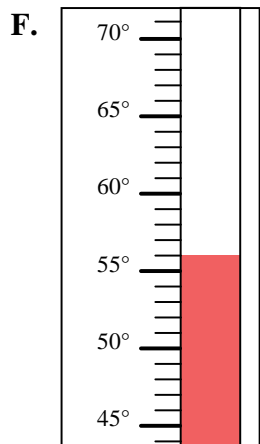
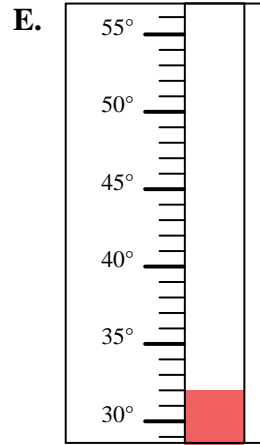
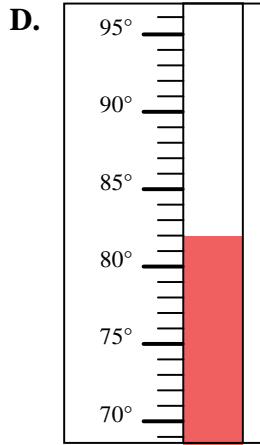
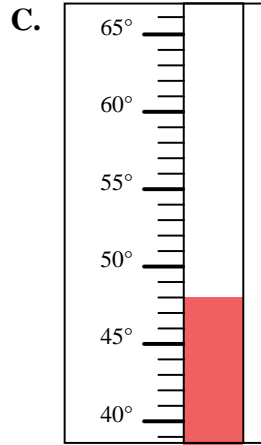
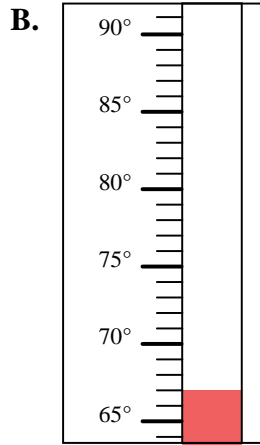
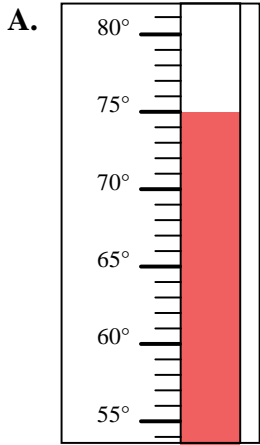


Determine which letter best answers each question.

Answers

- 1) Which thermometer best represents the temperature 48°?
- 2) Which thermometer best represents the temperature 56°?
- 3) Which thermometer best represents the temperature 75°?
- 4) Which thermometer best represents the temperature 26°?
- 5) Which thermometer best represents the temperature 30°?
- 6) Which thermometer best represents the temperature 32°?
- 7) Which thermometer best represents the temperature 67°?
- 8) Which thermometer best represents the temperature 82°?
- 9) Which thermometer best represents the temperature 98°?
- 10) Which thermometer best represents the temperature 94°?

1. _____
2. _____
3. _____
4. _____
5. _____
6. _____
7. _____
8. _____
9. _____
10. _____





Determine which letter best answers each question.

- 1) Which thermometer best represents the temperature 48°?
- 2) Which thermometer best represents the temperature 56°?
- 3) Which thermometer best represents the temperature 75°?
- 4) Which thermometer best represents the temperature 26°?
- 5) Which thermometer best represents the temperature 30°?
- 6) Which thermometer best represents the temperature 32°?
- 7) Which thermometer best represents the temperature 67°?
- 8) Which thermometer best represents the temperature 82°?
- 9) Which thermometer best represents the temperature 98°?
- 10) Which thermometer best represents the temperature 94°?

Answers

1. **C**
2. **F**
3. **A**
4. **G**
5. **H**
6. **E**
7. **B**
8. **D**
9. **J**
10. **I**

