

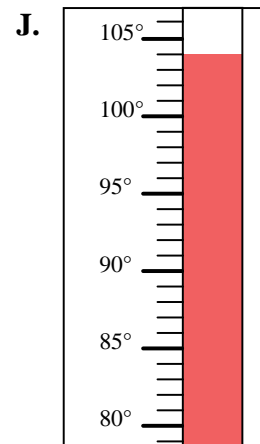
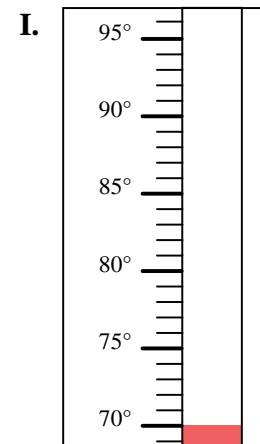
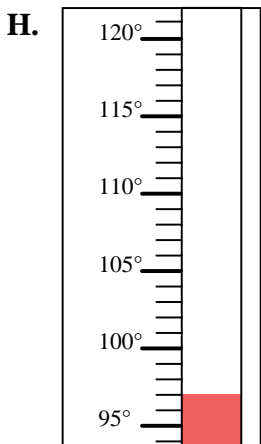
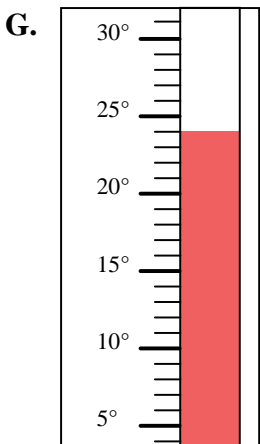
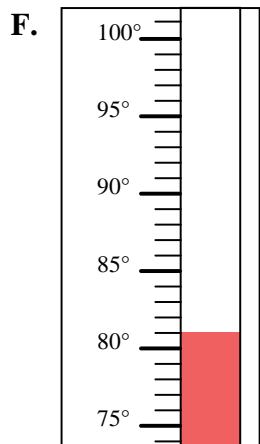
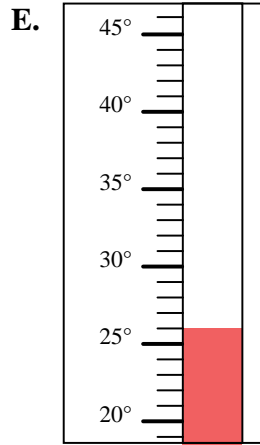
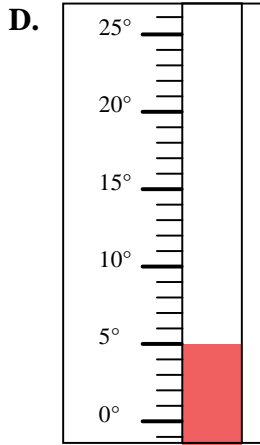
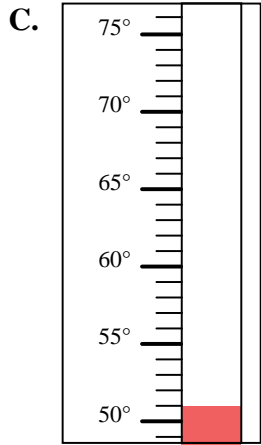
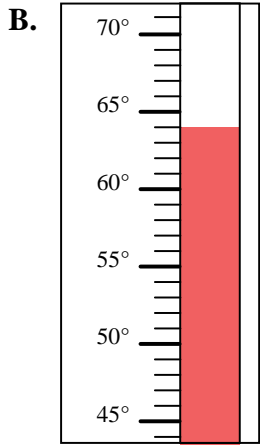
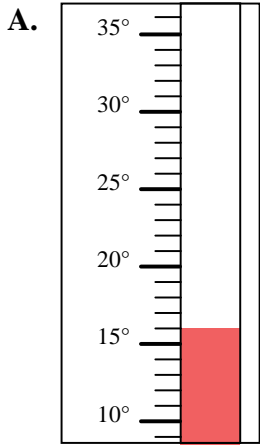


Determine which letter best answers each question.

**Answers**

- 1) Which thermometer best represents the temperature 70°?
- 2) Which thermometer best represents the temperature 51°?
- 3) Which thermometer best represents the temperature 64°?
- 4) Which thermometer best represents the temperature 26°?
- 5) Which thermometer best represents the temperature 104°?
- 6) Which thermometer best represents the temperature 97°?
- 7) Which thermometer best represents the temperature 5°?
- 8) Which thermometer best represents the temperature 81°?
- 9) Which thermometer best represents the temperature 16°?
- 10) Which thermometer best represents the temperature 24°?

1. \_\_\_\_\_
2. \_\_\_\_\_
3. \_\_\_\_\_
4. \_\_\_\_\_
5. \_\_\_\_\_
6. \_\_\_\_\_
7. \_\_\_\_\_
8. \_\_\_\_\_
9. \_\_\_\_\_
10. \_\_\_\_\_





Determine which letter best answers each question.

- 1) Which thermometer best represents the temperature  $70^{\circ}$ ?
- 2) Which thermometer best represents the temperature  $51^{\circ}$ ?
- 3) Which thermometer best represents the temperature  $64^{\circ}$ ?
- 4) Which thermometer best represents the temperature  $26^{\circ}$ ?
- 5) Which thermometer best represents the temperature  $104^{\circ}$ ?
- 6) Which thermometer best represents the temperature  $97^{\circ}$ ?
- 7) Which thermometer best represents the temperature  $5^{\circ}$ ?
- 8) Which thermometer best represents the temperature  $81^{\circ}$ ?
- 9) Which thermometer best represents the temperature  $16^{\circ}$ ?
- 10) Which thermometer best represents the temperature  $24^{\circ}$ ?

**Answers**

1.     **I**
2.     **C**
3.     **B**
4.     **E**
5.     **J**
6.     **H**
7.     **D**
8.     **F**
9.     **A**
10.     **G**

