

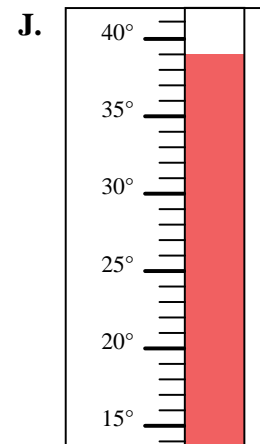
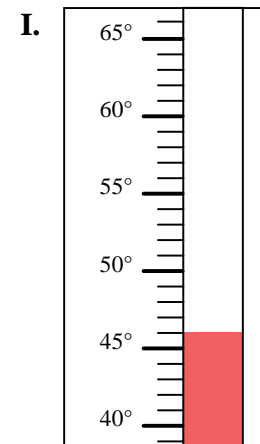
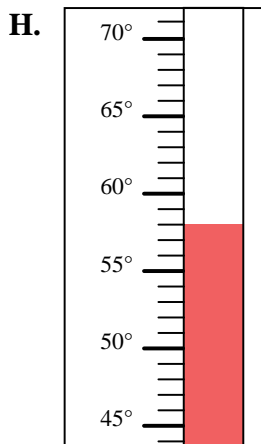
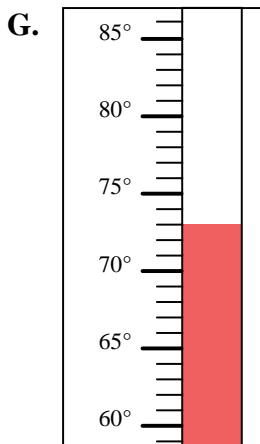
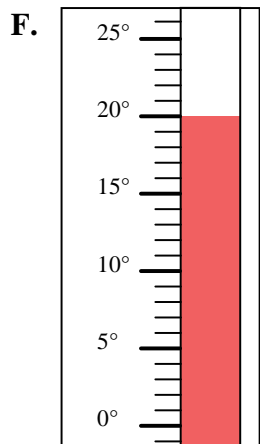
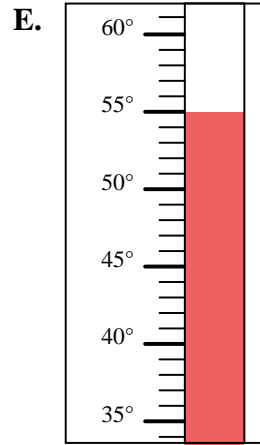
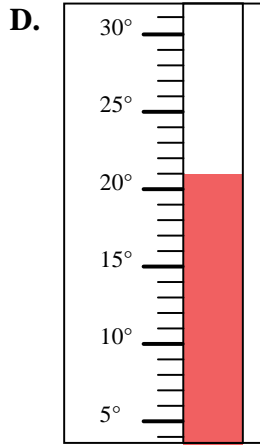
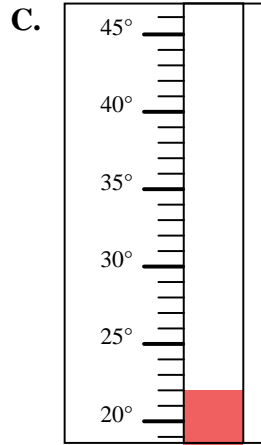
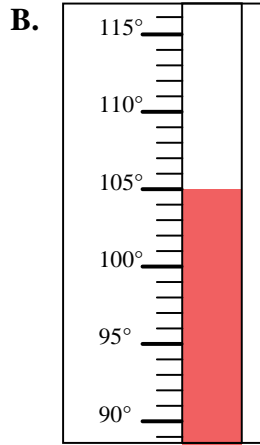
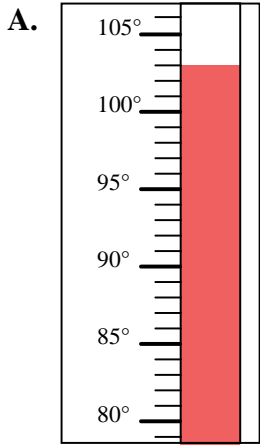


Determine which letter best answers each question.

Answers

- 1) Which thermometer best represents the temperature 103°?
- 2) Which thermometer best represents the temperature 73°?
- 3) Which thermometer best represents the temperature 22°?
- 4) Which thermometer best represents the temperature 21°?
- 5) Which thermometer best represents the temperature 46°?
- 6) Which thermometer best represents the temperature 20°?
- 7) Which thermometer best represents the temperature 39°?
- 8) Which thermometer best represents the temperature 55°?
- 9) Which thermometer best represents the temperature 105°?
- 10) Which thermometer best represents the temperature 58°?

1. _____
2. _____
3. _____
4. _____
5. _____
6. _____
7. _____
8. _____
9. _____
10. _____





Determine which letter best answers each question.

- 1) Which thermometer best represents the temperature 103° ?
- 2) Which thermometer best represents the temperature 73° ?
- 3) Which thermometer best represents the temperature 22° ?
- 4) Which thermometer best represents the temperature 21° ?
- 5) Which thermometer best represents the temperature 46° ?
- 6) Which thermometer best represents the temperature 20° ?
- 7) Which thermometer best represents the temperature 39° ?
- 8) Which thermometer best represents the temperature 55° ?
- 9) Which thermometer best represents the temperature 105° ?
- 10) Which thermometer best represents the temperature 58° ?

Answers

1. **A**
2. **G**
3. **C**
4. **D**
5. **I**
6. **F**
7. **J**
8. **E**
9. **B**
10. **H**

