



Match each table with the appropriate graph.

Answers

1)

| Name | Cans Recycled |
|--------|---------------|
| Allen | |
| Beth | |
| Rick | |
| Andrea | |
| Dale | |

2)

| Name | Cans Recycled |
|--------|---------------|
| Allen | |
| Beth | |
| Rick | |
| Andrea | |
| Dale | |

3)

| Name | Cans Recycled |
|--------|---------------|
| Allen | |
| Beth | |
| Rick | |
| Andrea | |
| Dale | |

4)

| Name | Cans Recycled |
|--------|---------------|
| Allen | |
| Beth | |
| Rick | |
| Andrea | |
| Dale | |

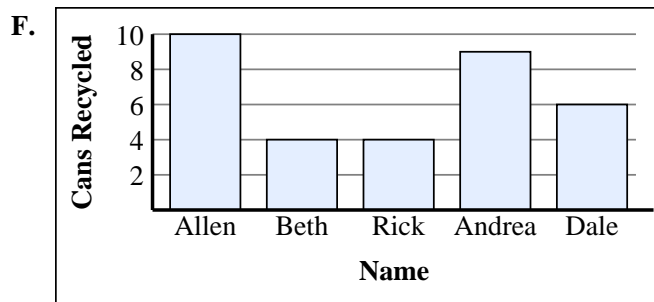
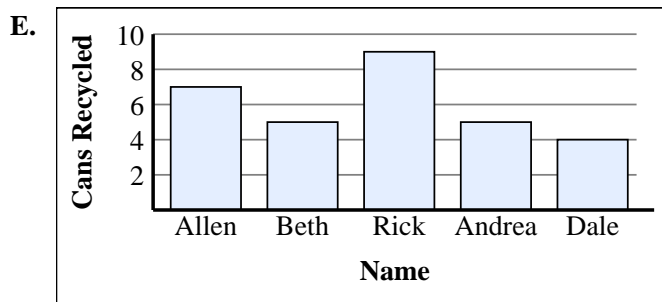
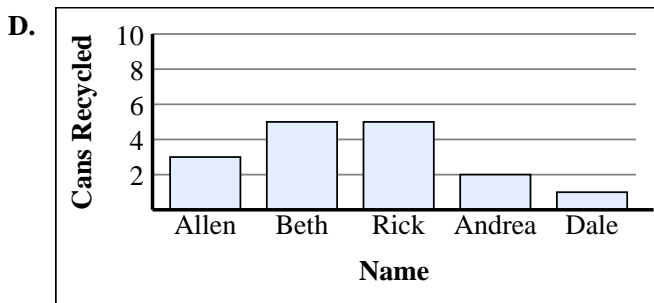
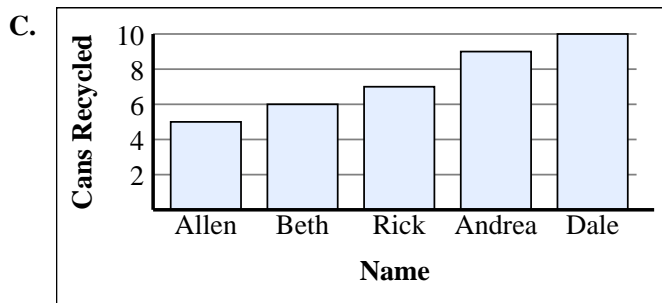
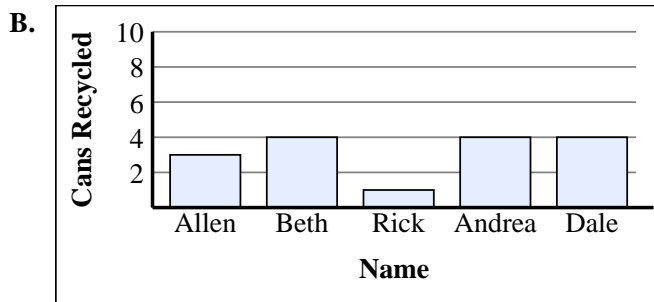
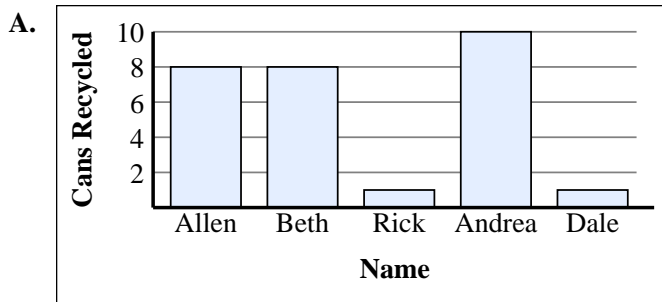
5)

| Name | Cans Recycled |
|--------|---------------|
| Allen | |
| Beth | |
| Rick | |
| Andrea | |
| Dale | |

6)

| Name | Cans Recycled |
|--------|---------------|
| Allen | |
| Beth | |
| Rick | |
| Andrea | |
| Dale | |

1. _____
2. _____
3. _____
4. _____
5. _____
6. _____





Match each table with the appropriate graph.

1)

| Name | Cans Recycled |
|--------|---------------|
| Allen | |
| Beth | |
| Rick | |
| Andrea | |
| Dale | |

2)

| Name | Cans Recycled |
|--------|---------------|
| Allen | |
| Beth | |
| Rick | |
| Andrea | |
| Dale | |

3)

| Name | Cans Recycled |
|--------|---------------|
| Allen | |
| Beth | |
| Rick | |
| Andrea | |
| Dale | |

4)

| Name | Cans Recycled |
|--------|---------------|
| Allen | |
| Beth | |
| Rick | |
| Andrea | |
| Dale | |

5)

| Name | Cans Recycled |
|--------|---------------|
| Allen | |
| Beth | |
| Rick | |
| Andrea | |
| Dale | |

6)

| Name | Cans Recycled |
|--------|---------------|
| Allen | |
| Beth | |
| Rick | |
| Andrea | |
| Dale | |

Answers

1. **B**
2. **F**
3. **D**
4. **C**
5. **A**
6. **E**

