



Use the visual model to solve each problem.

Answers

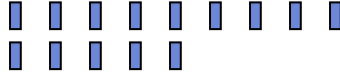
1) There are 13 stars below.



If you were to take away 1, how many would be left?

$13 - 1 = ?$

2) There are 14 rectangles below.



If you were to take away 13, how many would be left?

$14 - 13 = ?$

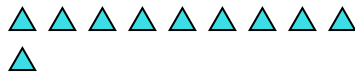
3) There are 5 stars below.



If you were to take away 2, how many would be left?

$5 - 2 = ?$

4) There are 10 triangles below.



If you were to take away 3, how many would be left?

$10 - 3 = ?$

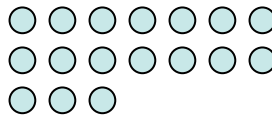
5) There are 3 stars below.



If you were to take away 2, how many would be left?

$3 - 2 = ?$

6) There are 17 circles below.



If you were to take away 4, how many would be left?

$17 - 4 = ?$

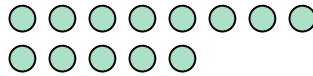
7) There are 5 pentagons below.



If you were to take away 4, how many would be left?

$5 - 4 = ?$

8) There are 13 circles below.



If you were to take away 12, how many would be left?

$13 - 12 = ?$

9) There are 2 circles below.



If you were to take away 1, how many would be left?

$2 - 1 = ?$

10) There are 12 stars below.



If you were to take away 5, how many would be left?

$12 - 5 = ?$

- 1. \_\_\_\_\_
- 2. \_\_\_\_\_
- 3. \_\_\_\_\_
- 4. \_\_\_\_\_
- 5. \_\_\_\_\_
- 6. \_\_\_\_\_
- 7. \_\_\_\_\_
- 8. \_\_\_\_\_
- 9. \_\_\_\_\_
- 10. \_\_\_\_\_



Use the visual model to solve each problem.

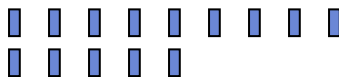
1) There are 13 stars below.



If you were to take away 1, how many would be left?

13 - 1 = ?

2) There are 14 rectangles below.



If you were to take away 13, how many would be left?

14 - 13 = ?

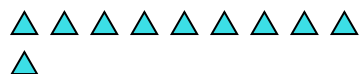
3) There are 5 stars below.



If you were to take away 2, how many would be left?

5 - 2 = ?

4) There are 10 triangles below.



If you were to take away 3, how many would be left?

10 - 3 = ?

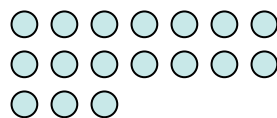
5) There are 3 stars below.



If you were to take away 2, how many would be left?

3 - 2 = ?

6) There are 17 circles below.



If you were to take away 4, how many would be left?

17 - 4 = ?


7) There are 5 pentagons below.



If you were to take away 4, how many would be left?

5 - 4 = ?

8) There are 13 circles below.



If you were to take away 12, how many would be left?

13 - 12 = ?

9) There are 2 circles below.



If you were to take away 1, how many would be left?

2 - 1 = ?

10) There are 12 stars below.



If you were to take away 5, how many would be left?

12 - 5 = ?

Answers

1. 12

2. 1

3. 3

4. 7

5. 1

6. 13

7. 1

8. 1

9. 1

10. 7