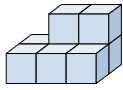




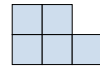
Solve each problem.

Answers

1) If you were looking at the 3d shape from the left side what would you see?

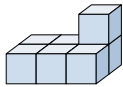


- A. B. C. D.



1. _____

2) If you were looking at the 3d shape from the right side what would you see?

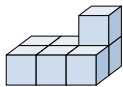


- A. B. C. D.

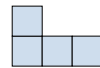


2. _____

3) If you were looking at the 3d shape from the back what would you see?

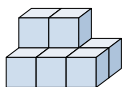


- A. B. C. D.



3. _____

4) If you were looking at the 3d shape from above what would you see?

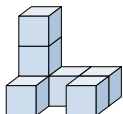


- A. B. C. D.

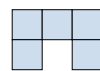


4. _____

5) If you were looking at the 3d shape from above what would you see?



- A. B. C. D.

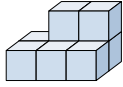


5. _____



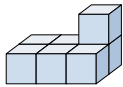
Solve each problem.

1) If you were looking at the 3d shape from the left side what would you see?



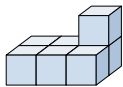
- A.
- B.
- C.
- D.

2) If you were looking at the 3d shape from the right side what would you see?



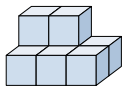
- A.
- B.
- C.
- D.

3) If you were looking at the 3d shape from the back what would you see?



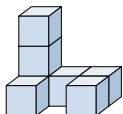
- A.
- B.
- C.
- D.

4) If you were looking at the 3d shape from above what would you see?



- A.
- B.
- C.
- D.

5) If you were looking at the 3d shape from above what would you see?



- A.
- B.
- C.
- D.

Answers

- 1. **A**
- 2. **D**
- 3. **D**
- 4. **B**
- 5. **D**