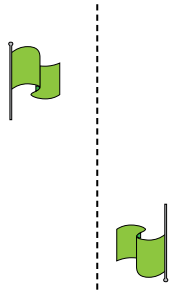




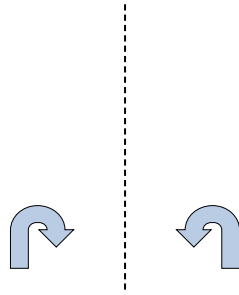
Determine if the shape is translating (slide), rotating (turn) or reflecting (flip).

Answers

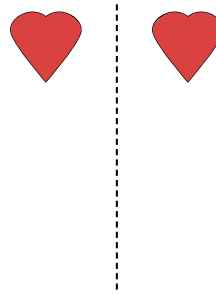
1)



2)



3)



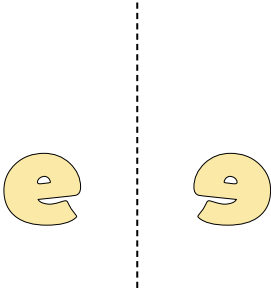
1. \_\_\_\_\_

2. \_\_\_\_\_


3. \_\_\_\_\_

4. \_\_\_\_\_

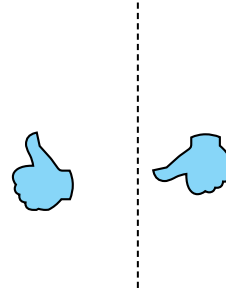
4)



5)



6)



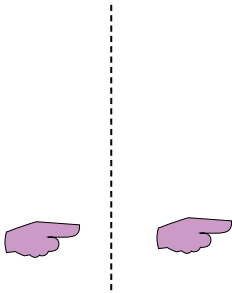
5. \_\_\_\_\_

6. \_\_\_\_\_

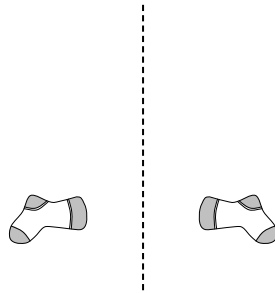
7. \_\_\_\_\_

8. \_\_\_\_\_

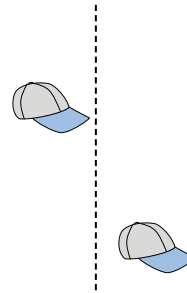
7)



8)



9)



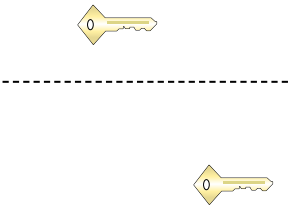
9. \_\_\_\_\_

10. \_\_\_\_\_

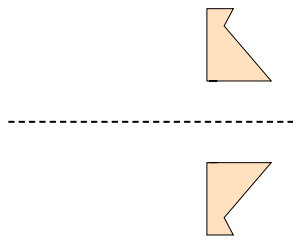
11. \_\_\_\_\_

12. \_\_\_\_\_

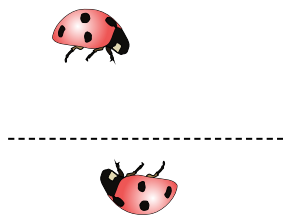
10)



11)



12)




13. \_\_\_\_\_

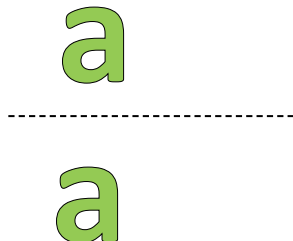
14. \_\_\_\_\_

15. \_\_\_\_\_

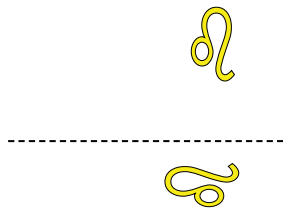
13)



14)

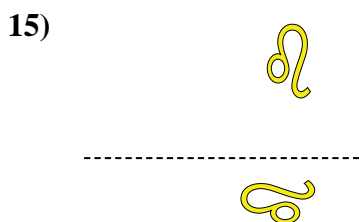
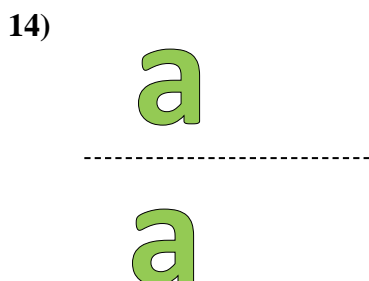

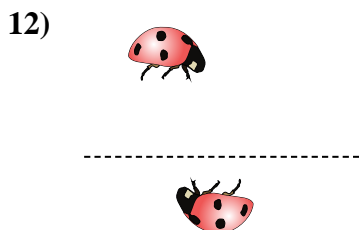
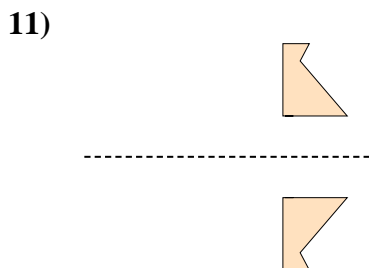
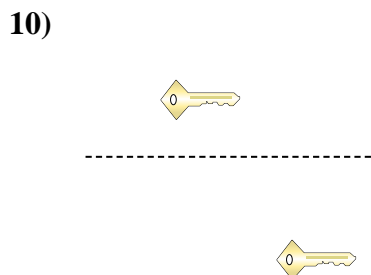
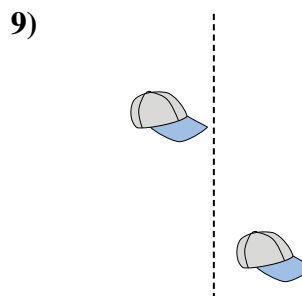
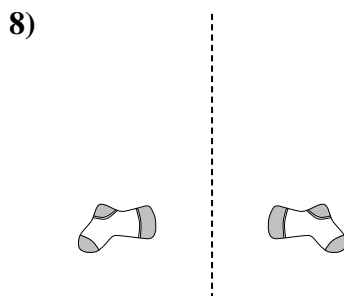
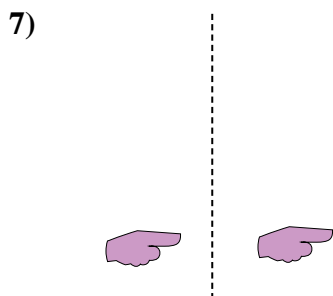


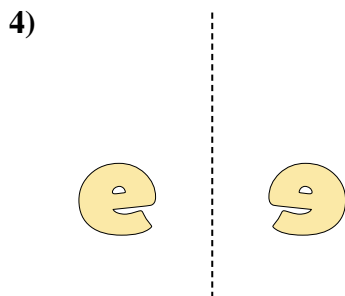
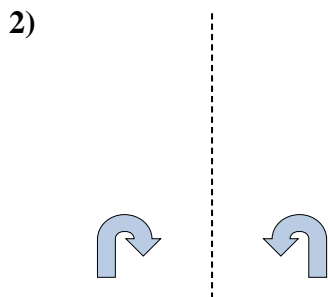



15)





Determine if the shape is translating (slide), rotating (turn) or reflecting (flip).



Answers

1. rotating

2. reflecting

3. reflecting

4. reflecting

5. translating

6. rotating

7. translating

8. reflecting

9. translating

10. translating

11. reflecting

12. rotating

13. rotating

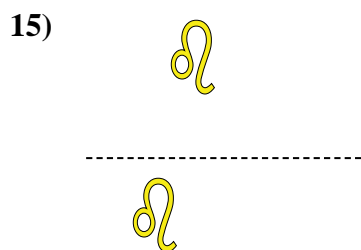
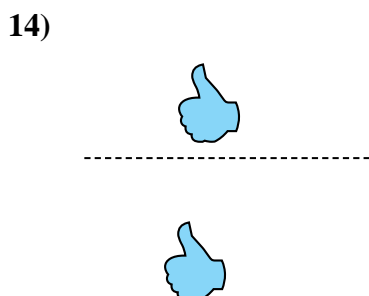
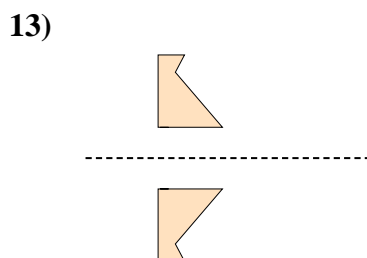
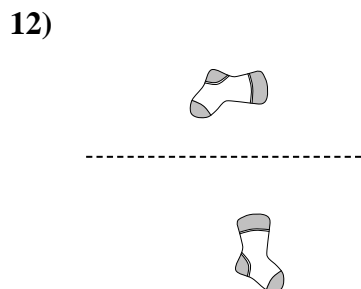
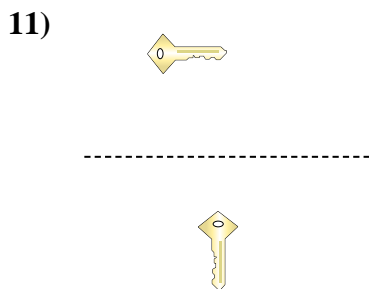



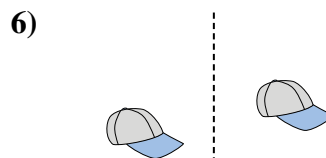
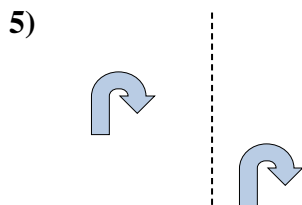

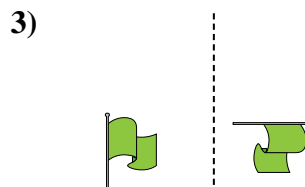


14. translating

15. rotating



Determine if the shape is translating (slide), rotating (turn) or reflecting (flip).

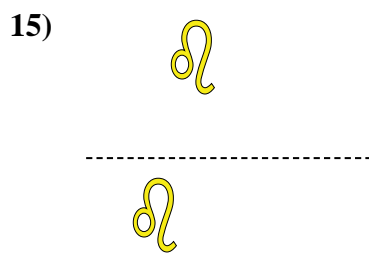
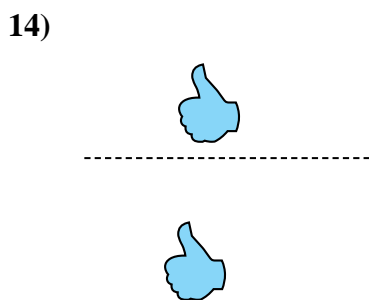
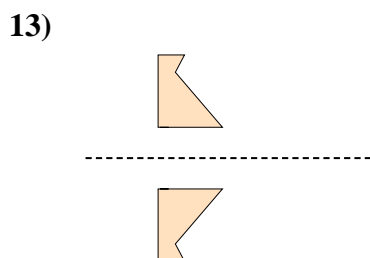
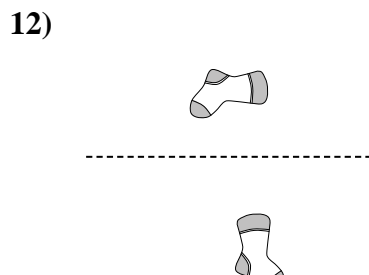
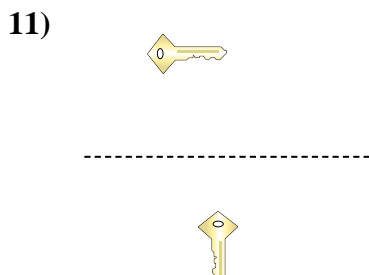
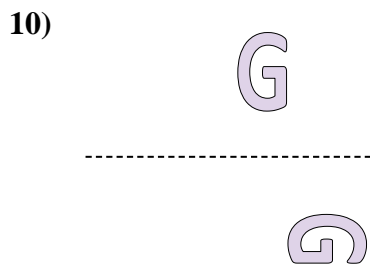
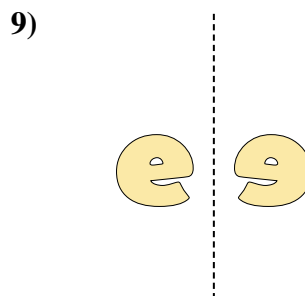
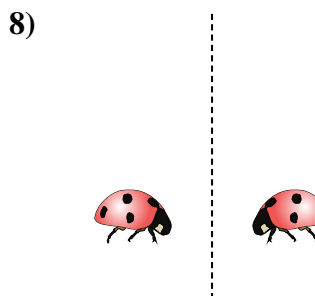
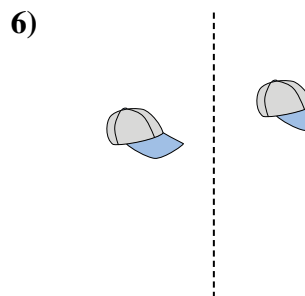
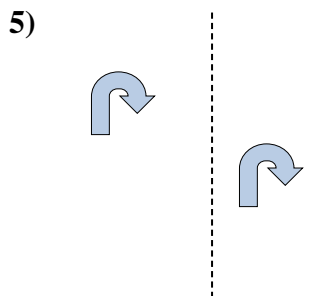

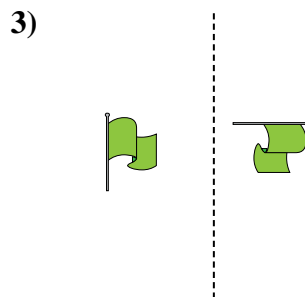
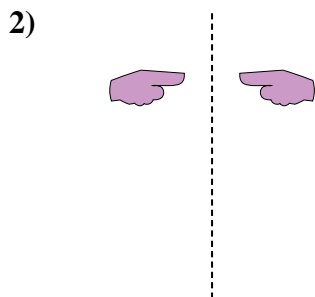

**Answers**



1. \_\_\_\_\_
2. \_\_\_\_\_
3. \_\_\_\_\_
4. \_\_\_\_\_
5. \_\_\_\_\_
6. \_\_\_\_\_
7. \_\_\_\_\_
8. \_\_\_\_\_
9. \_\_\_\_\_
10. \_\_\_\_\_
11. \_\_\_\_\_
12. \_\_\_\_\_
13. \_\_\_\_\_
14. \_\_\_\_\_
15. \_\_\_\_\_



Determine if the shape is translating (slide), rotating (turn) or reflecting (flip).



Answers

1. rotating

2. reflecting

3. rotating

4. reflecting

5. translating

6. translating

7. translating

8. reflecting

9. reflecting

10. rotating

11. rotating

12. rotating

13. reflecting

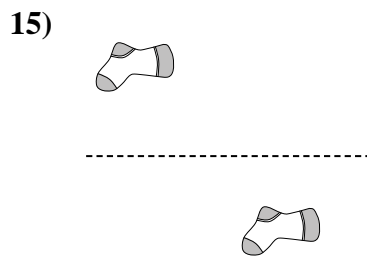
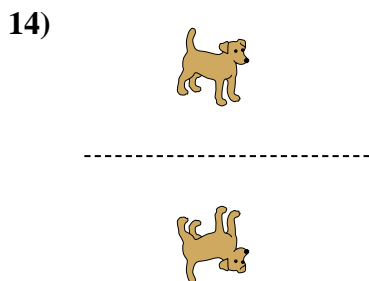
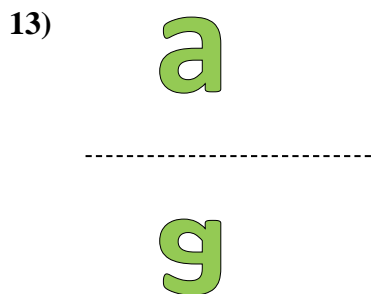
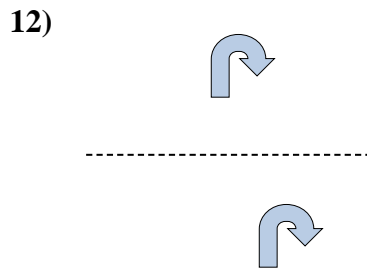
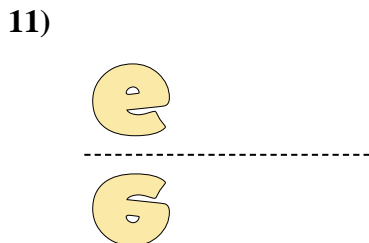
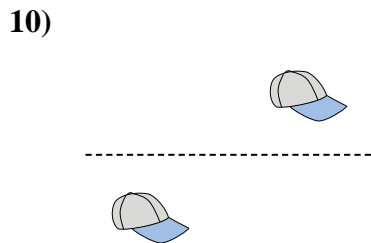



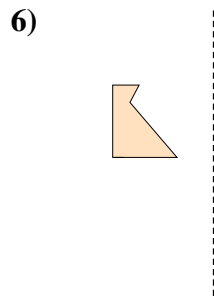




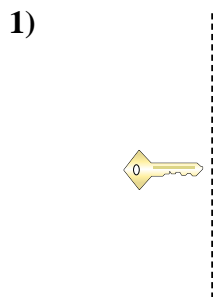
14. translating

15. translating



Determine if the shape is translating (slide), rotating (turn) or reflecting (flip).

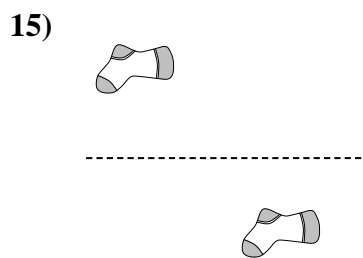
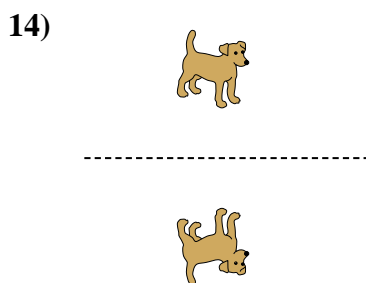
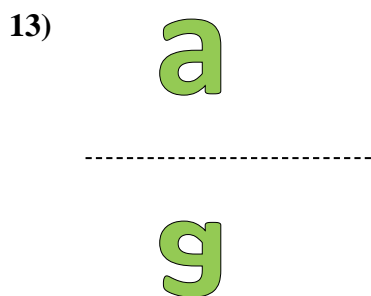
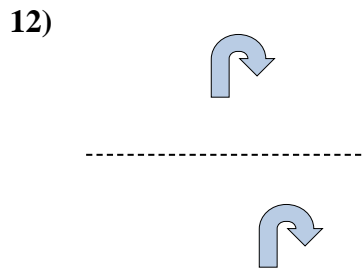
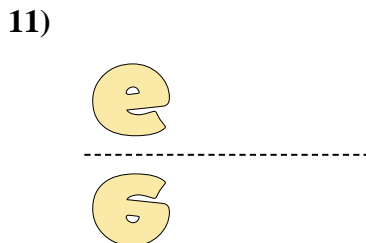
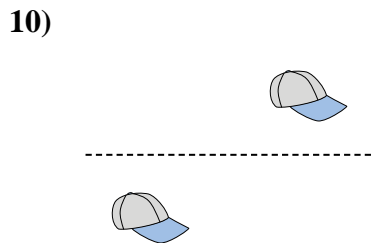
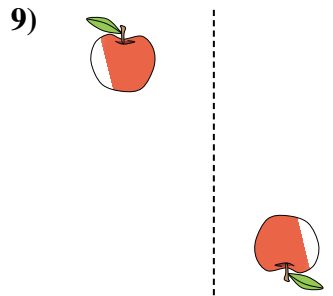
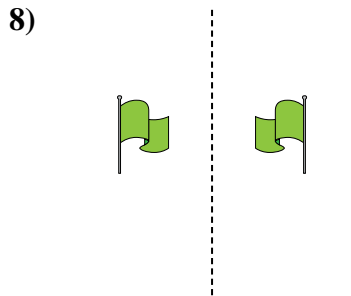

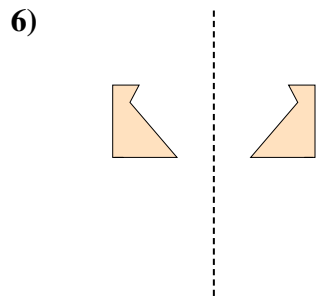
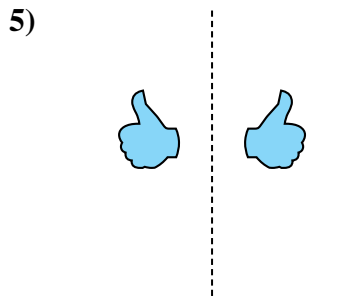

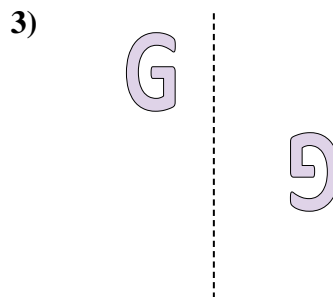

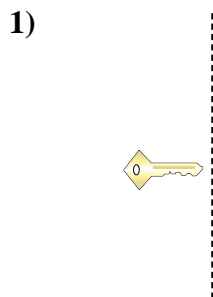
Answers



1. \_\_\_\_\_
2. \_\_\_\_\_
3. \_\_\_\_\_
4. \_\_\_\_\_
5. \_\_\_\_\_
6. \_\_\_\_\_
7. \_\_\_\_\_
8. \_\_\_\_\_
9. \_\_\_\_\_
10. \_\_\_\_\_
11. \_\_\_\_\_
12. \_\_\_\_\_
13. \_\_\_\_\_
14. \_\_\_\_\_
15. \_\_\_\_\_



Determine if the shape is translating (slide), rotating (turn) or reflecting (flip).



Answers

1. rotating

2. translating

3. rotating

4. rotating

5. reflecting

6. reflecting

7. translating

8. reflecting

9. rotating

10. translating

11. reflecting

12. translating

13. reflecting

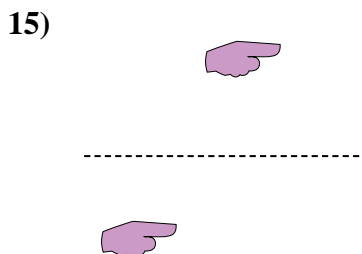
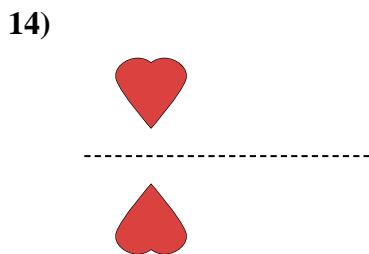
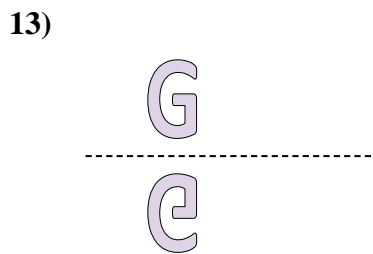

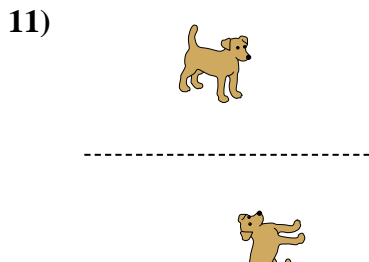
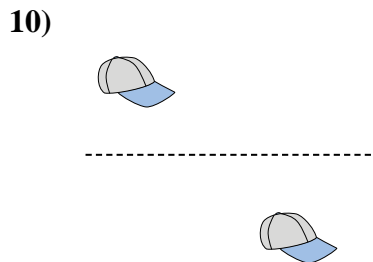
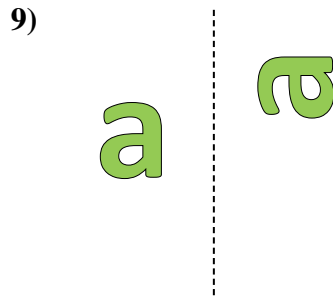
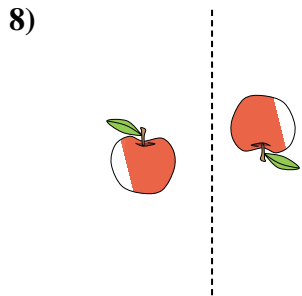
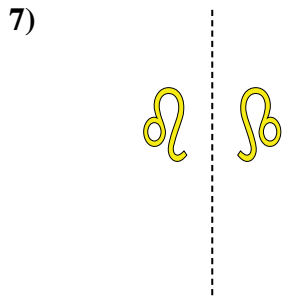
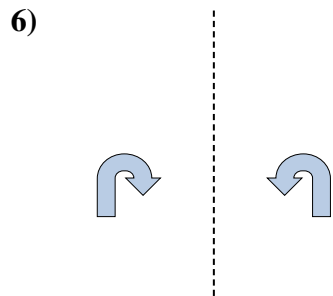
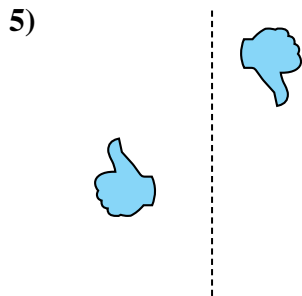
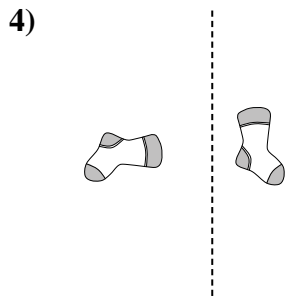
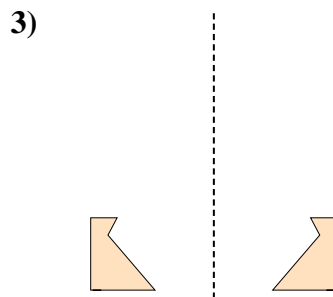
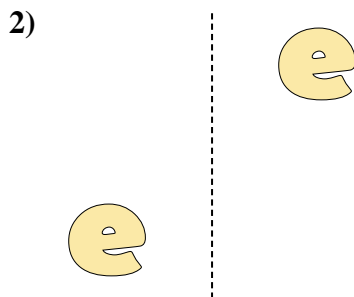
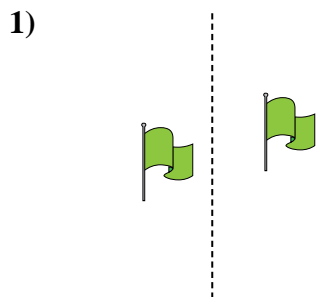
14. reflecting

15. translating



Determine if the shape is translating (slide), rotating (turn) or reflecting (flip).

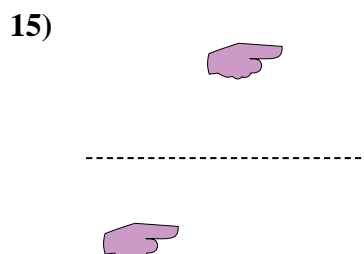
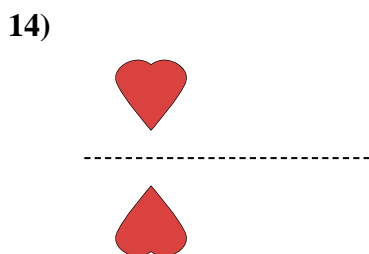
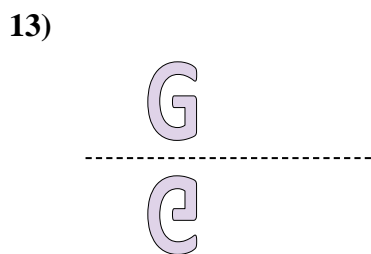
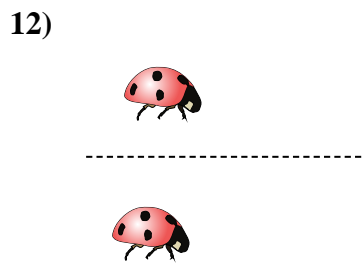
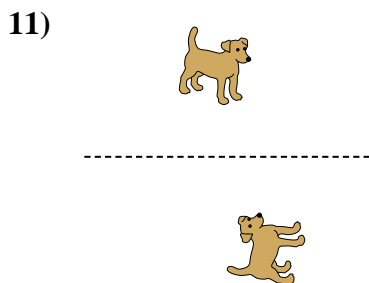
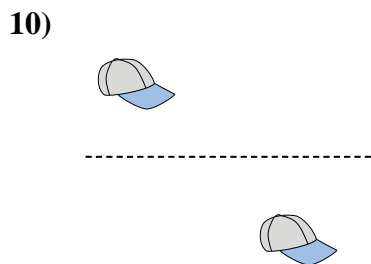
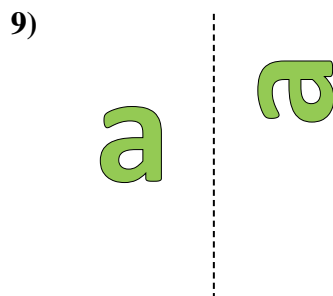
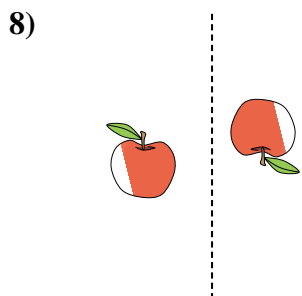
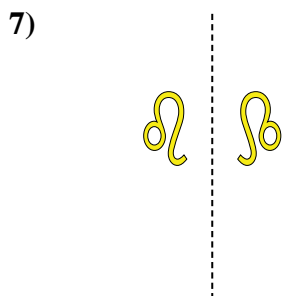
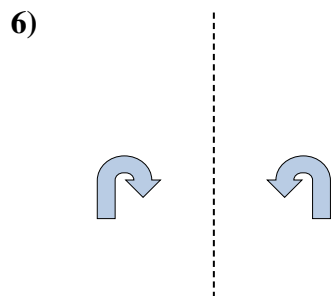
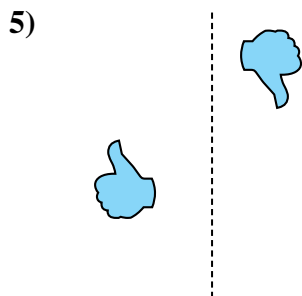
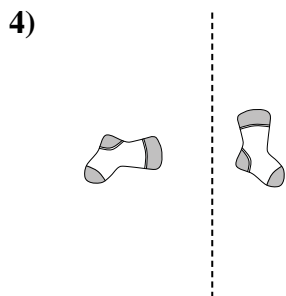
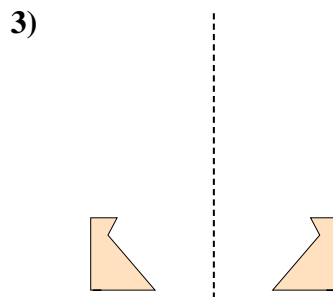
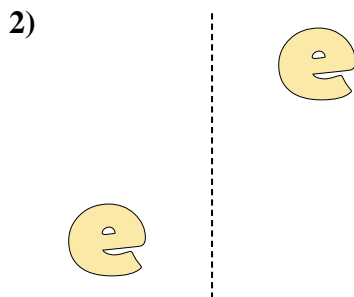
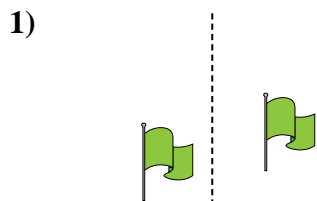
Answers



1. \_\_\_\_\_
2. \_\_\_\_\_
3. \_\_\_\_\_
4. \_\_\_\_\_
5. \_\_\_\_\_
6. \_\_\_\_\_
7. \_\_\_\_\_
8. \_\_\_\_\_
9. \_\_\_\_\_
10. \_\_\_\_\_
11. \_\_\_\_\_
12. \_\_\_\_\_
13. \_\_\_\_\_
14. \_\_\_\_\_
15. \_\_\_\_\_



Determine if the shape is translating (slide), rotating (turn) or reflecting (flip).



Answers

1. translating

2. translating

3. reflecting

4. rotating

5. rotating

6. reflecting

7. reflecting

8. rotating

9. rotating

10. translating

11. rotating

12. translating

13. reflecting

14. reflecting

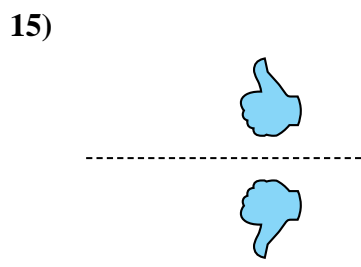
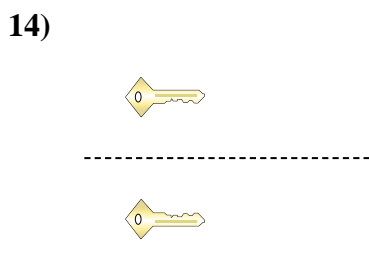
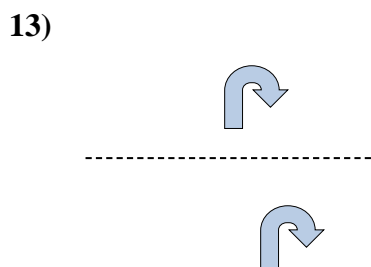
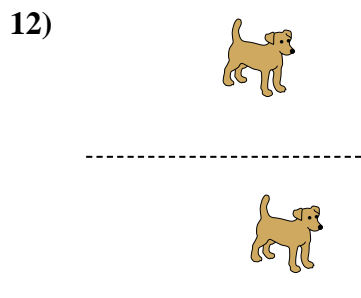
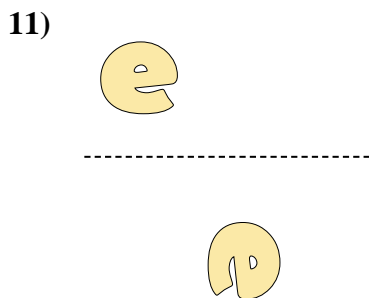
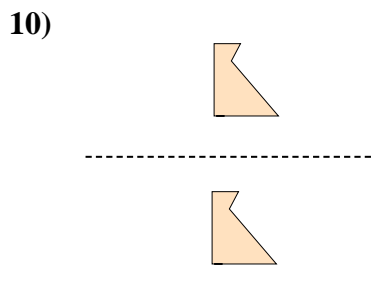
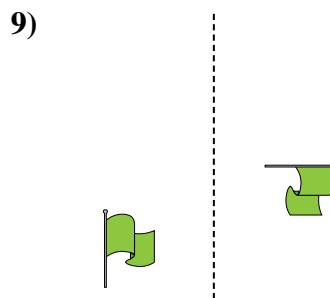
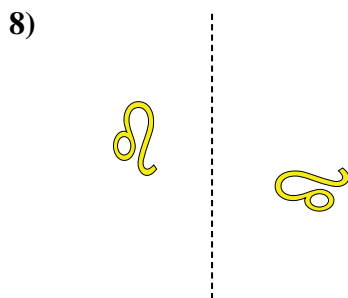
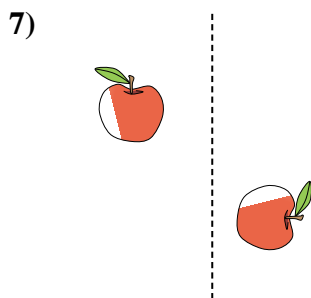
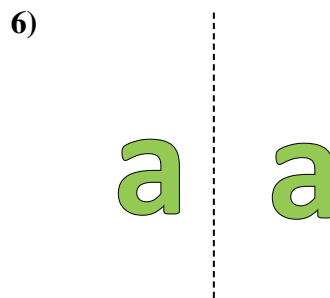
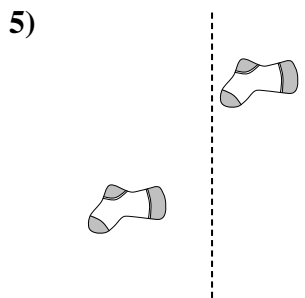
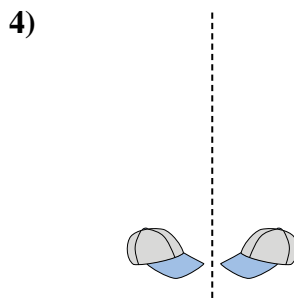
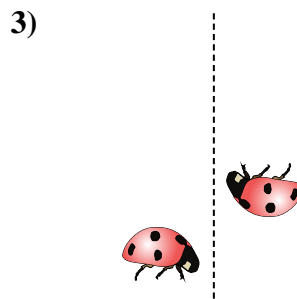
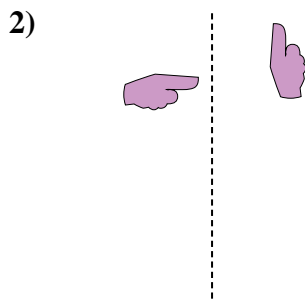
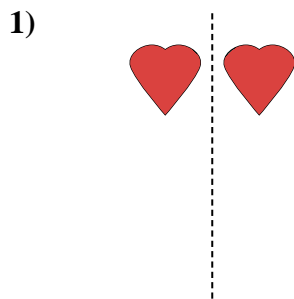
15. translating





Determine if the shape is translating (slide), rotating (turn) or reflecting (flip).

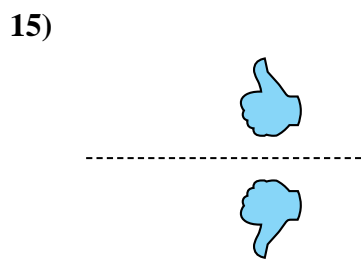
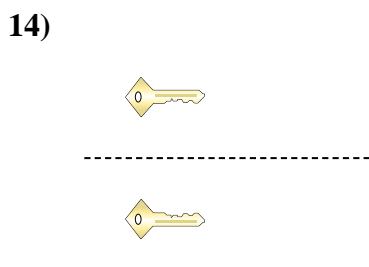
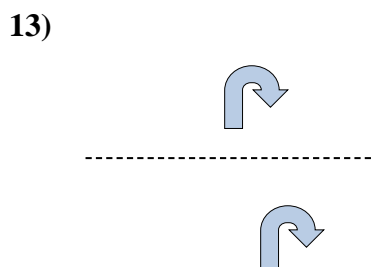
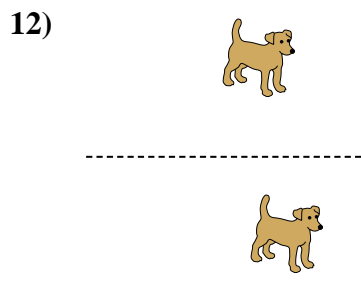
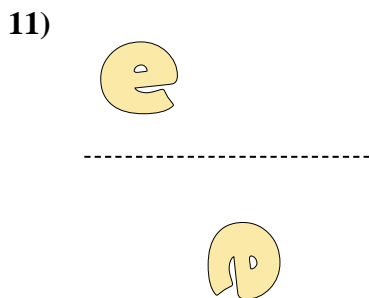
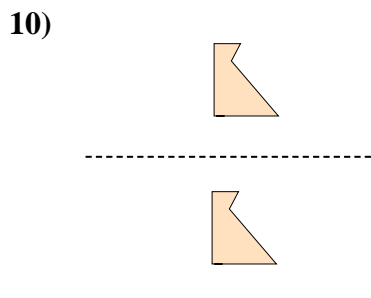
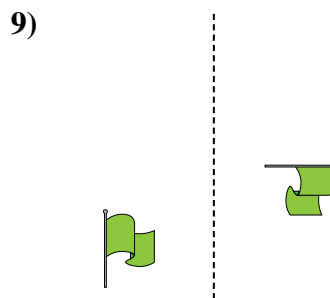
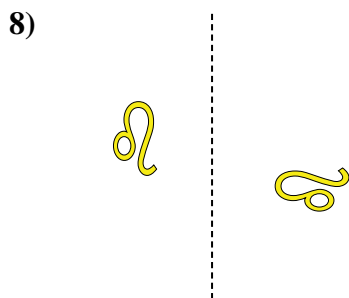
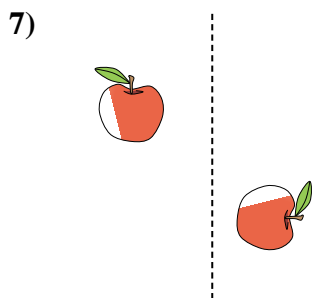
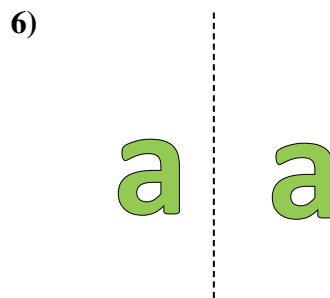
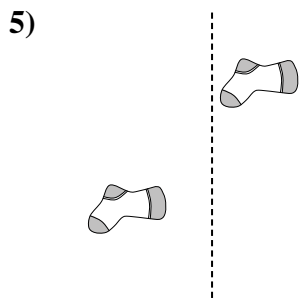
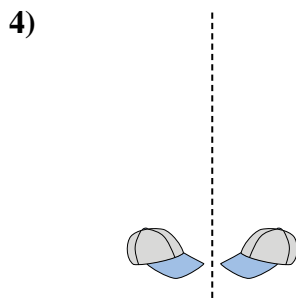
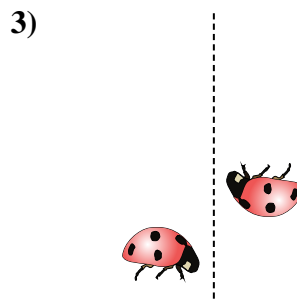
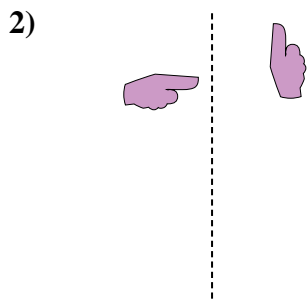
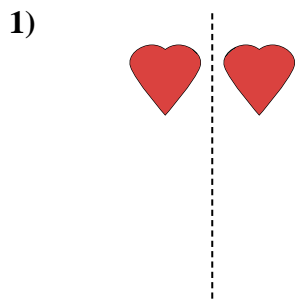
Answers



1. \_\_\_\_\_
2. \_\_\_\_\_
3. \_\_\_\_\_
4. \_\_\_\_\_
5. \_\_\_\_\_
6. \_\_\_\_\_
7. \_\_\_\_\_
8. \_\_\_\_\_
9. \_\_\_\_\_
10. \_\_\_\_\_
11. \_\_\_\_\_
12. \_\_\_\_\_
13. \_\_\_\_\_
14. \_\_\_\_\_
15. \_\_\_\_\_



Determine if the shape is translating (slide), rotating (turn) or reflecting (flip).



Answers

1. reflecting
2. rotating
3. rotating
4. reflecting
5. translating
6. translating
7. rotating
8. rotating
9. rotating
10. translating
11. rotating
12. translating
13. translating
14. reflecting
15. reflecting



Determine if the shape is translating (slide), rotating (turn) or reflecting (flip).

Answers

1)



2)



3)



4)



5)



6)



7)



8)



9)



10)



11)



12)



13)



14)



15)



1. \_\_\_\_\_

2. \_\_\_\_\_

3. \_\_\_\_\_

4. \_\_\_\_\_

5. \_\_\_\_\_

6. \_\_\_\_\_

7. \_\_\_\_\_

8. \_\_\_\_\_

9. \_\_\_\_\_

10. \_\_\_\_\_

11. \_\_\_\_\_

12. \_\_\_\_\_

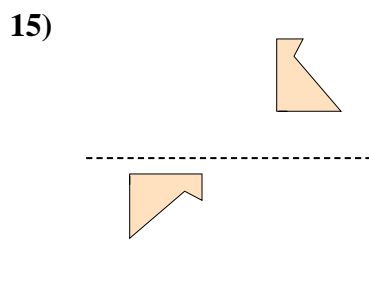
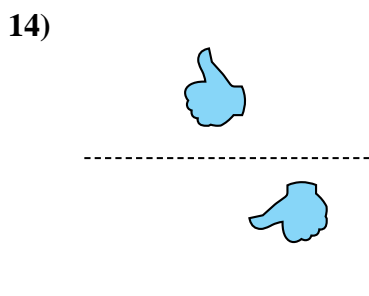
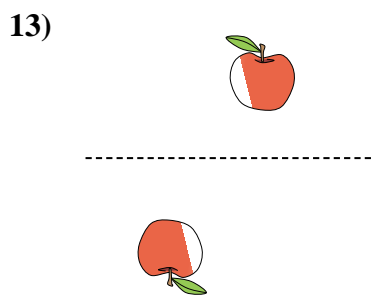
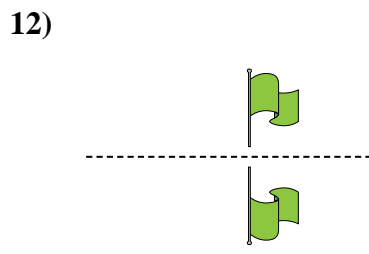
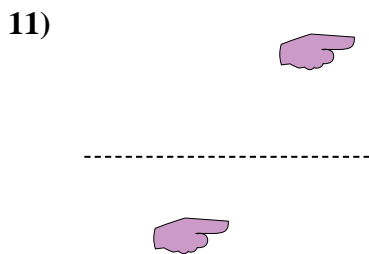
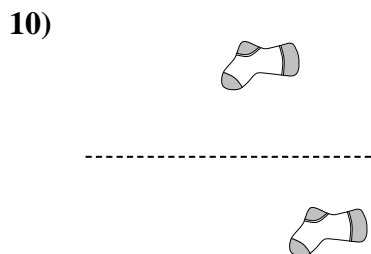
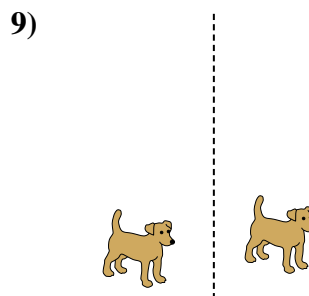
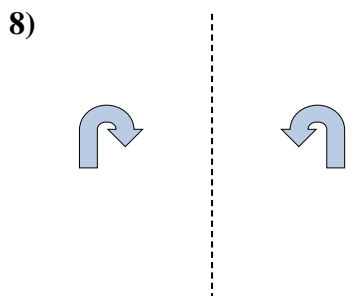
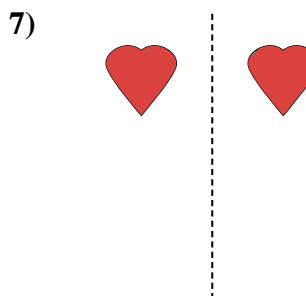
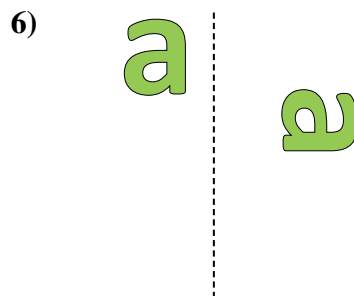
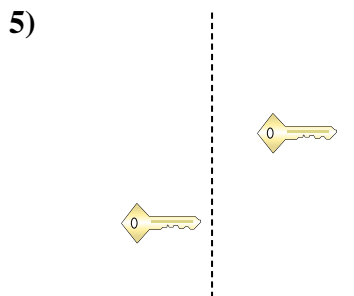
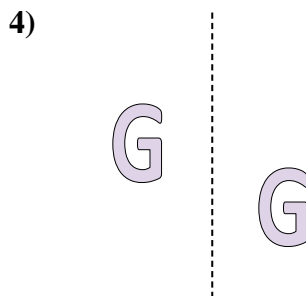
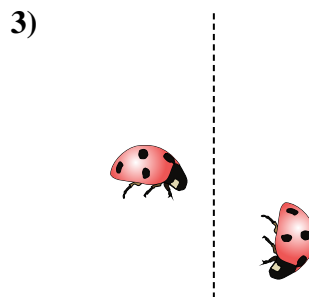
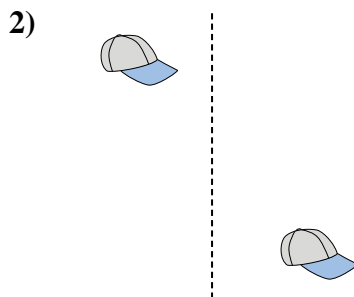
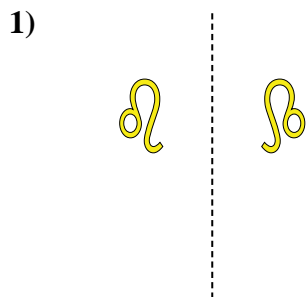
13. \_\_\_\_\_

14. \_\_\_\_\_

15. \_\_\_\_\_



Determine if the shape is translating (slide), rotating (turn) or reflecting (flip).



Answers

1. reflecting
2. translating
3. rotating
4. translating
5. translating
6. rotating
7. reflecting
8. reflecting
9. translating
10. translating
11. translating
12. reflecting
13. rotating
14. rotating
15. rotating



Determine if the shape is translating (slide), rotating (turn) or reflecting (flip).

Answers


1)



2)



3)



1. \_\_\_\_\_

2. \_\_\_\_\_

3. \_\_\_\_\_

4. \_\_\_\_\_

4)



5)



6)



5. \_\_\_\_\_

6. \_\_\_\_\_

7. \_\_\_\_\_

8. \_\_\_\_\_

7)



8)



9)




9. \_\_\_\_\_

10. \_\_\_\_\_

11. \_\_\_\_\_

12. \_\_\_\_\_

10)



11)



12)



13. \_\_\_\_\_

14. \_\_\_\_\_

15. \_\_\_\_\_

13)



14)

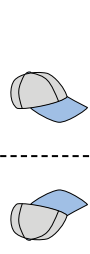
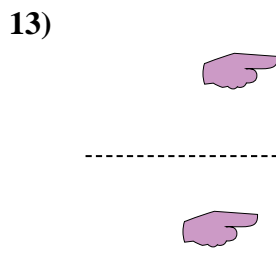

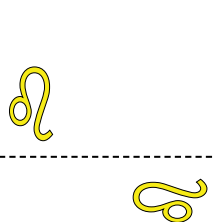
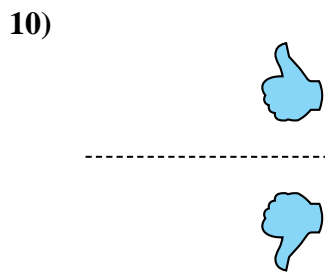
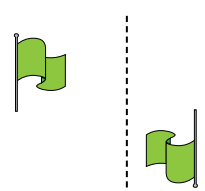
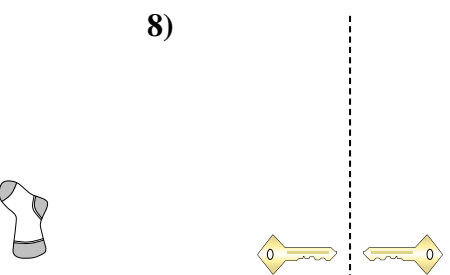
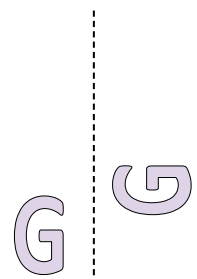
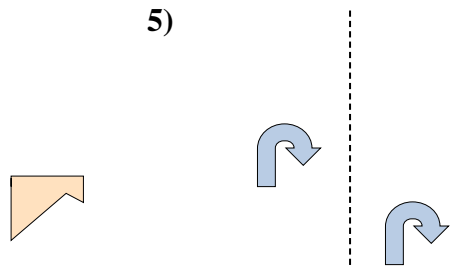
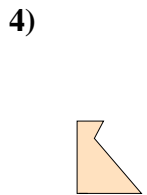




15)





Determine if the shape is translating (slide), rotating (turn) or reflecting (flip).



Answers

1. translating

2. translating

3. reflecting

4. rotating

5. translating

6. rotating

7. rotating

8. reflecting

9. rotating

10. reflecting

11. rotating

12. rotating

13. translating

14. reflecting


15. reflecting



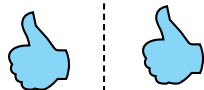
Determine if the shape is translating (slide), rotating (turn) or reflecting (flip).

Answers


1)



2)



3)



1. \_\_\_\_\_

2. \_\_\_\_\_

3. \_\_\_\_\_

4. \_\_\_\_\_

4)



5)



6)



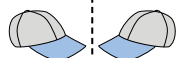
5. \_\_\_\_\_

6. \_\_\_\_\_


7. \_\_\_\_\_

8. \_\_\_\_\_

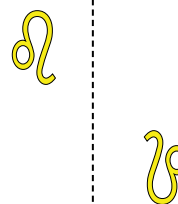
7)



8)



9)



9. \_\_\_\_\_

10. \_\_\_\_\_

11. \_\_\_\_\_

12. \_\_\_\_\_

10)



11)



12)



13. \_\_\_\_\_

14. \_\_\_\_\_



15. \_\_\_\_\_

13)



14)



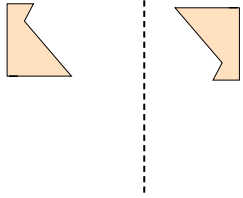
15)



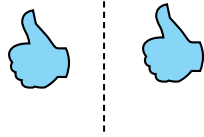


Determine if the shape is translating (slide), rotating (turn) or reflecting (flip).


1)



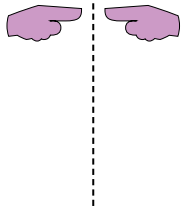
2)



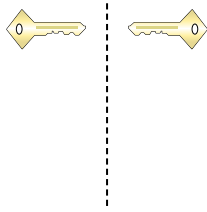
3)



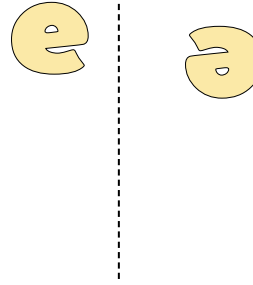
4)



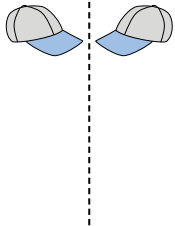
5)



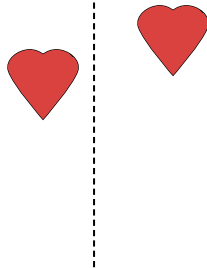
6)



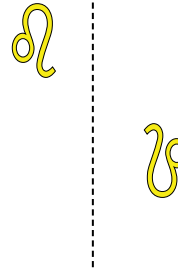
7)



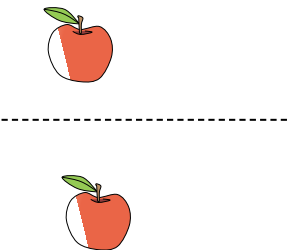
8)



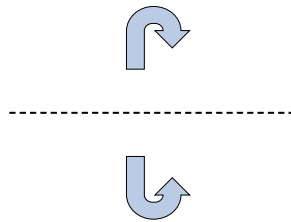
9)



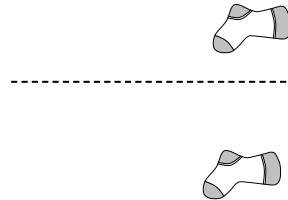
10)



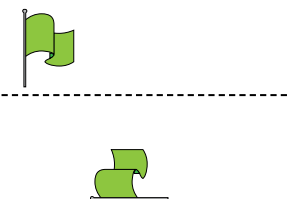
11)



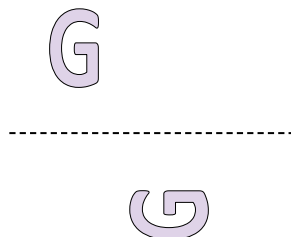
12)



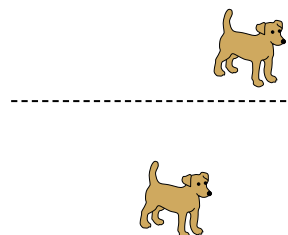
13)



14)



15)



Answers

1. rotating

2. translating

3. reflecting

4. reflecting

5. reflecting

6. rotating

7. reflecting

8. translating

9. rotating

10. translating

11. reflecting

12. translating

13. rotating

14. rotating

15. translating






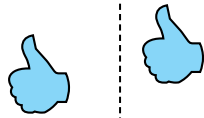
Determine if the shape is translating (slide), rotating (turn) or reflecting (flip).

Answers

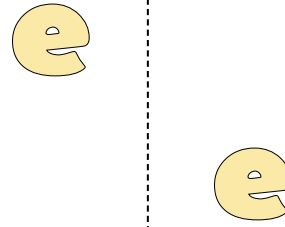
1)



2)



3)



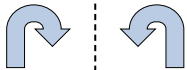
1. \_\_\_\_\_

2. \_\_\_\_\_

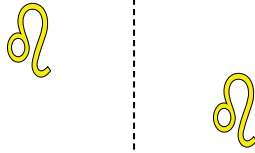
3. \_\_\_\_\_

4. \_\_\_\_\_


4)



5)



6)



5. \_\_\_\_\_

6. \_\_\_\_\_

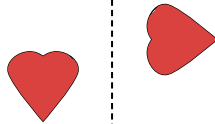
7. \_\_\_\_\_

8. \_\_\_\_\_

7)



8)



9)



9. \_\_\_\_\_

10. \_\_\_\_\_


11. \_\_\_\_\_

12. \_\_\_\_\_


10)



11)



12)

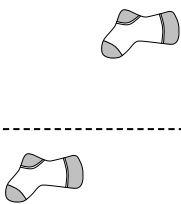


13. \_\_\_\_\_

14. \_\_\_\_\_

15. \_\_\_\_\_

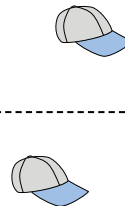
13)



14)



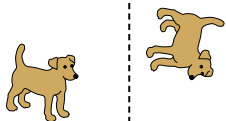
15)



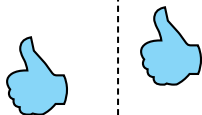


Determine if the shape is translating (slide), rotating (turn) or reflecting (flip).

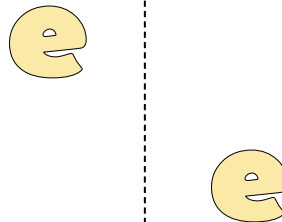
1)



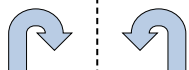
2)



3)




4)



5)



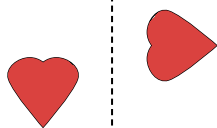
6)



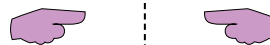
7)



8)




9)




10)



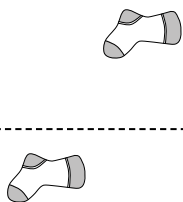
11)



12)



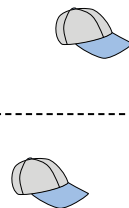
13)



14)



15)



Answers

1. rotating
2. translating
3. translating
4. reflecting
5. translating
6. rotating
7. rotating
8. rotating
9. reflecting
10. reflecting
11. reflecting
12. reflecting
13. translating
14. translating
15. translating



Determine if the shape is translating (slide), rotating (turn) or reflecting (flip).

Answers

1)



2)



3)



1. \_\_\_\_\_

2. \_\_\_\_\_

3. \_\_\_\_\_

4. \_\_\_\_\_

5. \_\_\_\_\_

6. \_\_\_\_\_

7. \_\_\_\_\_

8. \_\_\_\_\_

9. \_\_\_\_\_

10. \_\_\_\_\_

11. \_\_\_\_\_

12. \_\_\_\_\_

13. \_\_\_\_\_

14. \_\_\_\_\_

15. \_\_\_\_\_

4)



5)



6)



7)



8)



9)



10)



11)



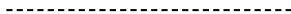
12)



13)



14)



15)





Determine if the shape is translating (slide), rotating (turn) or reflecting (flip).

1)



2)



3)



4)



5)



6)



7)



8)



9)



10)



11)



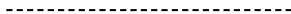
12)



13)



14)



15)



Answers

1. translating

2. rotating

3. translating

4. reflecting

5. rotating

6. translating

7. reflecting

8. translating

9. reflecting

10. translating

11. translating

12. rotating

13. rotating

14. rotating

15. reflecting