




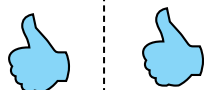
Determine if the shape is translating (slide), rotating (turn) or reflecting (flip).

Answers


1)



2)



3)



1. _____

2. _____

3. _____

4. _____

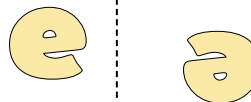
4)



5)



6)



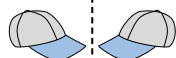
5. _____

6. _____


7. _____

8. _____

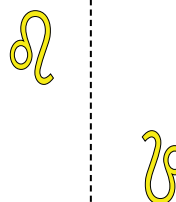
7)



8)



9)



9. _____

10. _____

11. _____

12. _____

10)



11)



12)



13. _____

14. _____



15. _____

13)



14)




15)



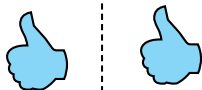


Determine if the shape is translating (slide), rotating (turn) or reflecting (flip).


1)



2)



3)



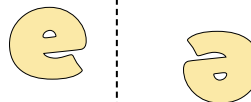
4)



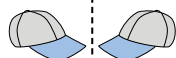
5)




6)



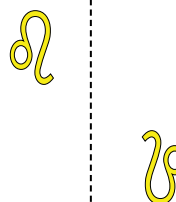
7)



8)



9)



10)



11)



12)



13)



14)



15)



Answers

1. rotating

2. translating

3. reflecting

4. reflecting

5. reflecting

6. rotating

7. reflecting

8. translating

9. rotating

10. translating

11. reflecting

12. translating

13. rotating

14. rotating

15. translating