



Determine if the shape is translating (slide), rotating (turn) or reflecting (flip).

Answers

1)



2)



3)



1. _____

2. _____

3. _____

4. _____

5. _____

6. _____

7. _____

8. _____

9. _____

10. _____

11. _____

12. _____

13. _____

14. _____

15. _____

4)



5)



6)



7)



8)



9)



10)



11)



12)



13)



14)

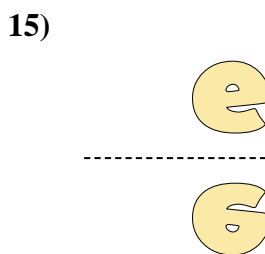
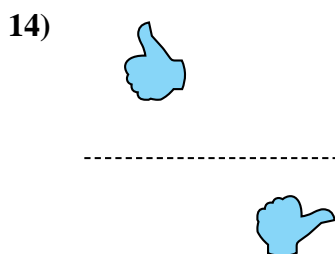
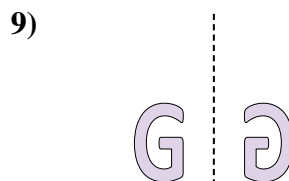
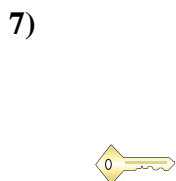
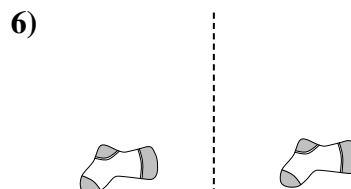
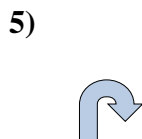
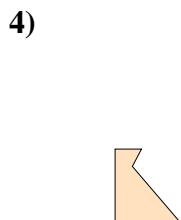
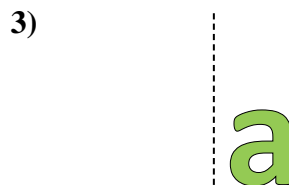
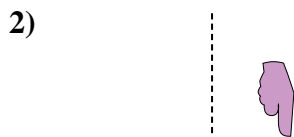


15)





Determine if the shape is translating (slide), rotating (turn) or reflecting (flip).



Answers

1. translating

2. rotating

3. translating

4. reflecting

5. rotating

6. translating

7. reflecting

8. translating

9. reflecting

10. translating

11. translating

12. rotating

13. rotating

14. rotating

15. reflecting