




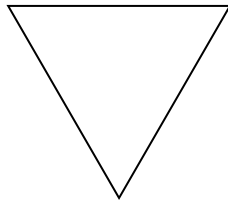
Determine if the shape shown is a regular shape or an irregular shape.

Answers

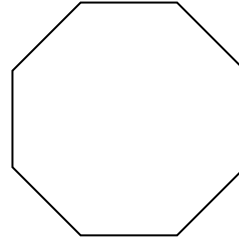
1)



2)



3)



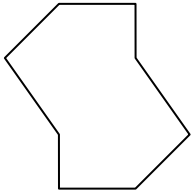
1. \_\_\_\_\_

2. \_\_\_\_\_

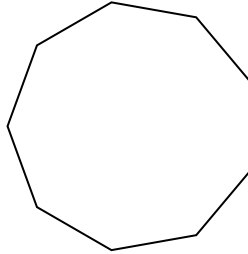
3. \_\_\_\_\_

4. \_\_\_\_\_

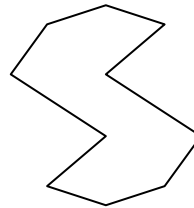
4)



5)



6)




5. \_\_\_\_\_

6. \_\_\_\_\_


7. \_\_\_\_\_

8. \_\_\_\_\_

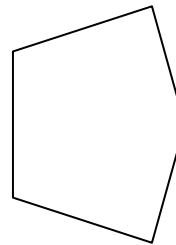
7)



8)



9)




9. \_\_\_\_\_

10. \_\_\_\_\_

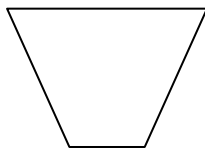
11. \_\_\_\_\_

12. \_\_\_\_\_

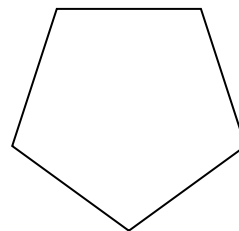
10)



11)



12)

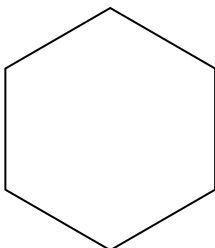


13. \_\_\_\_\_

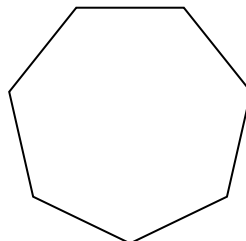
14. \_\_\_\_\_

15. \_\_\_\_\_

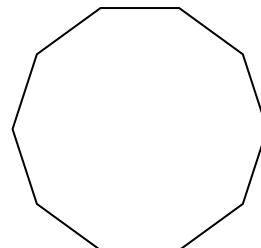
13)



14)




15)



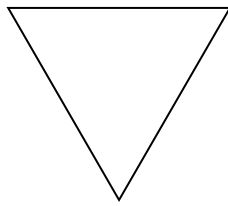


Determine if the shape shown is a regular shape or an irregular shape.

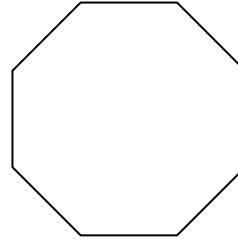
1)



2)



3)



Answers

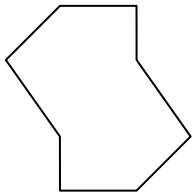
1. Regular

2. Regular

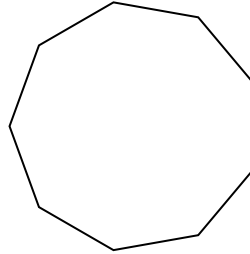
3. Regular

4. Irregular

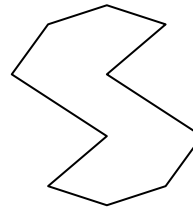
4)



5)




6)




5. Regular

6. Irregular

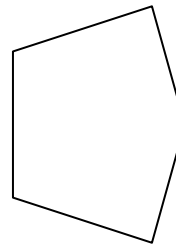
7)



8)



9)




7. Irregular

8. Irregular

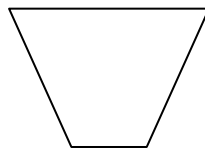
9. Irregular

10. Irregular

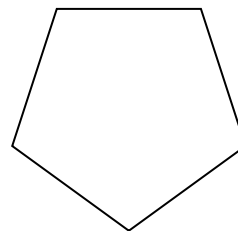
10)



11)



12)



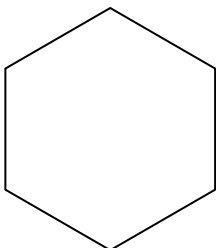
11. Irregular

12. Regular

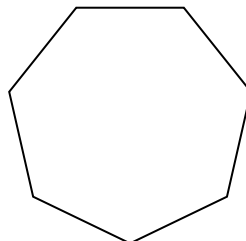
13. Regular

14. Regular

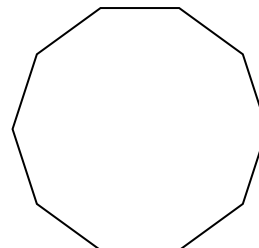
13)



14)



15)



15. Regular