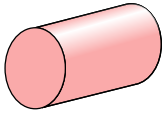




Determine which choice BEST describes the shape shown.

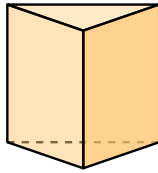
**Answers**

1)



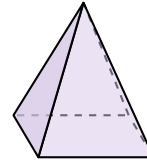
- A. sphere
- B. triangular pyramid
- C. rectangular pyramid
- D. cylinder

2)




- A. triangular prism
- B. cone
- C. triangular pyramid
- D. rectangular prism

3)



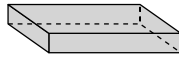
- A. rectangular pyramid
- B. sphere
- C. rectangular prism
- D. triangular prism

4)



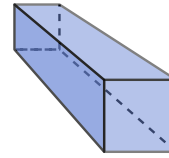
- A. triangular pyramid
- B. cylinder
- C. triangular prism
- D. sphere

5)



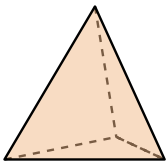
- A. rectangular pyramid
- B. sphere
- C. rectangular prism
- D. triangular prism

6)



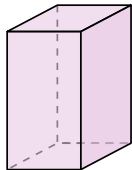
- A. cube
- B. cone
- C. triangular pyramid
- D. rectangular prism

7)



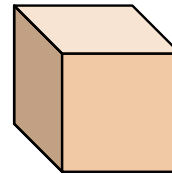
- A. triangular pyramid
- B. triangular prism
- C. cone
- D. rectangular pyramid

8)



- A. cube
- B. cylinder
- C. rectangular pyramid
- D. rectangular prism

9)



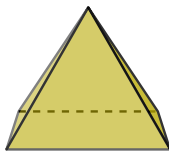
- A. cone
- B. cube
- C. triangular prism
- D. rectangular pyramid

10)




- A. cylinder
- B. sphere
- C. triangular pyramid
- D. cone

11)



- A. rectangular pyramid
- B. rectangular prism
- C. sphere
- D. cube

12)

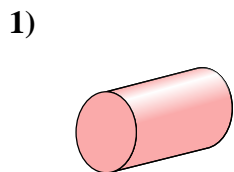


- A. cone
- B. triangular pyramid
- C. triangular prism
- D. sphere

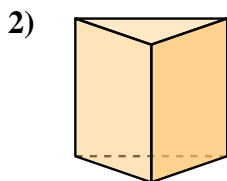
1. \_\_\_\_\_
2. \_\_\_\_\_
3. \_\_\_\_\_
4. \_\_\_\_\_
5. \_\_\_\_\_
6. \_\_\_\_\_
7. \_\_\_\_\_
8. \_\_\_\_\_
9. \_\_\_\_\_
10. \_\_\_\_\_
11. \_\_\_\_\_
12. \_\_\_\_\_



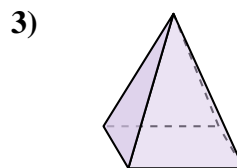
Determine which choice BEST describes the shape shown.



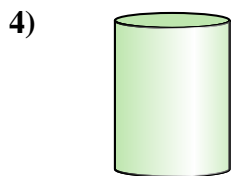
- A. sphere
- B. triangular pyramid
- C. rectangular pyramid
- D. cylinder



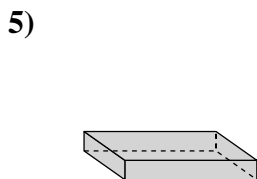
- A. triangular prism
- B. cone
- C. triangular pyramid
- D. rectangular prism



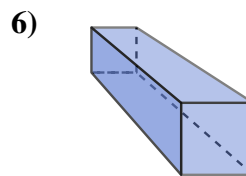
- A. rectangular pyramid
- B. sphere
- C. rectangular prism
- D. triangular prism



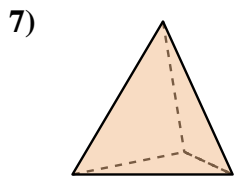
- A. triangular pyramid
- B. cylinder
- C. triangular prism
- D. sphere



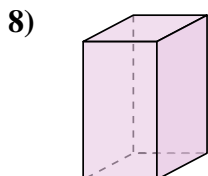
- A. rectangular pyramid
- B. sphere
- C. rectangular prism
- D. triangular prism



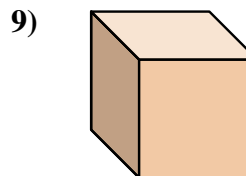
- A. cube
- B. cone
- C. triangular pyramid
- D. rectangular prism



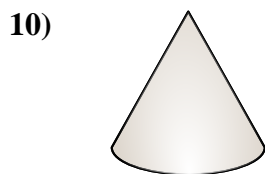
- A. triangular pyramid
- B. triangular prism
- C. cone
- D. rectangular pyramid



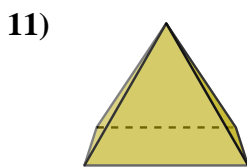
- A. cube
- B. cylinder
- C. rectangular pyramid
- D. rectangular prism



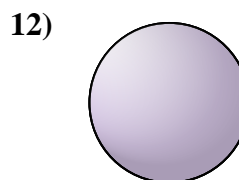
- A. cone
- B. cube
- C. triangular prism
- D. rectangular pyramid



- A. cylinder
- B. sphere
- C. triangular pyramid
- D. cone



- A. rectangular pyramid
- B. rectangular prism
- C. sphere
- D. cube



- A. cone
- B. triangular pyramid
- C. triangular prism
- D. sphere

**Answers**

- 1.   **D**
- 2.   **A**
- 3.   **A**
- 4.   **B**
- 5.   **C**
- 6.   **D**
- 7.   **A**
- 8.   **D**
- 9.   **B**
- 10.   **D**
- 11.   **A**
- 12.   **D**