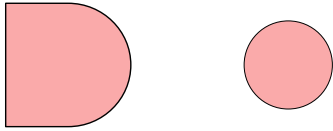




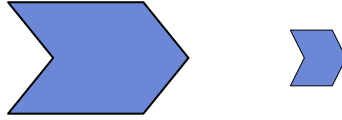
Determine if the shapes shown are 'similar', 'congruent' or 'neither'.

Answers

1)



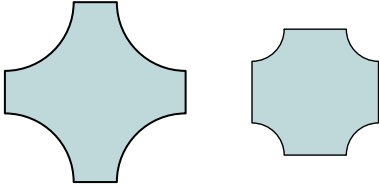
2)



1. _____

2. _____

3)



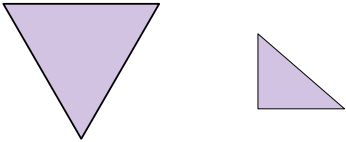
4)



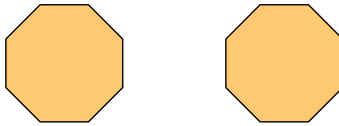
3. _____

4. _____

5)



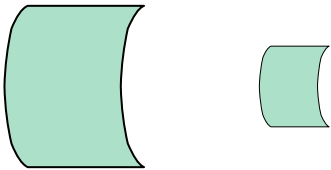
6)



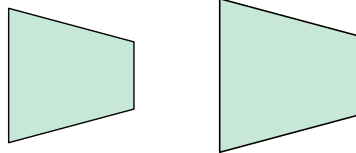
5. _____

6. _____

7)




8)



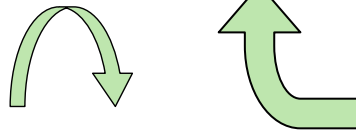
7. _____

8. _____

9)



10)



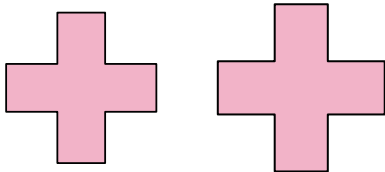
9. _____

10. _____

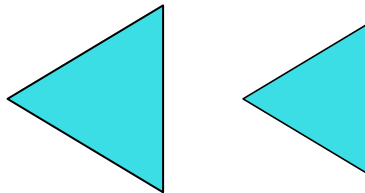
11. _____

12. _____

11)



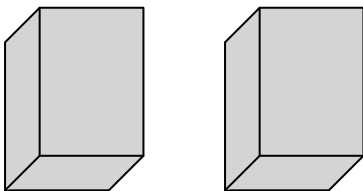
12)



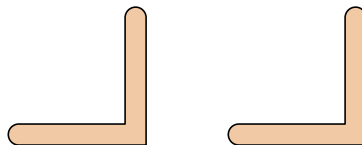
11. _____

12. _____

13)



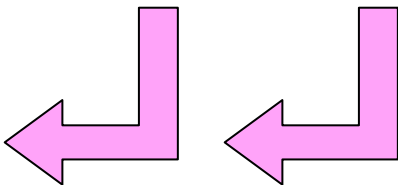
14)



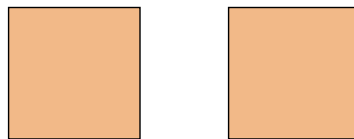
13. _____

14. _____

15)



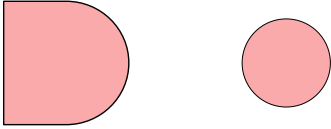
16)



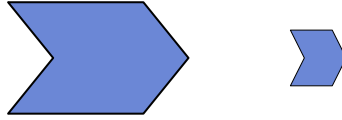


Determine if the shapes shown are 'similar', 'congruent' or 'neither'.

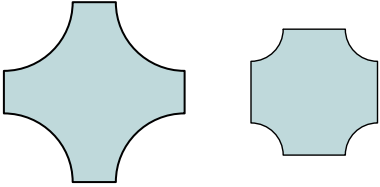
1)



2)



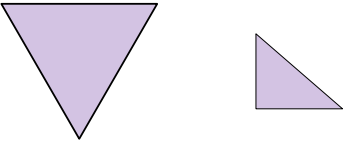
3)



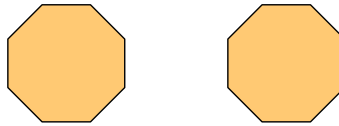
4)



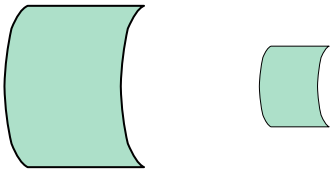
5)



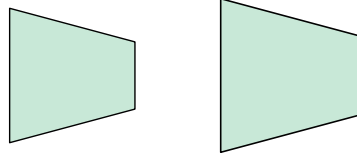
6)



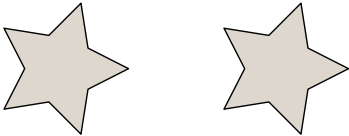
7)



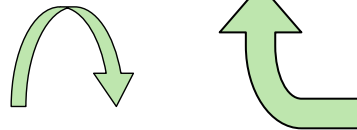
8)



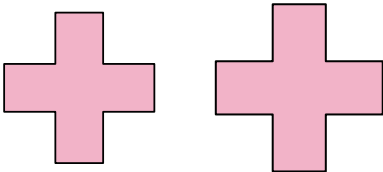
9)



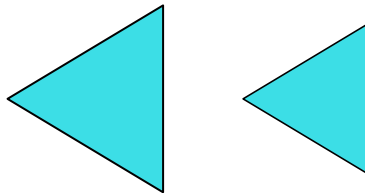
10)



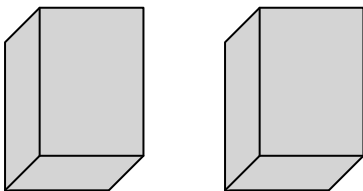
11)



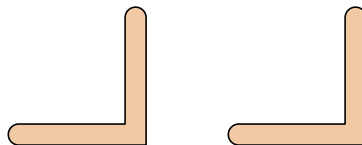
12)



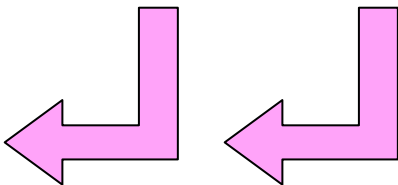
13)



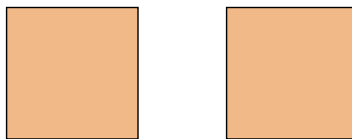
14)



15)



16)



Answers

1. neither

2. neither

3. neither

4. neither

5. neither

6. congruent

7. similar

8. similar

9. congruent

10. neither

11. similar

12. similar

13. congruent

14. congruent

15. congruent

16. congruent