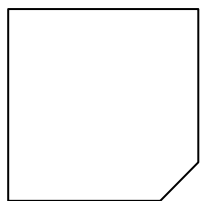




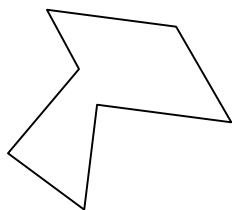
Identify the type of shape shown.

Answers

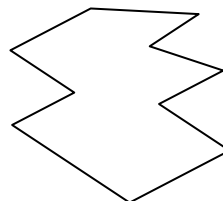
1)



2)

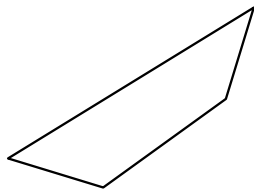


3)

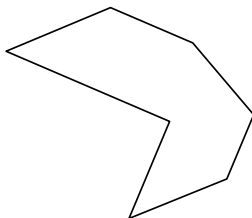


1. \_\_\_\_\_

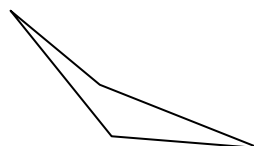
4)



5)



6)



2. \_\_\_\_\_

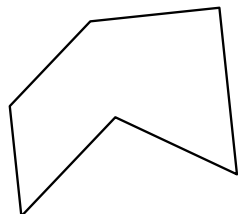
3. \_\_\_\_\_

4. \_\_\_\_\_

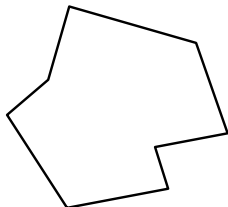
5. \_\_\_\_\_

6. \_\_\_\_\_


7)



8)



9)



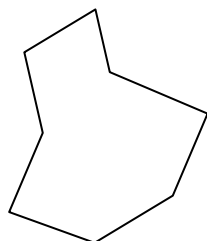
7. \_\_\_\_\_

8. \_\_\_\_\_

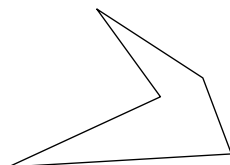
9. \_\_\_\_\_

10. \_\_\_\_\_


10)



11)



12)



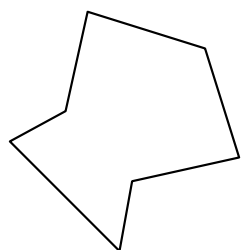
11. \_\_\_\_\_

12. \_\_\_\_\_

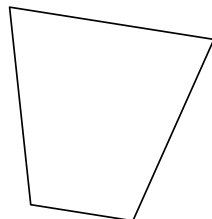
13. \_\_\_\_\_

14. \_\_\_\_\_

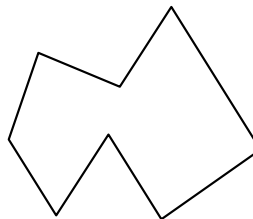
13)



14)



15)

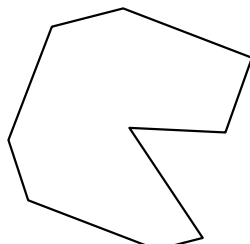


15. \_\_\_\_\_

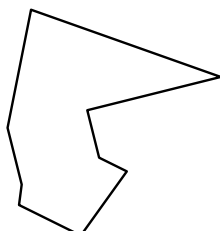
16. \_\_\_\_\_

17. \_\_\_\_\_

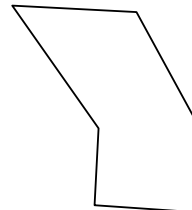
16)



17)



18)



18. \_\_\_\_\_

19. \_\_\_\_\_

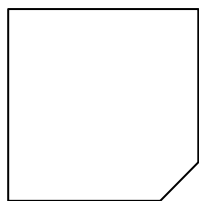
20. \_\_\_\_\_

21. \_\_\_\_\_

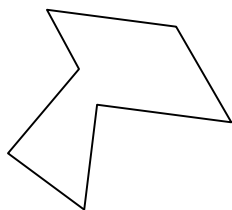


Identify the type of shape shown.

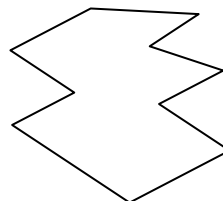
1)



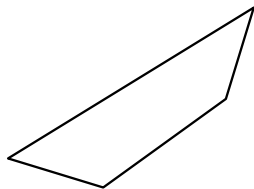
2)



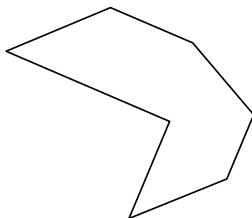
3)



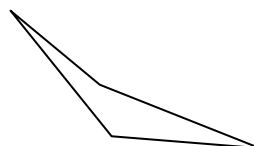
4)



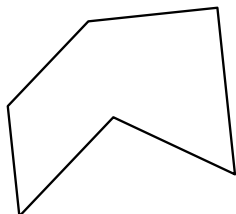
5)



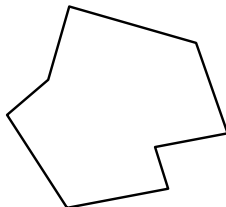
6)




7)



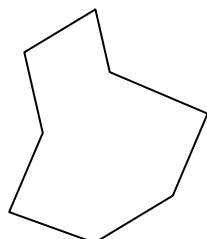
8)



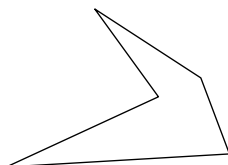
9)




10)



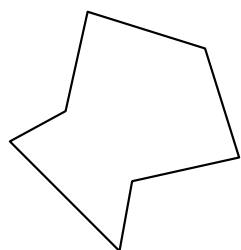
11)



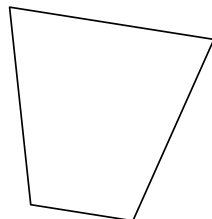
12)



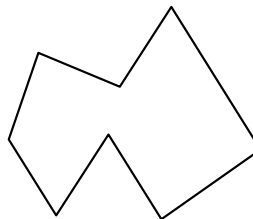
13)



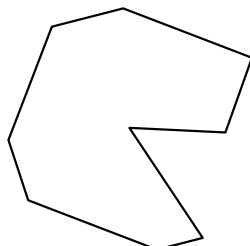
14)



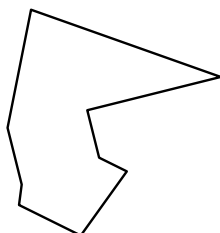
15)



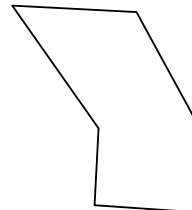
16)



17)



18)



Answers

1. pentagon

2. heptagon

3. decagon

4. quadrilateral

5. heptagon

6. quadrilateral

7. hexagon

8. octagon

9. heptagon

10. octagon

11. pentagon

12. octagon

13. heptagon

14. quadrilateral

15. octagon

16. nonagon

17. nonagon

18. hexagon

19. pentagon

20. decagon

21. nonagon