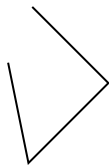




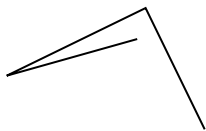
Determine if the figure shown is a 'Triangle', 'Square', 'Rectangle', 'Hexagon' or 'Other'.

Answers

1)



2)



3)



1. _____

2. _____

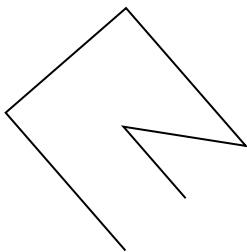
3. _____

4. _____

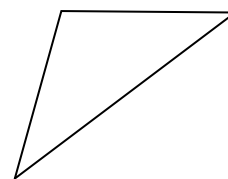
4)



5)



6)



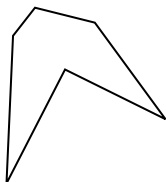
5. _____

6. _____

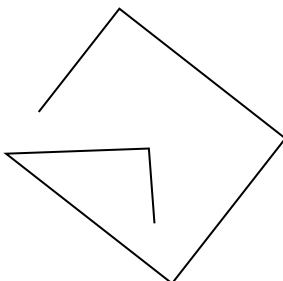
7. _____

8. _____


7)



8)



9)



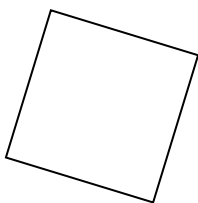
9. _____

10. _____

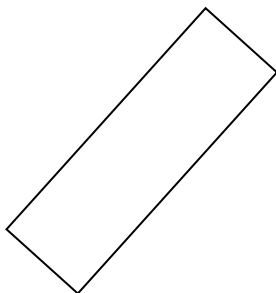
11. _____

12. _____

10)



11)



12)

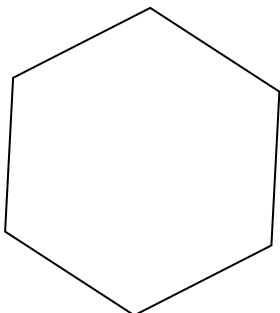


13. _____

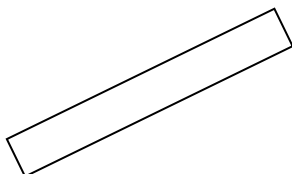
14. _____

15. _____

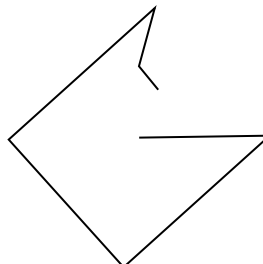
13)



14)



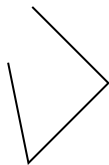
15)



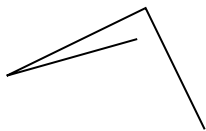


Determine if the figure shown is a 'Triangle', 'Square', 'Rectangle', 'Hexagon' or 'Other'.

1)



2)



3)



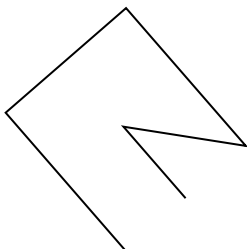
1.

other

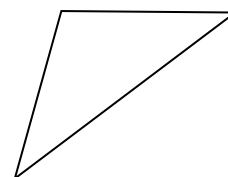
4)



5)



6)



2.

other

3.

triangle

4.

other

5.

other

6.

triangle

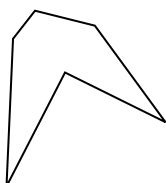
7.

hexagon

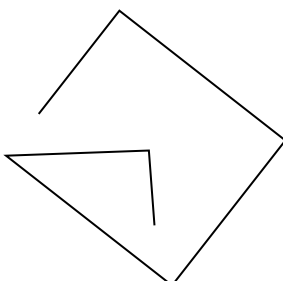
8.

other


7)



8)



9)



9.

triangle

10.

square

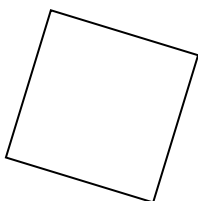
11.

rectangle

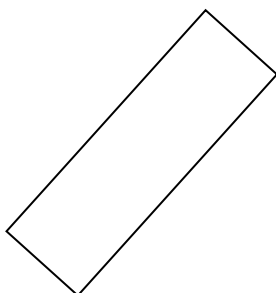
12.

rectangle

10)



11)



12)



13.

hexagon

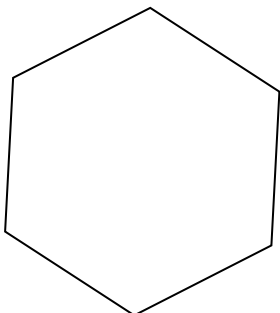
14.

rectangle

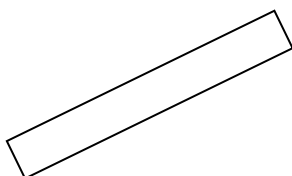
15.

other

13)



14)



15)

