

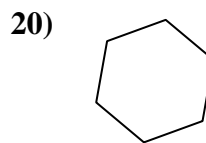
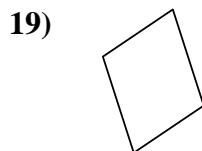
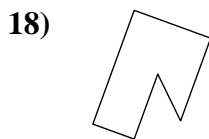
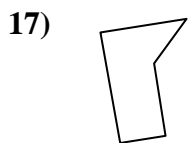
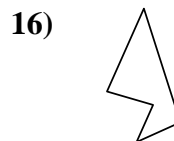
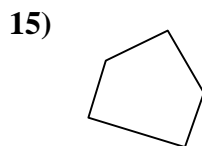
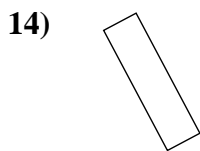
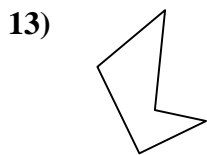
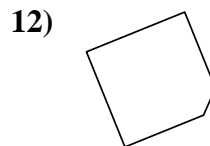
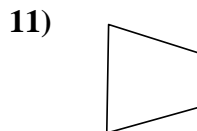
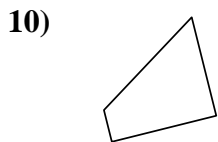
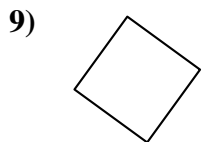
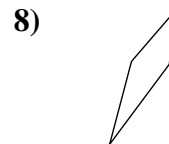
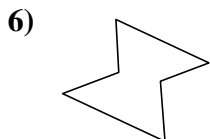
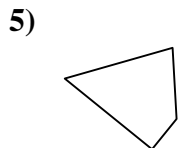
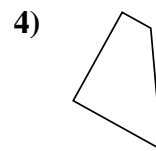
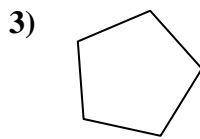
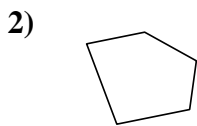
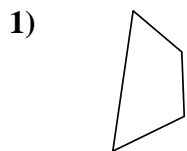


Identifying Quadrilaterals

Name: _____

Determine if the shape shown is a quadrilateral (yes) or not (no).

Answers



1. _____

2. _____

3. _____

4. _____

5. _____

6. _____

7. _____

8. _____

9. _____

10. _____

11. _____

12. _____

13. _____

14. _____

15. _____

16. _____

17. _____

18. _____

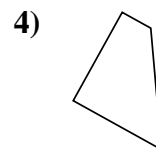
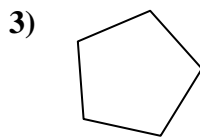
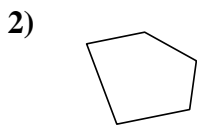
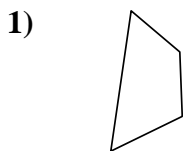
19. _____

20. _____

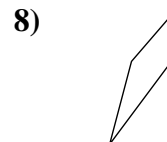
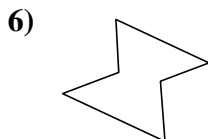
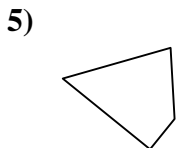


Determine if the shape shown is a quadrilateral (yes) or not (no).

Answers



1. yes



2. no

3. no

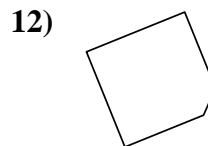
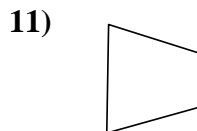
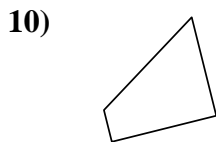
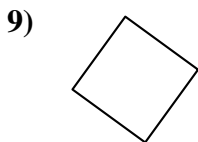
4. yes

5. yes

6. no

7. yes

8. yes

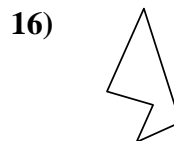
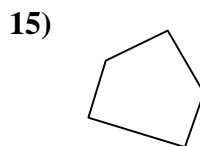
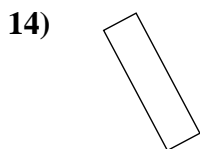
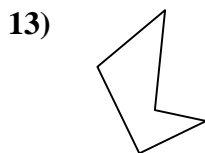


9. yes

10. yes

11. yes

12. no

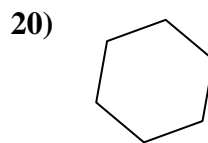
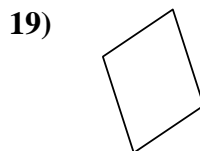
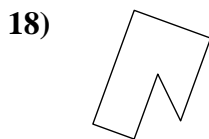
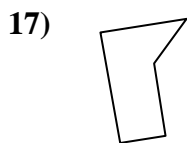


13. no

14. yes

15. no

16. no



17. no

18. no

19. yes

20. no