

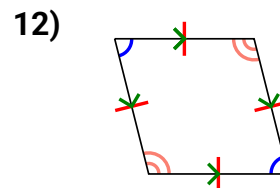
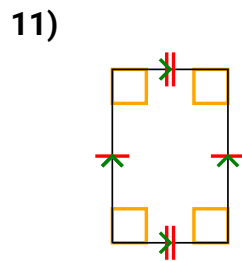
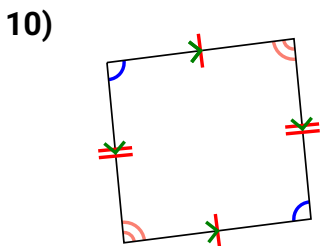
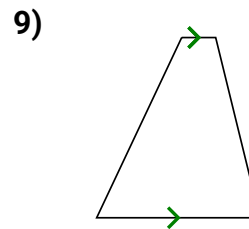
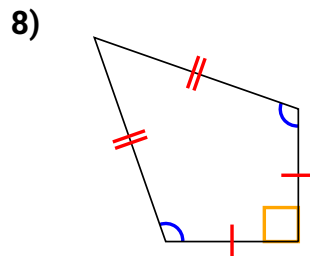
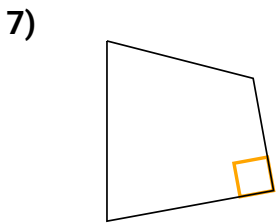
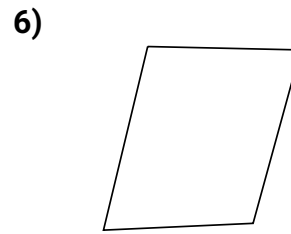
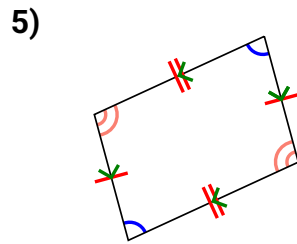
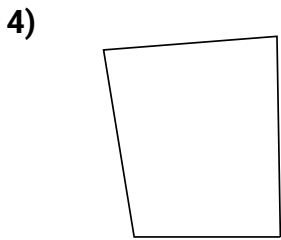
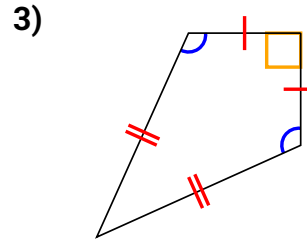
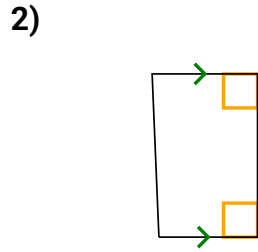
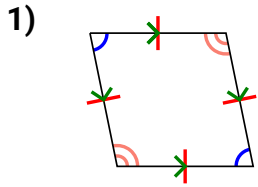


# Classifying Shapes

Name: \_\_\_\_\_

Determine if the shape shown is a Quadrilateral, Kite, Trapezoid, Parallelogram, Rhombus, Rectangle or Square (can be more than one).

## Answers



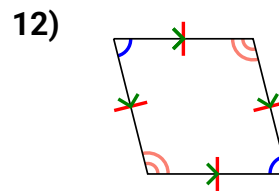
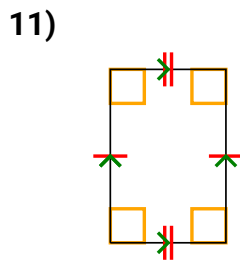
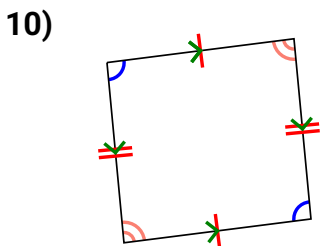
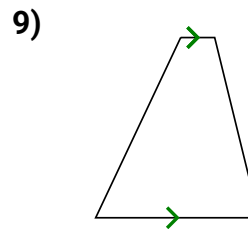
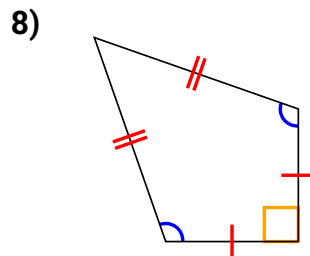
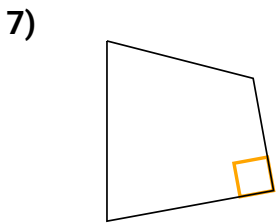
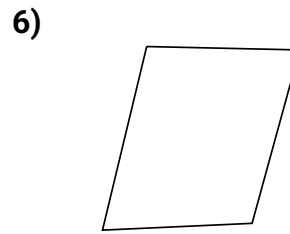
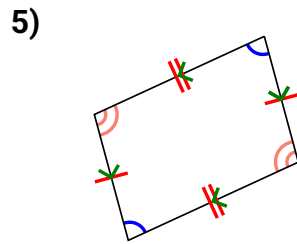
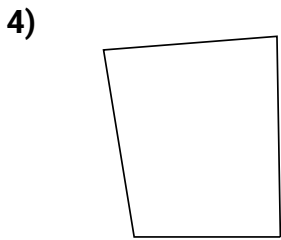
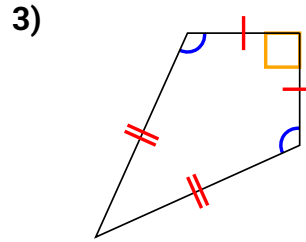
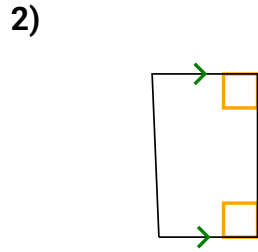
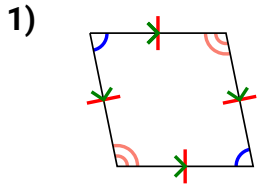
1. \_\_\_\_\_
2. \_\_\_\_\_
3. \_\_\_\_\_
4. \_\_\_\_\_
5. \_\_\_\_\_
6. \_\_\_\_\_
7. \_\_\_\_\_
8. \_\_\_\_\_
9. \_\_\_\_\_
10. \_\_\_\_\_
11. \_\_\_\_\_
12. \_\_\_\_\_



# Classifying Shapes

Name: **Answer Key**

Determine if the shape shown is a Quadrilateral, Kite, Trapezoid, Parallelogram, Rhombus, Rectangle or Square (can be more than one).



## Answers

1. Q,P,H

2. Q,T

3. Q,K

4. Q

5. Q,P

6. Q

7. Q

8. Q,K

9. Q,T

10. Q,P

11. Q,P,R

12. Q,P,H