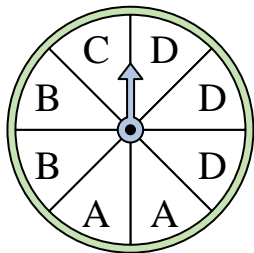


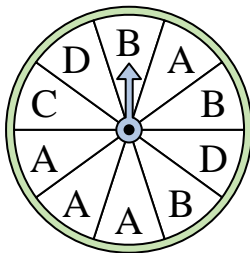


Solve each problem.


- 1) Which letter is the spinner most likely to land on?




- 2) Which letter is the spinner least likely to land on?




- 3) Which number is the spinner least likely to land on?



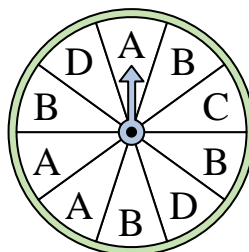
- 4) Which number is the spinner least likely to land on?



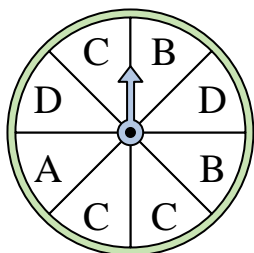
- 5) Which number is the spinner most likely to land on?



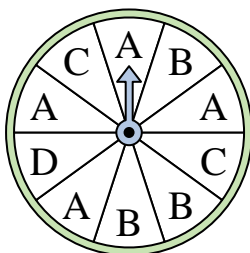
- 6) Which letter is the spinner most likely to land on?




- 7) Which two letters is the spinner equally likely to land on?



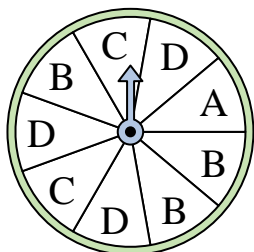
- 8) Which letter is the spinner most likely to land on?



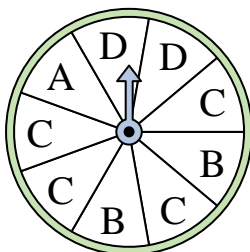
- 9) Which two numbers is the spinner equally likely to land on?



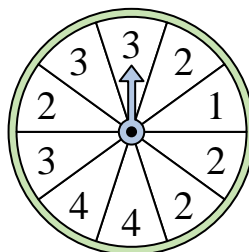
- 10) Which two letters is the spinner equally likely to land on?



- 11) Which letter is the spinner most likely to land on?



- 12) Which number is the spinner least likely to land on?



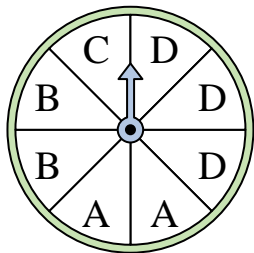
Answers

1. _____
2. _____
3. _____
4. _____
5. _____
6. _____
7. _____
8. _____
9. _____
10. _____
11. _____
12. _____

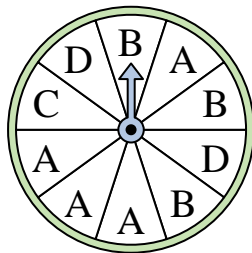


Solve each problem.


- 1) Which letter is the spinner most likely to land on?




- 2) Which letter is the spinner least likely to land on?




- 3) Which number is the spinner least likely to land on?



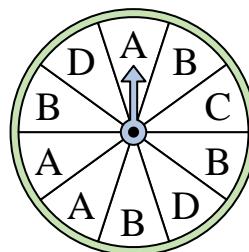
- 4) Which number is the spinner least likely to land on?



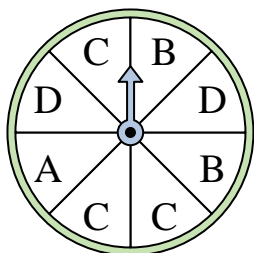
- 5) Which number is the spinner most likely to land on?



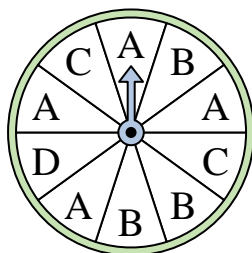
- 6) Which letter is the spinner most likely to land on?



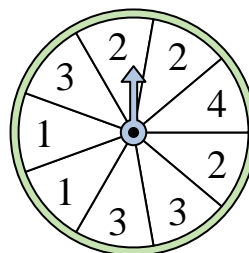
- 7) Which two letters is the spinner equally likely to land on?



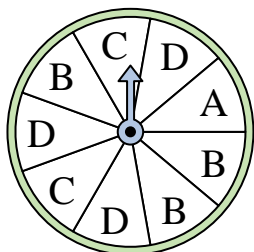
- 8) Which letter is the spinner most likely to land on?



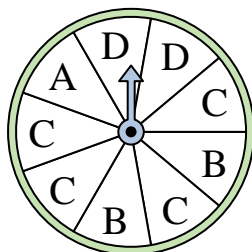
- 9) Which two numbers is the spinner equally likely to land on?




- 10) Which two letters is the spinner equally likely to land on?



- 11) Which letter is the spinner most likely to land on?



- 12) Which number is the spinner least likely to land on?



Answers

1. **D**

2. **C**

3. **2**

4. **3**

5. **1**

6. **B**

7. **B & D**

8. **A**

9. **2 & 3**

10. **B & D**

11. **C**

12. **1**