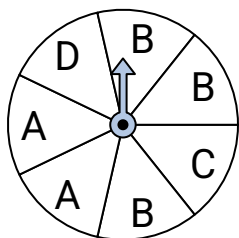




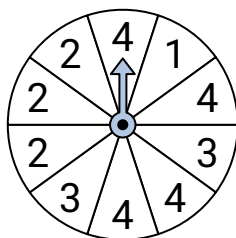
Solve each problem.

Answers

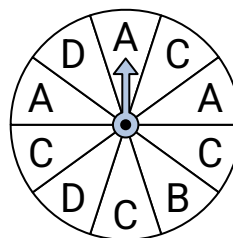
- 1) Which two letters is the spinner equally likely to land on?



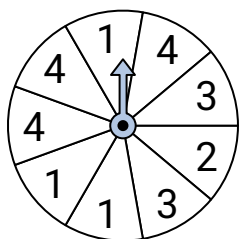
- 2) Which number is the spinner most likely to land on?



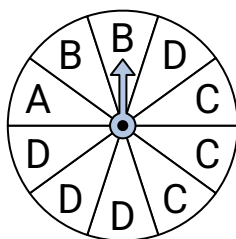
- 3) Which letter is the spinner most likely to land on?




- 4) Which two numbers is the spinner equally likely to land on?



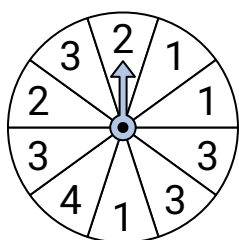
- 5) Which letter is the spinner least likely to land on?



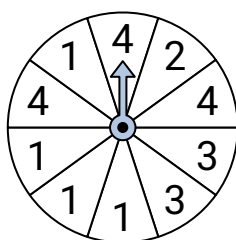
- 6) Which number is the spinner least likely to land on?



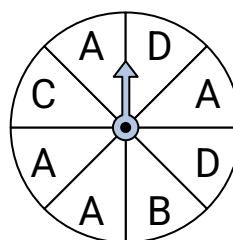
- 7) Which number is the spinner least likely to land on?



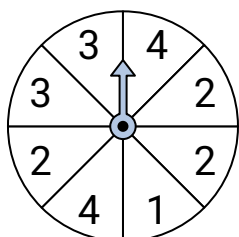
- 8) Which number is the spinner least likely to land on?



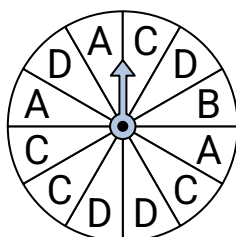
- 9) Which letter is the spinner most likely to land on?



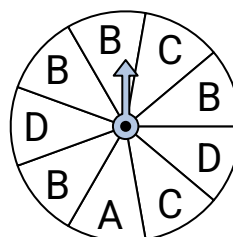
- 10) Which number is the spinner most likely to land on?



- 11) Which letter is the spinner least likely to land on?



- 12) Which letter is the spinner most likely to land on?

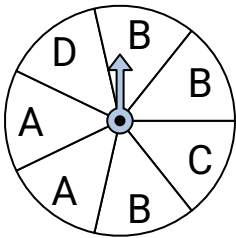


1. _____
2. _____
3. _____
4. _____
5. _____
6. _____
7. _____
8. _____
9. _____
10. _____
11. _____
12. _____

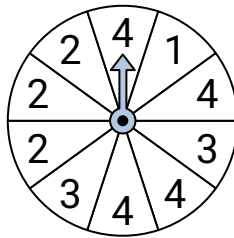


Solve each problem.

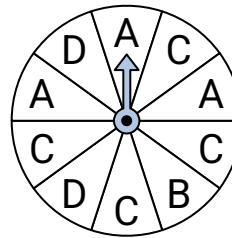
- 1) Which two letters is the spinner equally likely to land on?



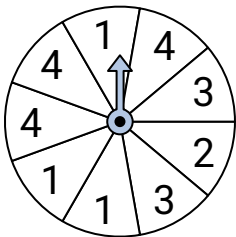
- 2) Which number is the spinner most likely to land on?



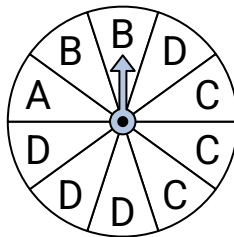
- 3) Which letter is the spinner most likely to land on?




- 4) Which two numbers is the spinner equally likely to land on?



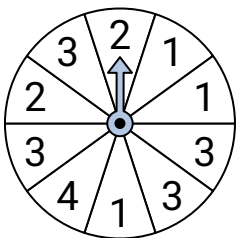
- 5) Which letter is the spinner least likely to land on?



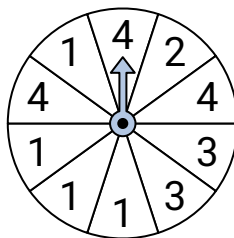
- 6) Which number is the spinner least likely to land on?



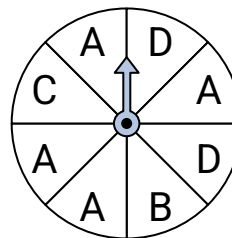
- 7) Which number is the spinner least likely to land on?



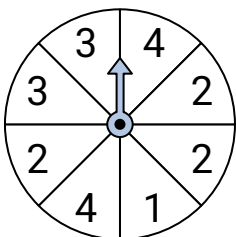
- 8) Which number is the spinner least likely to land on?



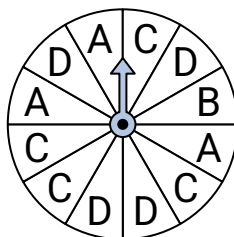
- 9) Which letter is the spinner most likely to land on?



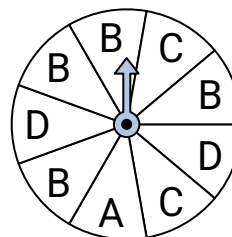
- 10) Which number is the spinner most likely to land on?



- 11) Which letter is the spinner least likely to land on?



- 12) Which letter is the spinner most likely to land on?

**Answers**

1. **C & D**
2. **4**
3. **C**
4. **1 & 4**
5. **A**
6. **2**
7. **4**
8. **2**
9. **A**
10. **2**
11. **B**
12. **B**