



Use each diagram to solve the problems.

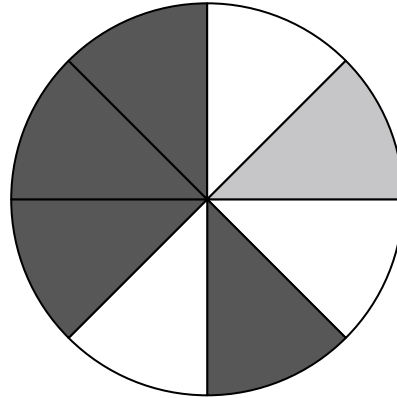


- 1) If you were to roll the dice one time what is the probability it will NOT land on a 1?
- 2) If you were to roll the dice one time, what is the probability of it landing on an even number?
- 3) If you were to roll the dice one time what is the probability it will land on a 4?

4) If you spun the spinner 1 time, what is the probability it would land on a gray piece?

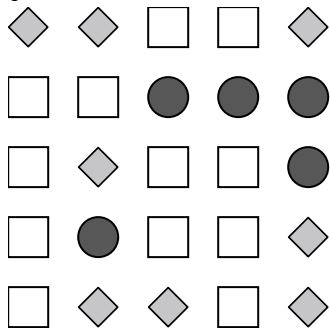
5) If you spun the spinner 1 time, what is the probability it would land on a white piece?

6) How many pieces are there total in the spinner?



7) If you spun the spinner 1 time, what is the probability of landing on either a gray piece or a white piece?

8) If you spun the spinner 1 time, what is the probability it would land on a black piece?



9) Which shape has a 32.00% chance (8 out of 25) of being selected?

10) If you were to select 1 shape at random from the array, what is the probability it will be a circle?

11) How many shapes are there total in the array?

12) If you were to select 1 shape at random from the array, what shape do you have the greatest probability of selecting?

Answers

- 1. _____
- 2. _____
- 3. _____
- 4. _____
- 5. _____
- 6. _____
- 7. _____
- 8. _____
- 9. _____
- 10. _____
- 11. _____
- 12. _____

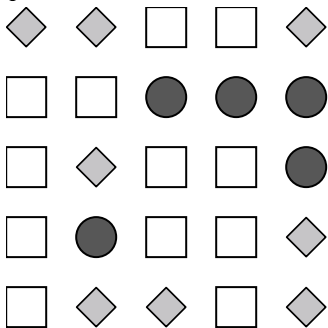
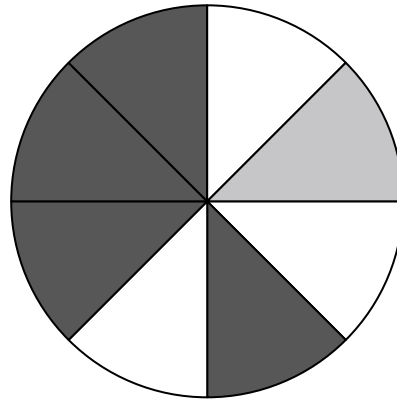


Use each diagram to solve the problems.



- 1) If you were to roll the dice one time what is the probability it will NOT land on a 1?
- 2) If you were to roll the dice one time, what is the probability of it landing on an even number?
- 3) If you were to roll the dice one time what is the probability it will land on a 4?

- 4) If you spun the spinner 1 time, what is the probability it would land on a gray piece?
- 5) If you spun the spinner 1 time, what is the probability it would land on a white piece?
- 6) How many pieces are there total in the spinner?
- 7) If you spun the spinner 1 time, what is the probability of landing on either a gray piece or a white piece?
- 8) If you spun the spinner 1 time, what is the probability it would land on a black piece?



- 9) Which shape has a 32.00% chance (8 out of 25) of being selected?
- 10) If you were to select 1 shape at random from the array, what is the probability it will be a circle?
- 11) How many shapes are there total in the array?
- 12) If you were to select 1 shape at random from the array, what shape do you have the greatest probability of selecting?

Answers

- 1. 5 out of 6
- 2. 3 out of 6
- 3. 1 out of 6
- 4. 1 out of 8
- 5. 3 out of 8
- 6. 8
- 7. 4 out of 8
- 8. 4 out of 8
- 9. diamond
- 10. 5 out of 25
- 11. 25
- 12. circle