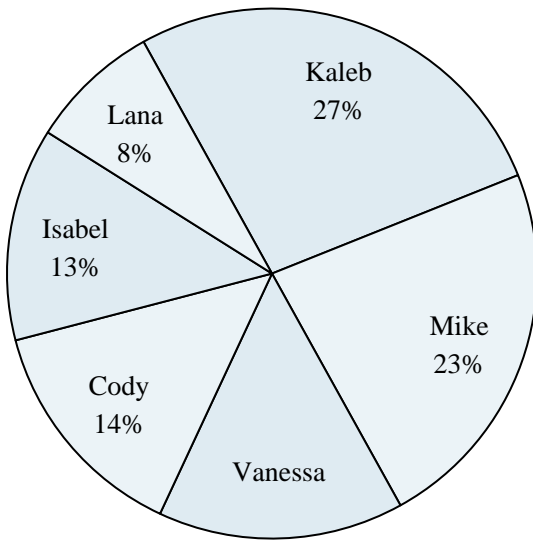
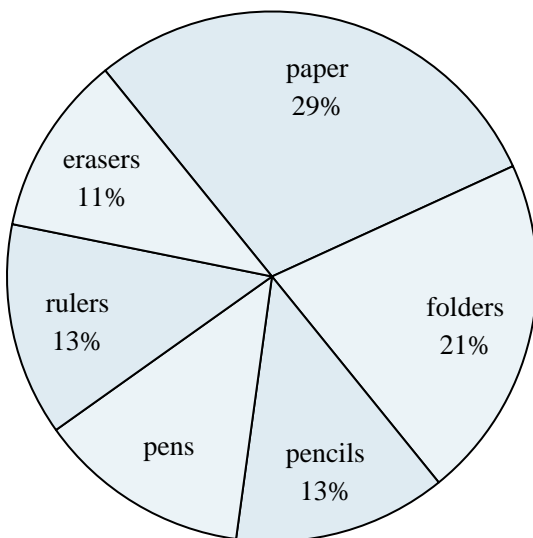




Use the graph to solve.

Class Election Results

- 1) Which two candidates had about half the votes?
- 2) What percent of people voted for either Vanessa or Mike?
- 3) Who got the least number of votes?
- 4) Who won the election?
- 5) What percent of people voted for Isabel?

School Store Sales

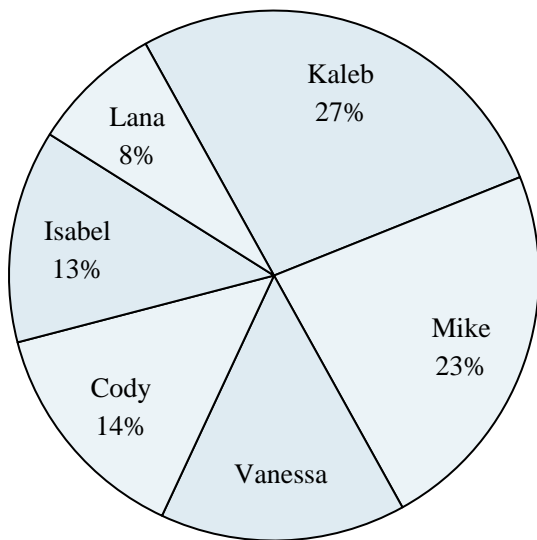
- 6) Which product sold the best?
- 7) Which two products accounted for about half the sales?
- 8) What percent of the sales were erasers?
- 9) What is the combined amount of folders and pencils sold?
- 10) Which product sold the worst?

Answers

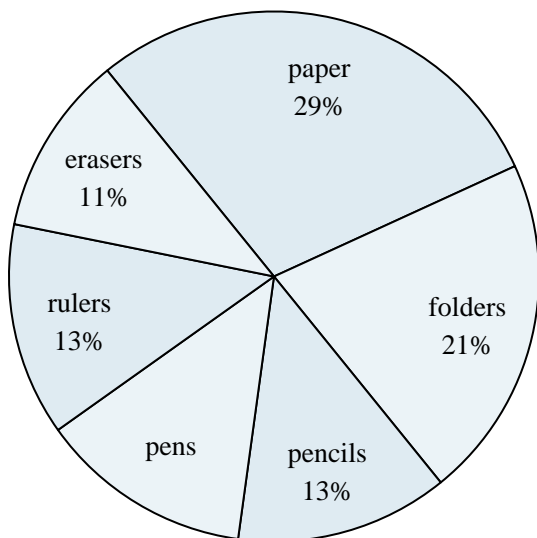
1. _____
2. _____
3. _____
4. _____
5. _____
6. _____
7. _____
8. _____
9. _____
10. _____



Use the graph to solve.

Class Election Results

- 1) Which two candidates had about half the votes?
- 2) What percent of people voted for either Vanessa or Mike?
- 3) Who got the least number of votes?
- 4) Who won the election?
- 5) What percent of people voted for Isabel?

School Store Sales

- 6) Which product sold the best?
- 7) Which two products accounted for about half the sales?
- 8) What percent of the sales were erasers?
- 9) What is the combined amount of folders and pencils sold?
- 10) Which product sold the worst?

Answers

1. **Kaleb & Mike**
2. **38%**
3. **Lana**
4. **Kaleb**
5. **13%**
6. **paper**
7. **paper & folders**
8. **11%**
9. **34%**
10. **erasers**