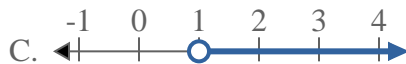
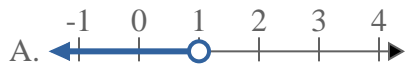


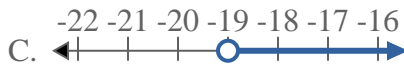


Solve each problem.

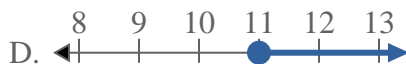
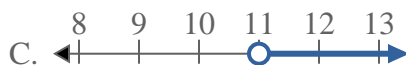
1) Which option best shows  $X \leq 1$



2) Which option best shows  $X < -19$



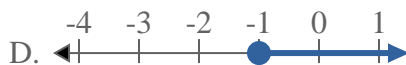
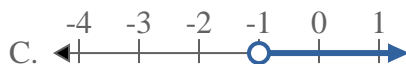
3) Which option best shows  $X \geq 11$



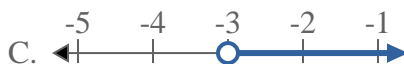
4) Which option best shows  $X \geq -4$



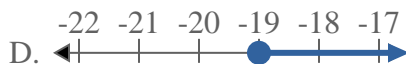
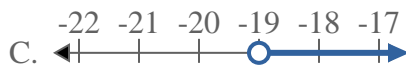
5) Which option best shows  $X \geq -1$



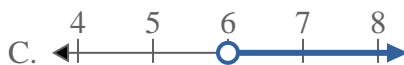
6) Which option best shows  $X \leq -3$



7) Which option best shows  $X > -19$



8) Which option best shows  $X > 6$



**Answers**

1. \_\_\_\_\_

2. \_\_\_\_\_

3. \_\_\_\_\_

4. \_\_\_\_\_

5. \_\_\_\_\_

6. \_\_\_\_\_

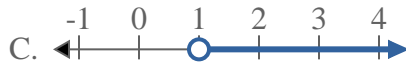
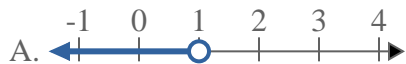
7. \_\_\_\_\_

8. \_\_\_\_\_



Solve each problem.

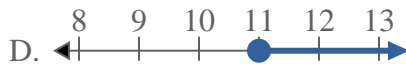
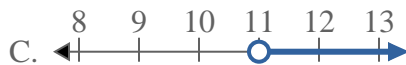
1) Which option best shows  $X \leq 1$



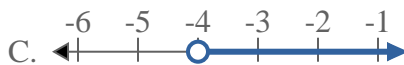
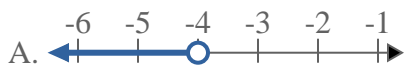
2) Which option best shows  $X < -19$



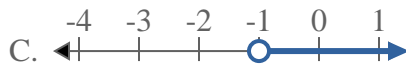
3) Which option best shows  $X \geq 11$



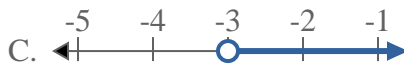
4) Which option best shows  $X \geq -4$



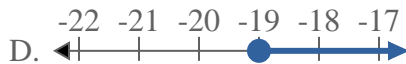
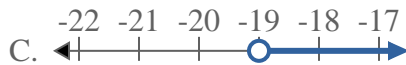
5) Which option best shows  $X \geq -1$



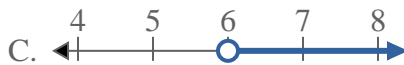
6) Which option best shows  $X \leq -3$



7) Which option best shows  $X > -19$



8) Which option best shows  $X > 6$



**Answers**

1. **B**

2. **A**

3. **D**

4. **D**

5. **D**

6. **B**

7. **C**

8. **C**