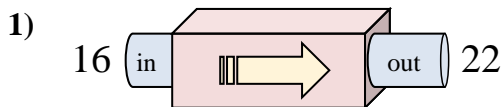


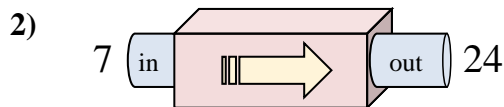


Determine which rule the function machine is using.

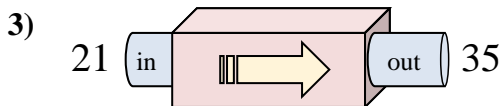
Answers



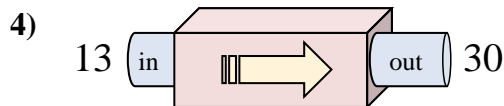
- A. Add 11
- B. Add 7
- C. Add 6
- D. Add 5



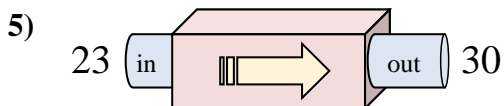
- A. Add 17
- B. Add 18
- C. Subtract 14
- D. Subtract 18



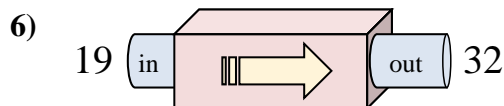
- A. Subtract 11
- B. Add 18
- C. Add 14
- D. Subtract 15



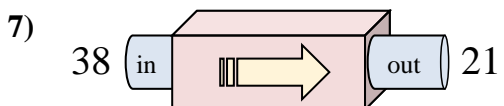
- A. Add 18
- B. Add 21
- C. Add 17
- D. Subtract 19



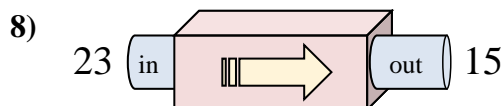
- A. Subtract 11
- B. Add 7
- C. Subtract 3
- D. Add 4



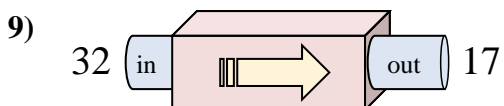
- A. Subtract 13
- B. Add 13
- C. Add 17
- D. Subtract 8



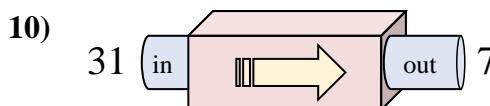
- A. Subtract 18
- B. Subtract 17
- C. Add 13
- D. Subtract 14



- A. Subtract 9
- B. Subtract 11
- C. Subtract 8
- D. Add 9



- A. Subtract 11
- B. Subtract 15
- C. Add 10
- D. Subtract 20

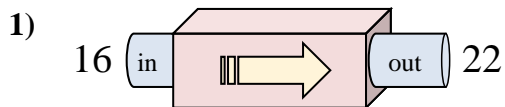


- A. Subtract 19
- B. Subtract 25
- C. Subtract 24
- D. Add 22

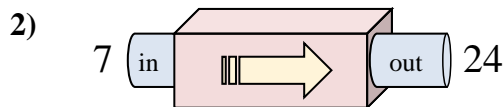
1. _____
2. _____
3. _____
4. _____
5. _____
6. _____
7. _____
8. _____
9. _____
10. _____



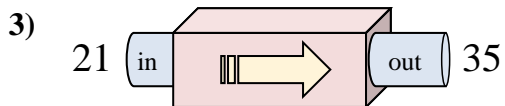
Determine which rule the function machine is using.



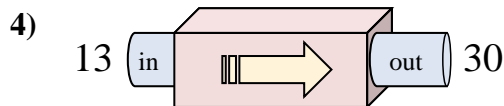
- A. Add 11
- B. Add 7
- C. Add 6
- D. Add 5



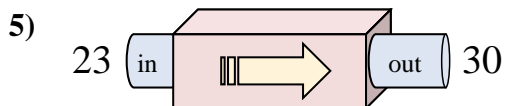
- A. Add 17
- B. Add 18
- C. Subtract 14
- D. Subtract 18



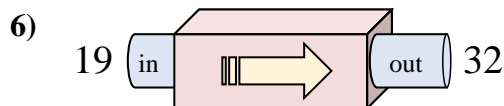
- A. Subtract 11
- B. Add 18
- C. Add 14
- D. Subtract 15



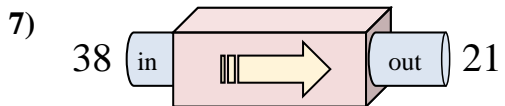
- A. Add 18
- B. Add 21
- C. Add 17
- D. Subtract 19



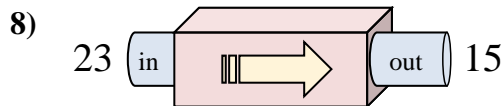
- A. Subtract 11
- B. Add 7
- C. Subtract 3
- D. Add 4



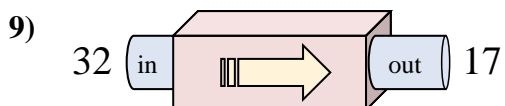
- A. Subtract 13
- B. Add 13
- C. Add 17
- D. Subtract 8



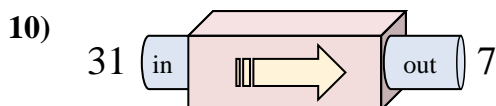
- A. Subtract 18
- B. Subtract 17
- C. Add 13
- D. Subtract 14



- A. Subtract 9
- B. Subtract 11
- C. Subtract 8
- D. Add 9



- A. Subtract 11
- B. Subtract 15
- C. Add 10
- D. Subtract 20



- A. Subtract 19
- B. Subtract 25
- C. Subtract 24
- D. Add 22

Answers

- 1. **C**
- 2. **A**
- 3. **C**
- 4. **C**
- 5. **B**
- 6. **B**
- 7. **B**
- 8. **C**
- 9. **B**
- 10. **C**