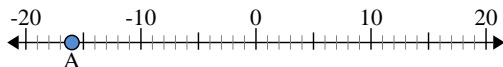




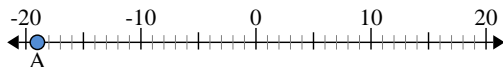
Use the numberlines to find the absolute value.

1) a. What is the value of 'A'?



b. How far is 'A' from 0 (absolute value)?

2) a. What is the value of 'A'?



b. How far is 'A' from 0 (absolute value)?

3) a. What is the value of 'A'?



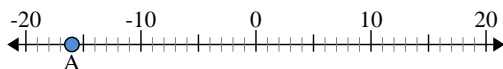
Answers

- 1. _____
- 2. _____
- 3. _____
- 4. _____
- 5. _____
- 6. _____
- 7. _____
- 8. _____
- 9. _____
- 10. _____



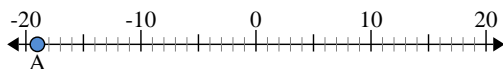
Use the numberlines to find the absolute value.

1) a. What is the value of 'A'?



b. How far is 'A' from 0 (absolute value)?

2) a. What is the value of 'A'?



b. How far is 'A' from 0 (absolute value)?

3) a. What is the value of 'A'?



Answers

1. -16 16

2. -19 19

3. -1 1

4. 7 7

5. -8 8

6. -10 10

7. 20 20

8. 2 2

9. -6 6

10. 9 9