




Solve each problem.


**Answers**

1) Which letter best shows -27?




1. \_\_\_\_\_

2) Which letter best shows -16?




2. \_\_\_\_\_

3) Which letter best shows -18?



3. \_\_\_\_\_

4) Which letter best shows -15?




4. \_\_\_\_\_

5) Which letter best shows -91?




5. \_\_\_\_\_

6) Which letter best shows -75?




6. \_\_\_\_\_

7) Which letter best shows -81?



7. \_\_\_\_\_

8) Which letter best shows -10?




8. \_\_\_\_\_

9) Which letter best shows -59?



9. \_\_\_\_\_

10) Which letter best shows -87?




10. \_\_\_\_\_

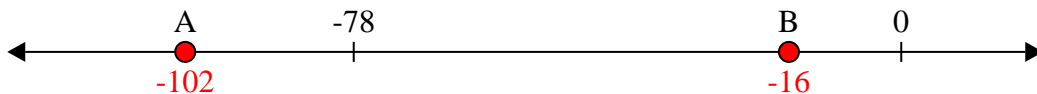


Solve each problem.

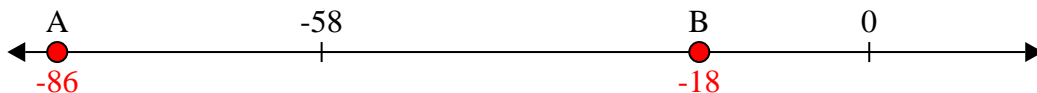
1) Which letter best shows -27?



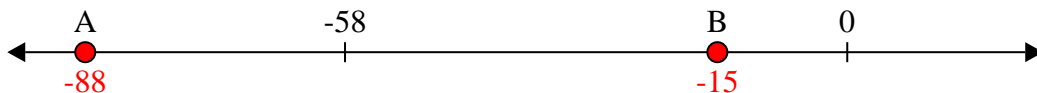
2) Which letter best shows -16?




3) Which letter best shows -18?



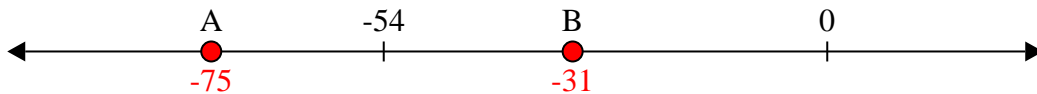
4) Which letter best shows -15?




5) Which letter best shows -91?




6) Which letter best shows -75?



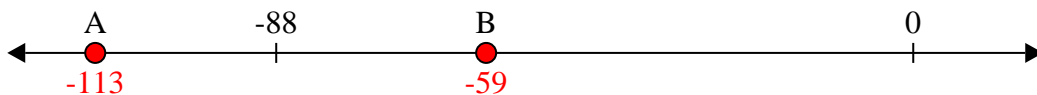
7) Which letter best shows -81?



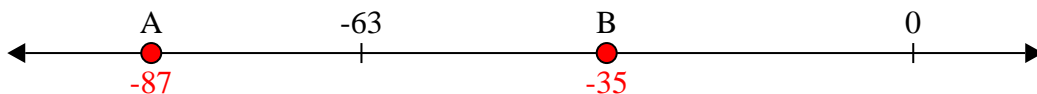
8) Which letter best shows -10?



9) Which letter best shows -59?



10) Which letter best shows -87?



**Answers**

1. **B**

2. **B**

3. **B**

4. **B**

5. **A**

6. **A**

7. **A**

8. **B**

9. **B**


10. **A**



Solve each problem.


**Answers**

1) Which letter best shows -28?



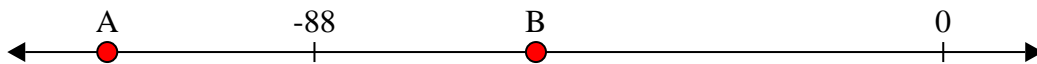
1. \_\_\_\_\_

2) Which letter best shows -26?



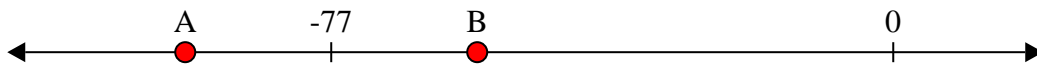
2. \_\_\_\_\_

3) Which letter best shows -117?



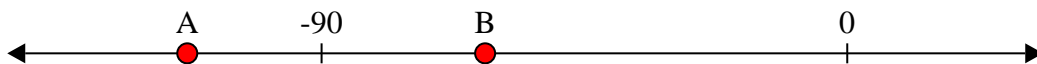
3. \_\_\_\_\_

4) Which letter best shows -97?



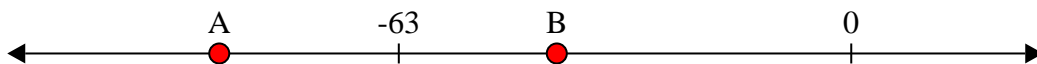
4. \_\_\_\_\_

5) Which letter best shows -113?



5. \_\_\_\_\_

6) Which letter best shows -88?




6. \_\_\_\_\_

7) Which letter best shows -22?




7. \_\_\_\_\_

8) Which letter best shows -25?




8. \_\_\_\_\_

9) Which letter best shows -82?



9. \_\_\_\_\_

10) Which letter best shows -120?




10. \_\_\_\_\_

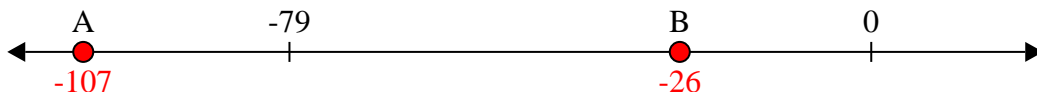


Solve each problem.

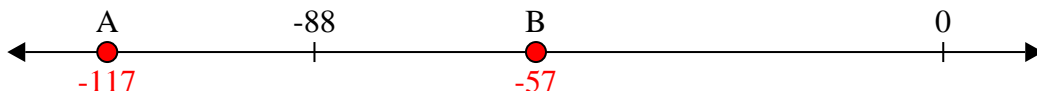
1) Which letter best shows -28?



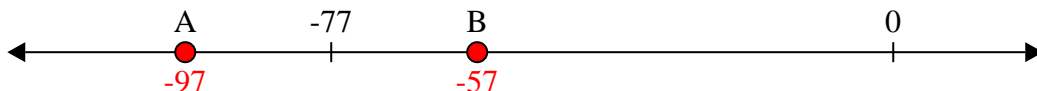
2) Which letter best shows -26?



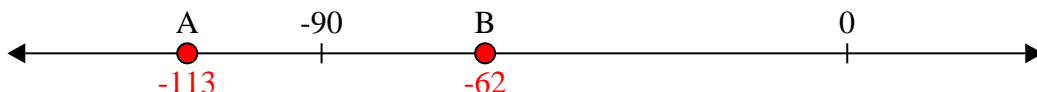
3) Which letter best shows -117?



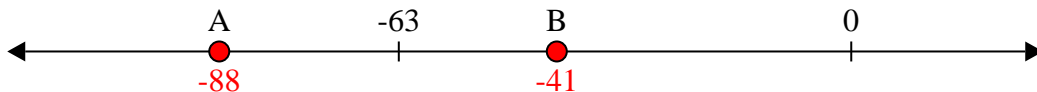
4) Which letter best shows -97?




5) Which letter best shows -113?



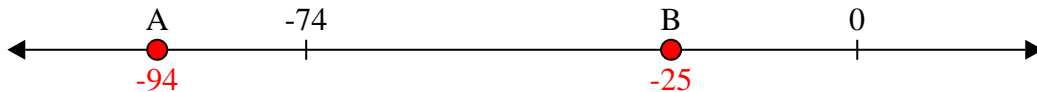
6) Which letter best shows -88?




7) Which letter best shows -22?



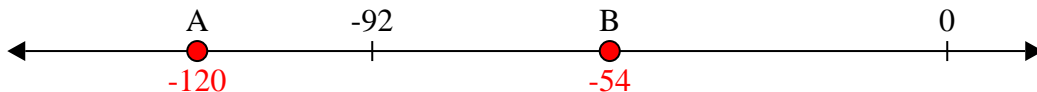
8) Which letter best shows -25?



9) Which letter best shows -82?



10) Which letter best shows -120?



**Answers**

1. **B**

2. **B**

3. **A**

4. **A**

5. **A**

6. **A**

7. **B**

8. **B**

9. **A**


10. **A**



Solve each problem.


**Answers**

1) Which letter best shows -37?



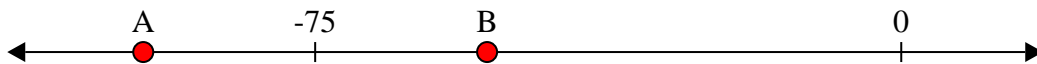
1. \_\_\_\_\_

2) Which letter best shows -113?




2. \_\_\_\_\_

3) Which letter best shows -97?



3. \_\_\_\_\_

4) Which letter best shows -80?



4. \_\_\_\_\_

5) Which letter best shows -40?



5. \_\_\_\_\_

6) Which letter best shows -101?




6. \_\_\_\_\_

7) Which letter best shows -22?




7. \_\_\_\_\_

8) Which letter best shows -105?




8. \_\_\_\_\_

9) Which letter best shows -115?



9. \_\_\_\_\_

10) Which letter best shows -97?

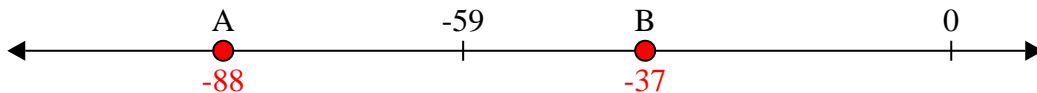


10. \_\_\_\_\_

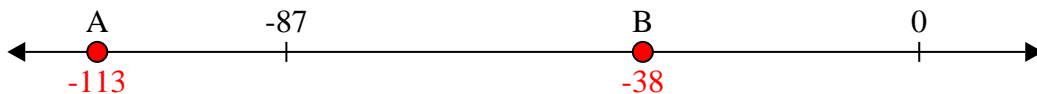


Solve each problem.

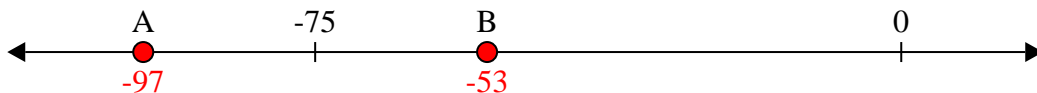
1) Which letter best shows -37?



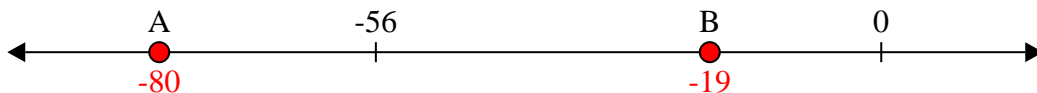
2) Which letter best shows -113?




3) Which letter best shows -97?




4) Which letter best shows -80?




5) Which letter best shows -40?




6) Which letter best shows -101?




7) Which letter best shows -22?



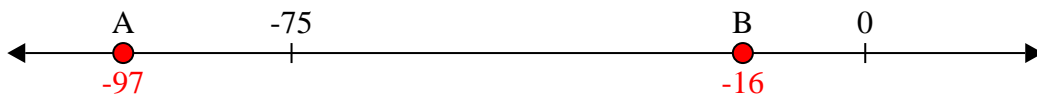
8) Which letter best shows -105?



9) Which letter best shows -115?



10) Which letter best shows -97?



**Answers**

1. **B**

2. **A**

3. **A**

4. **A**

5. **B**

6. **A**

7. **B**

8. **A**

9. **A**


10. **A**



Solve each problem.

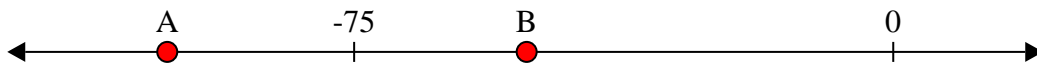
**Answers**

1) Which letter best shows -24?




1. \_\_\_\_\_

2) Which letter best shows -101?



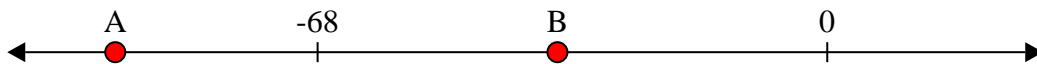
2. \_\_\_\_\_

3) Which letter best shows -83?



3. \_\_\_\_\_

4) Which letter best shows -95?



4. \_\_\_\_\_

5) Which letter best shows -86?



5. \_\_\_\_\_

6) Which letter best shows -112?




6. \_\_\_\_\_

7) Which letter best shows -79?




7. \_\_\_\_\_

8) Which letter best shows -10?



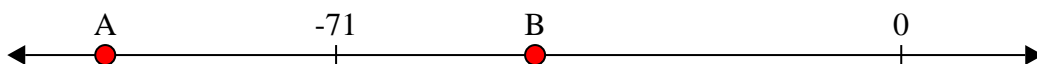
8. \_\_\_\_\_

9) Which letter best shows -27?



9. \_\_\_\_\_

10) Which letter best shows -100?




10. \_\_\_\_\_

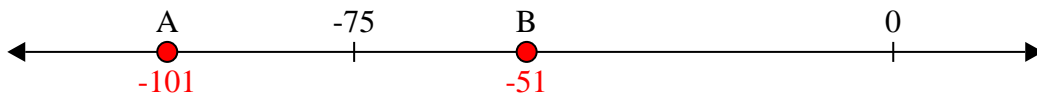


Solve each problem.

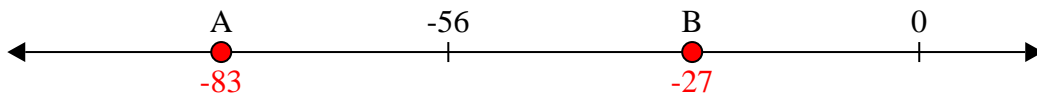
1) Which letter best shows -24?



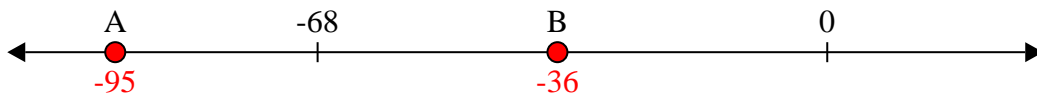
2) Which letter best shows -101?




3) Which letter best shows -83?




4) Which letter best shows -95?



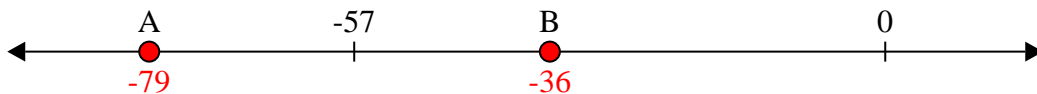
5) Which letter best shows -86?




6) Which letter best shows -112?




7) Which letter best shows -79?



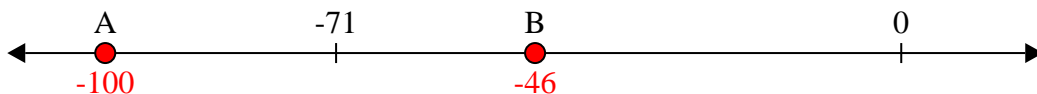
8) Which letter best shows -10?



9) Which letter best shows -27?



10) Which letter best shows -100?



**Answers**

1. **B**

2. **A**

3. **A**

4. **A**

5. **A**

6. **A**

7. **A**

8. **B**

9. **B**

10. **A**






Solve each problem.

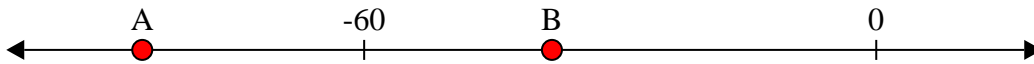
**Answers**

1) Which letter best shows -11?




1. \_\_\_\_\_

2) Which letter best shows -38?




2. \_\_\_\_\_

3) Which letter best shows -78?



3. \_\_\_\_\_

4) Which letter best shows -28?



4. \_\_\_\_\_

5) Which letter best shows -109?



5. \_\_\_\_\_

6) Which letter best shows -68?




6. \_\_\_\_\_

7) Which letter best shows -10?



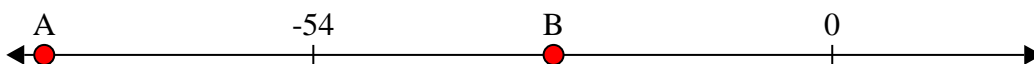
7. \_\_\_\_\_

8) Which letter best shows -20?




8. \_\_\_\_\_

9) Which letter best shows -82?



9. \_\_\_\_\_

10) Which letter best shows -79?




10. \_\_\_\_\_

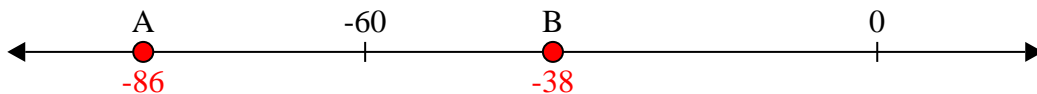


Solve each problem.

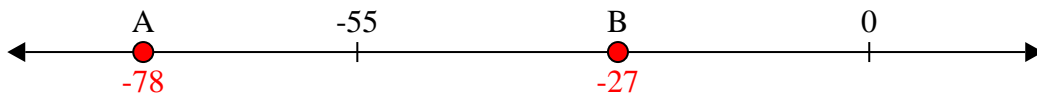
1) Which letter best shows -11?



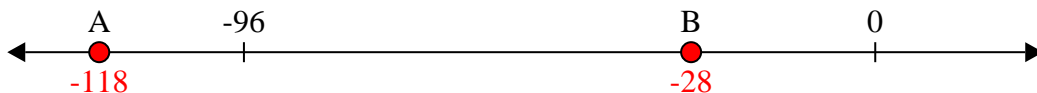
2) Which letter best shows -38?




3) Which letter best shows -78?



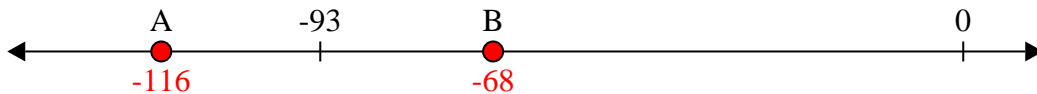
4) Which letter best shows -28?



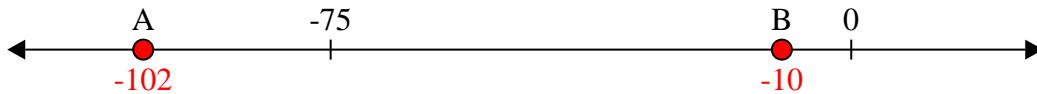
5) Which letter best shows -109?



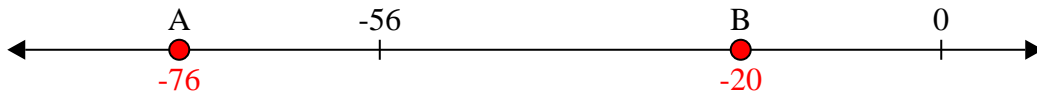
6) Which letter best shows -68?



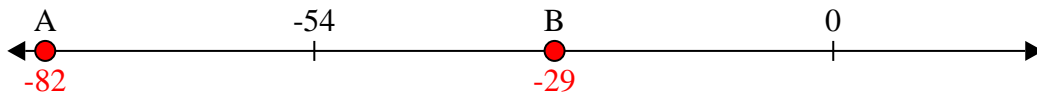
7) Which letter best shows -10?



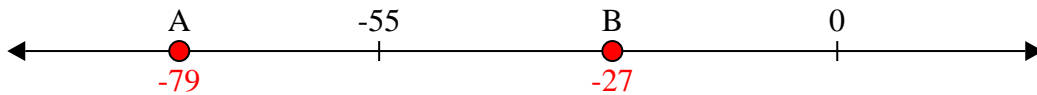
8) Which letter best shows -20?



9) Which letter best shows -82?



10) Which letter best shows -79?



**Answers**

1. **B**

2. **B**

3. **A**

4. **B**

5. **A**

6. **B**

7. **B**

8. **B**

9. **A**


10. **A**



Solve each problem.


**Answers**

1) Which letter best shows -98?




1. \_\_\_\_\_

2) Which letter best shows -39?




2. \_\_\_\_\_

3) Which letter best shows -20?



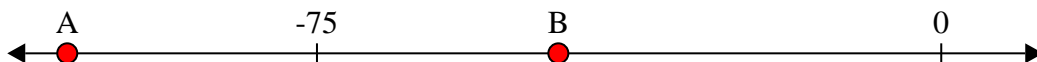
3. \_\_\_\_\_

4) Which letter best shows -11?



4. \_\_\_\_\_

5) Which letter best shows -105?



5. \_\_\_\_\_

6) Which letter best shows -106?




6. \_\_\_\_\_

7) Which letter best shows -12?




7. \_\_\_\_\_

8) Which letter best shows -111?




8. \_\_\_\_\_

9) Which letter best shows -12?



9. \_\_\_\_\_

10) Which letter best shows -28?

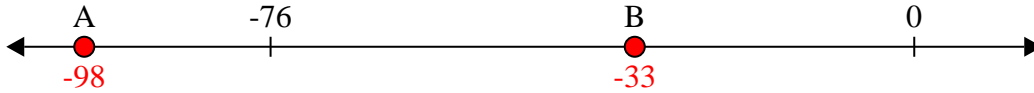


10. \_\_\_\_\_

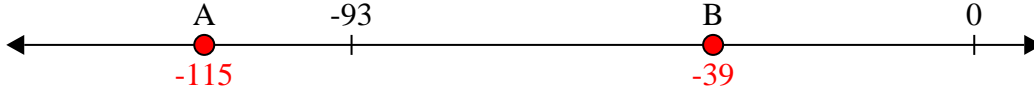


Solve each problem.

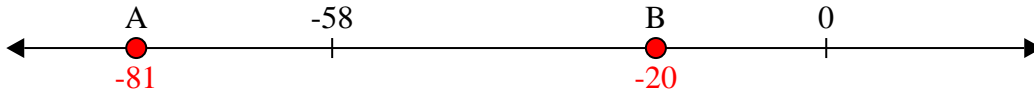
1) Which letter best shows -98?



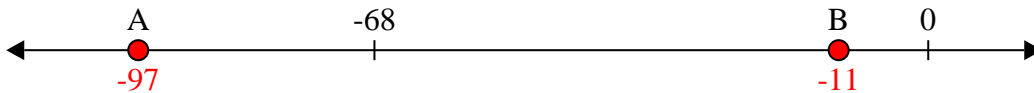
2) Which letter best shows -39?



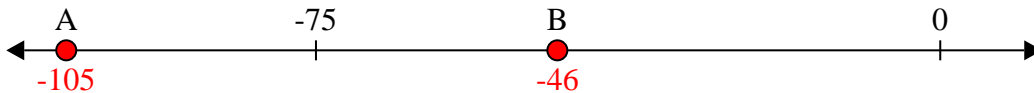
3) Which letter best shows -20?



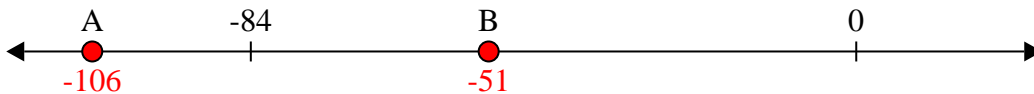
4) Which letter best shows -11?




5) Which letter best shows -105?




6) Which letter best shows -106?




7) Which letter best shows -12?




8) Which letter best shows -111?



9) Which letter best shows -12?



10) Which letter best shows -28?



**Answers**

1. **A**

2. **B**

3. **B**

4. **B**

5. **A**

6. **A**

7. **B**

8. **A**

9. **B**


10. **B**



Solve each problem.


**Answers**

1) Which letter best shows -128?




1. \_\_\_\_\_

2) Which letter best shows -114?



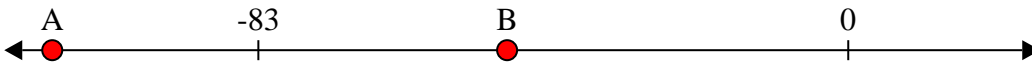
2. \_\_\_\_\_

3) Which letter best shows -76?




3. \_\_\_\_\_

4) Which letter best shows -48?




4. \_\_\_\_\_

5) Which letter best shows -47?




5. \_\_\_\_\_

6) Which letter best shows -115?



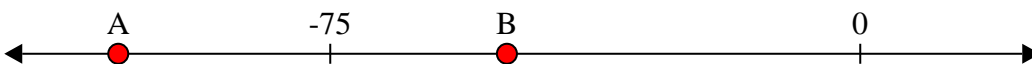
6. \_\_\_\_\_

7) Which letter best shows -115?




7. \_\_\_\_\_

8) Which letter best shows -105?




8. \_\_\_\_\_

9) Which letter best shows -10?



9. \_\_\_\_\_

10) Which letter best shows -82?



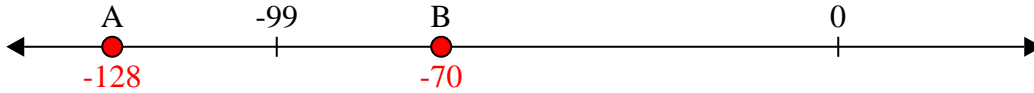
10. \_\_\_\_\_



Solve each problem.

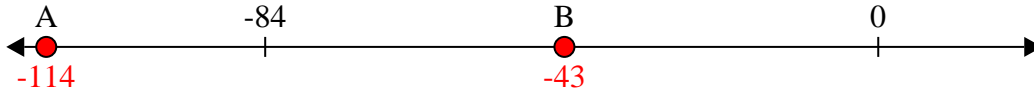
**Answers**

1) Which letter best shows -128?



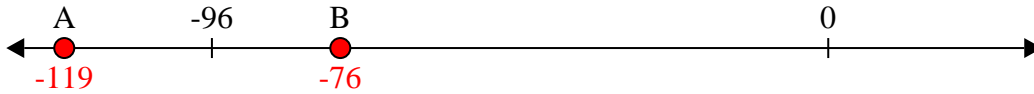
1.   **A**  

2) Which letter best shows -114?



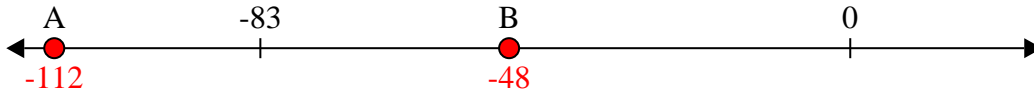
2.   **A**  

3) Which letter best shows -76?



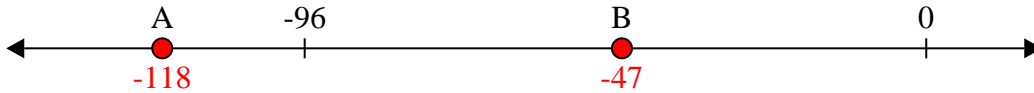
3.   **B**  

4) Which letter best shows -48?



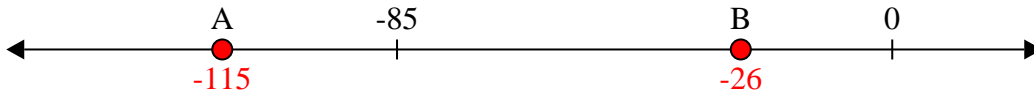
4.   **B**  

5) Which letter best shows -47?



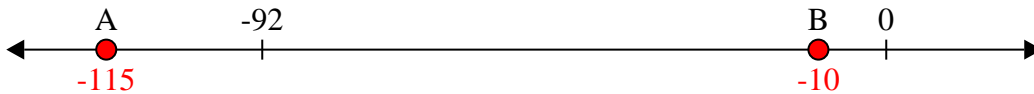
5.   **B**  

6) Which letter best shows -115?



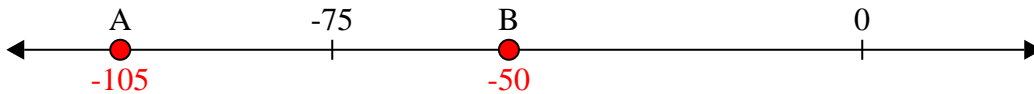
6.   **A**  

7) Which letter best shows -115?



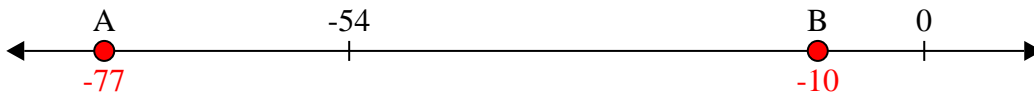
7.   **A**  

8) Which letter best shows -105?



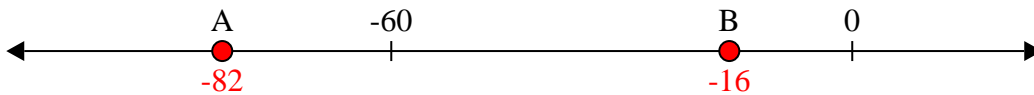
8.   **A**  

9) Which letter best shows -10?



9.   **B**  

10) Which letter best shows -82?



10.   **A**



Solve each problem.


**Answers**

1) Which letter best shows -32?




1. \_\_\_\_\_

2) Which letter best shows -114?




2. \_\_\_\_\_

3) Which letter best shows -117?



3. \_\_\_\_\_

4) Which letter best shows -111?



4. \_\_\_\_\_

5) Which letter best shows -33?



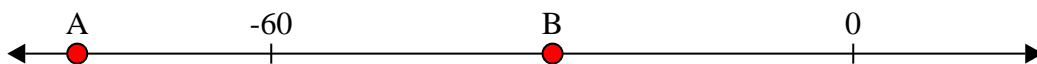
5. \_\_\_\_\_

6) Which letter best shows -29?




6. \_\_\_\_\_

7) Which letter best shows -80?



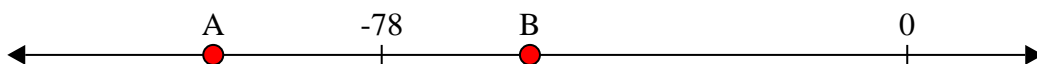
7. \_\_\_\_\_

8) Which letter best shows -86?




8. \_\_\_\_\_

9) Which letter best shows -56?



9. \_\_\_\_\_

10) Which letter best shows -24?

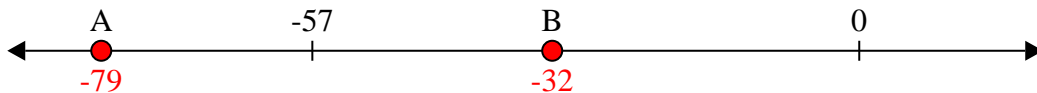


10. \_\_\_\_\_

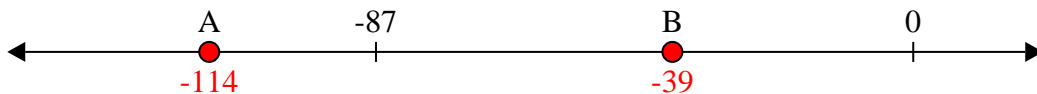


Solve each problem.

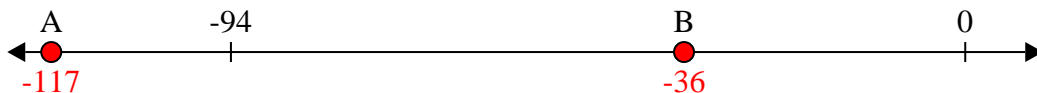
1) Which letter best shows -32?



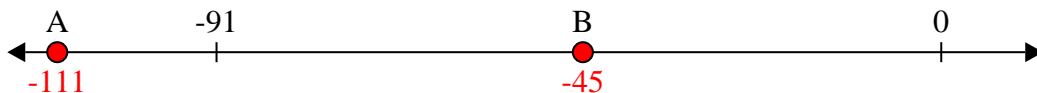
2) Which letter best shows -114?




3) Which letter best shows -117?




4) Which letter best shows -111?



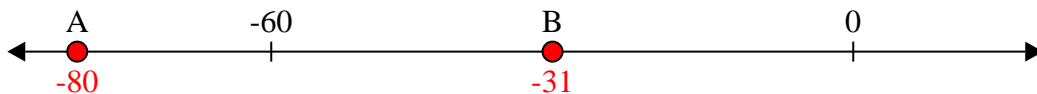
5) Which letter best shows -33?




6) Which letter best shows -29?



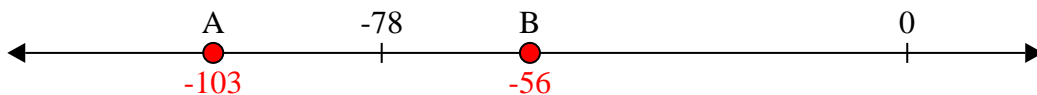
7) Which letter best shows -80?



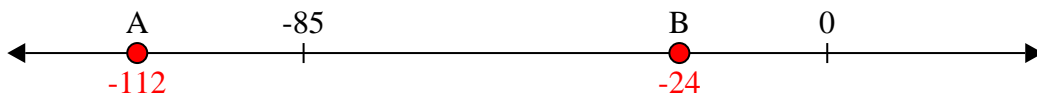
8) Which letter best shows -86?



9) Which letter best shows -56?



10) Which letter best shows -24?



**Answers**

1. **B**

2. **A**

3. **A**

4. **A**

5. **B**

6. **B**

7. **A**

8. **A**

9. **B**

10. **B**






Solve each problem.


**Answers**

1) Which letter best shows -29?




1. \_\_\_\_\_

2) Which letter best shows -120?




2. \_\_\_\_\_

3) Which letter best shows -118?




3. \_\_\_\_\_

4) Which letter best shows -14?




4. \_\_\_\_\_

5) Which letter best shows -109?




5. \_\_\_\_\_

6) Which letter best shows -28?




6. \_\_\_\_\_

7) Which letter best shows -21?




7. \_\_\_\_\_

8) Which letter best shows -14?




8. \_\_\_\_\_

9) Which letter best shows -13?



9. \_\_\_\_\_

10) Which letter best shows -114?

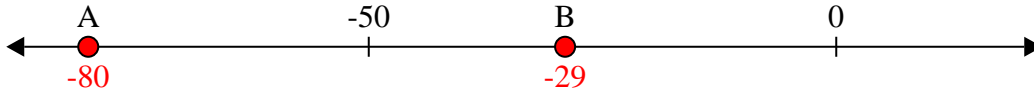


10. \_\_\_\_\_

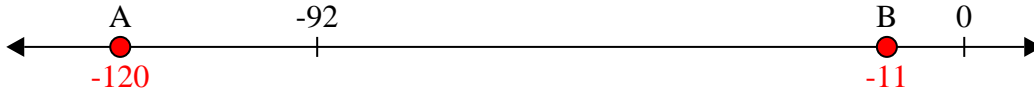


Solve each problem.

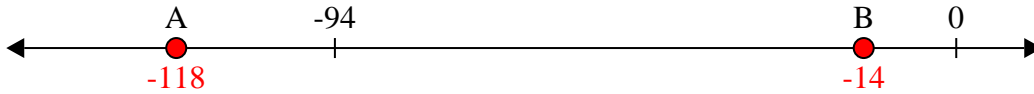
1) Which letter best shows -29?



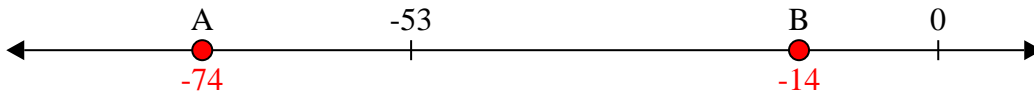
2) Which letter best shows -120?



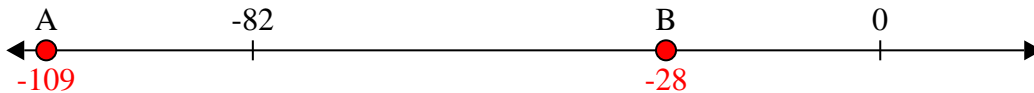
3) Which letter best shows -118?




4) Which letter best shows -14?




5) Which letter best shows -109?




6) Which letter best shows -28?




7) Which letter best shows -21?



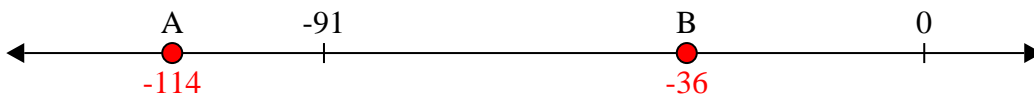
8) Which letter best shows -14?



9) Which letter best shows -13?



10) Which letter best shows -114?



**Answers**


1.     **B**
2.     **A**
3.     **A**
4.     **B**
5.     **A**
6.     **B**
7.     **B**
8.     **B**
9.     **B**
10.     **A**



Solve each problem.


**Answers**

1) Which letter best shows -101?




1. \_\_\_\_\_

2) Which letter best shows -42?




2. \_\_\_\_\_

3) Which letter best shows -76?




3. \_\_\_\_\_

4) Which letter best shows -110?




4. \_\_\_\_\_

5) Which letter best shows -106?




5. \_\_\_\_\_

6) Which letter best shows -114?




6. \_\_\_\_\_

7) Which letter best shows -21?




7. \_\_\_\_\_

8) Which letter best shows -20?




8. \_\_\_\_\_

9) Which letter best shows -79?



9. \_\_\_\_\_

10) Which letter best shows -97?




10. \_\_\_\_\_

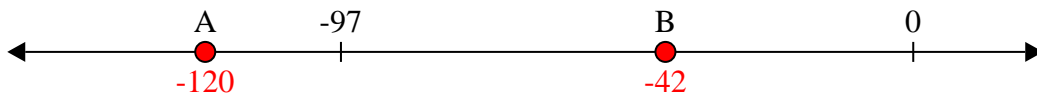


Solve each problem.

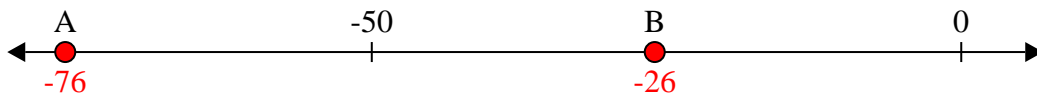
1) Which letter best shows -101?




2) Which letter best shows -42?




3) Which letter best shows -76?




4) Which letter best shows -110?




5) Which letter best shows -106?




6) Which letter best shows -114?




7) Which letter best shows -21?



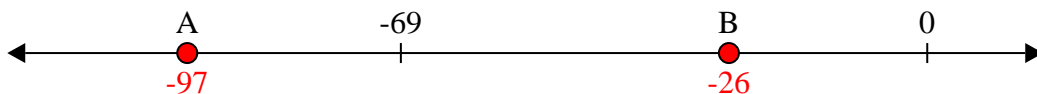
8) Which letter best shows -20?



9) Which letter best shows -79?



10) Which letter best shows -97?



**Answers**

1.   **A**  

2.   **B**  

3.   **A**  

4.   **A**  

5.   **A**  

6.   **A**  

7.   **B**  

8.   **B**  

9.   **A**  

10.   **A**