



Solve each problem.


Answers

- 1) Which letter best shows -32?




1. _____

- 2) Which letter best shows -114?




2. _____

- 3) Which letter best shows -117?




3. _____

- 4) Which letter best shows -111?




4. _____

- 5) Which letter best shows -33?



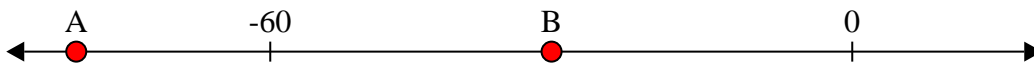
5. _____

- 6) Which letter best shows -29?




6. _____

- 7) Which letter best shows -80?



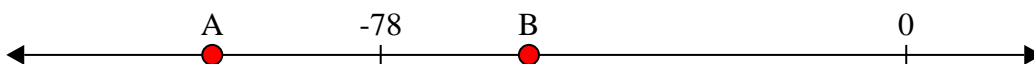
7. _____

- 8) Which letter best shows -86?




8. _____

- 9) Which letter best shows -56?



9. _____

- 10) Which letter best shows -24?



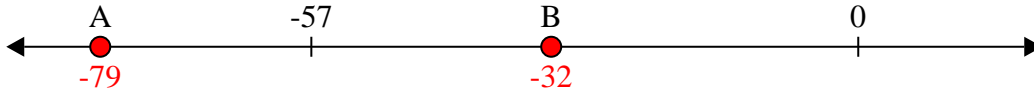
10. _____



Solve each problem.

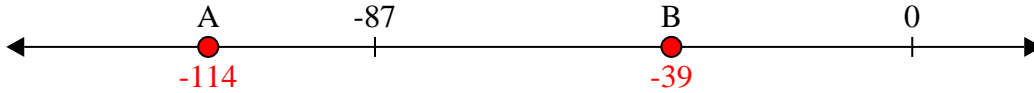
Answers

1) Which letter best shows -32?



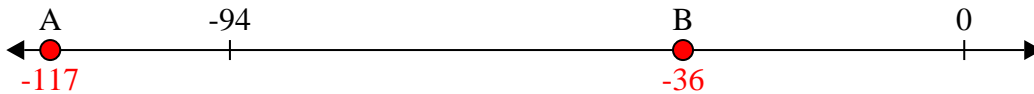
1. **B**

2) Which letter best shows -114?



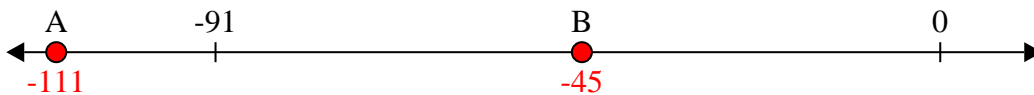
2. **A**

3) Which letter best shows -117?




3. **A**

4) Which letter best shows -111?




4. **A**

5) Which letter best shows -33?



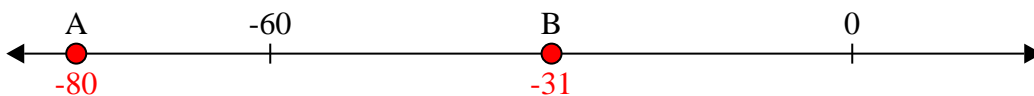
5. **B**

6) Which letter best shows -29?




6. **B**

7) Which letter best shows -80?



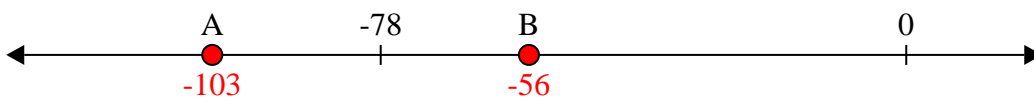
7. **A**

8) Which letter best shows -86?



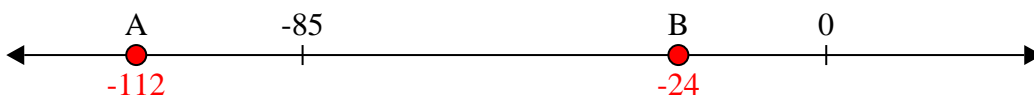
8. **A**

9) Which letter best shows -56?



9. **B**

10) Which letter best shows -24?



10. **B**