




Solve each problem.


**Answers**

1) Which letter best shows -98?




1. \_\_\_\_\_

2) Which letter best shows -39?



2. \_\_\_\_\_

3) Which letter best shows -20?



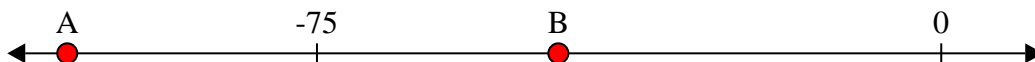
3. \_\_\_\_\_

4) Which letter best shows -11?




4. \_\_\_\_\_

5) Which letter best shows -105?



5. \_\_\_\_\_

6) Which letter best shows -106?




6. \_\_\_\_\_

7) Which letter best shows -12?




7. \_\_\_\_\_

8) Which letter best shows -111?




8. \_\_\_\_\_

9) Which letter best shows -12?



9. \_\_\_\_\_

10) Which letter best shows -28?

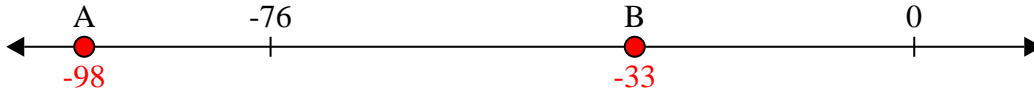


10. \_\_\_\_\_

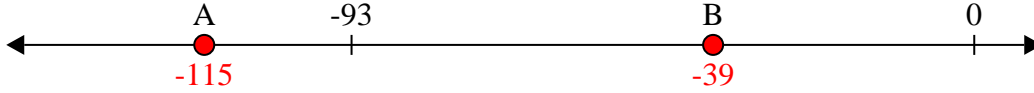


Solve each problem.

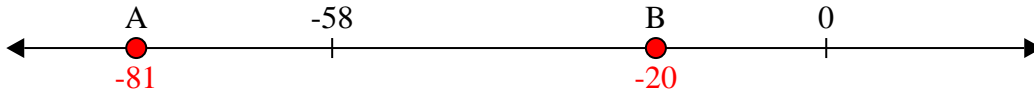
1) Which letter best shows -98?



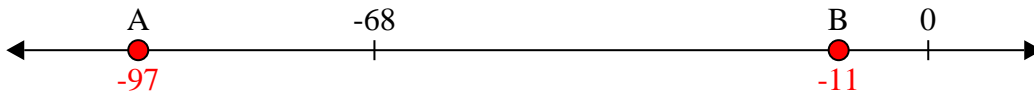
2) Which letter best shows -39?



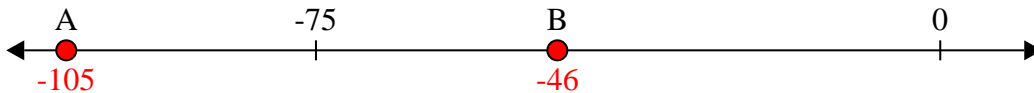
3) Which letter best shows -20?



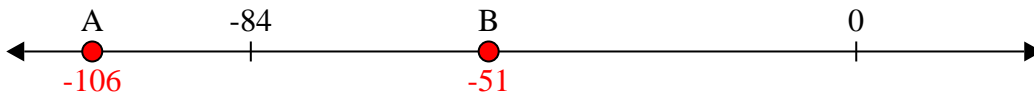
4) Which letter best shows -11?




5) Which letter best shows -105?




6) Which letter best shows -106?




7) Which letter best shows -12?




8) Which letter best shows -111?



9) Which letter best shows -12?



10) Which letter best shows -28?



**Answers**

1.   **A**  

2.   **B**  

3.   **B**  

4.   **B**  

5.   **A**  

6.   **A**  

7.   **B**  

8.   **A**  

9.   **B**  

10.   **B**